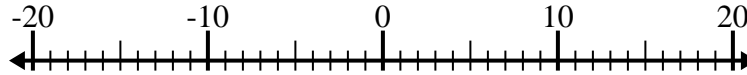


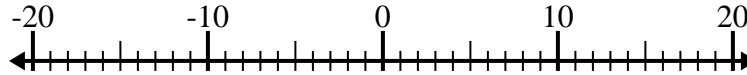


Löse jede Aufgabe. Benutze den Zahlenstrahl, falls du ihn brauchst.

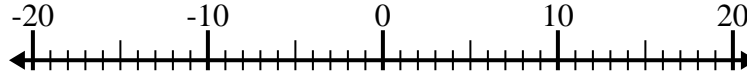
1) $6 - (-7) =$ _____



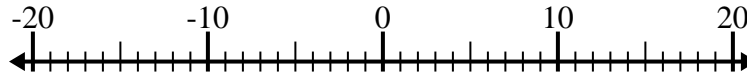
2) $7 + (-5) =$ _____



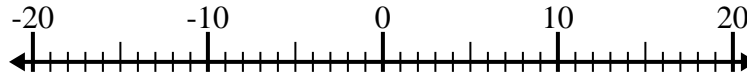
3) $(-5) + (-12) =$ _____



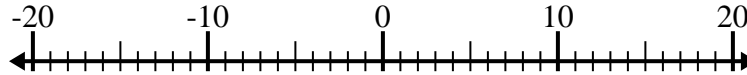
4) $(-1) - (-5) =$ _____



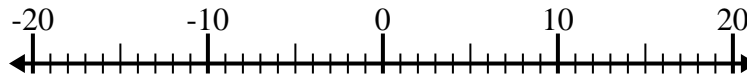
5) $(-2) + 4 =$ _____



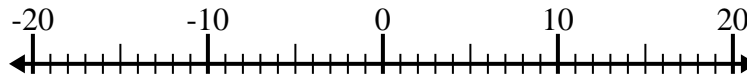
6) $(-8) + 6 =$ _____



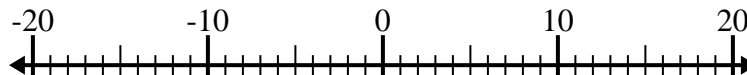
7) $5 - (-11) =$ _____



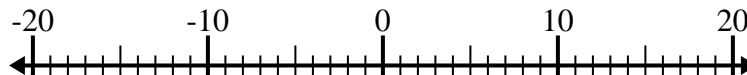
8) $(-5) - 2 =$ _____



9) $(-1) - 4 =$ _____



10) $(-4) + (-5) =$ _____

Antworten

1. _____

2. _____

3. _____

4. _____

5. _____

6. _____

7. _____

8. _____

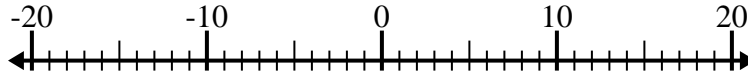
9. _____

10. _____

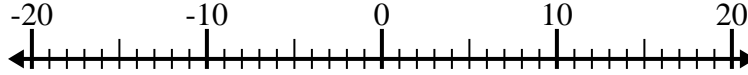


Löse jede Aufgabe. Benutze den Zahlenstrahl, falls du ihn brauchst.

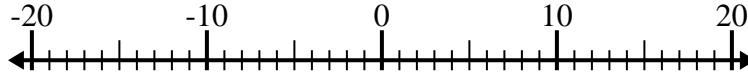
1) $6 - (-7) = \underline{13}$



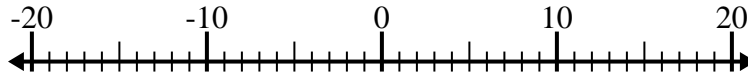
2) $7 + (-5) = \underline{2}$



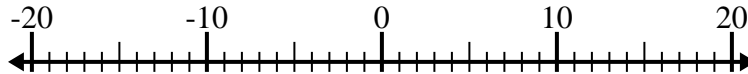
3) $(-5) + (-12) = \underline{-17}$



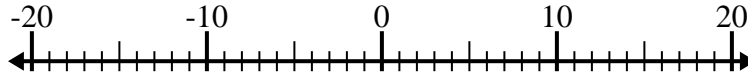
4) $(-1) - (-5) = \underline{4}$



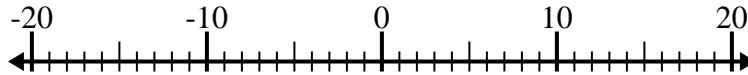
5) $(-2) + 4 = \underline{2}$



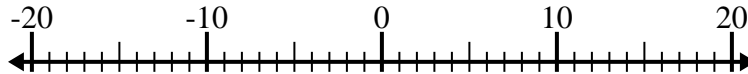
6) $(-8) + 6 = \underline{-2}$



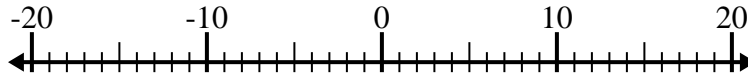
7) $5 - (-11) = \underline{16}$



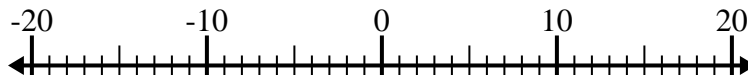
8) $(-5) - 2 = \underline{-7}$



9) $(-1) - 4 = \underline{-5}$



10) $(-4) + (-5) = \underline{-9}$

Antworten1. 132. 23. -174. 45. 26. -27. 168. -79. -510. -9