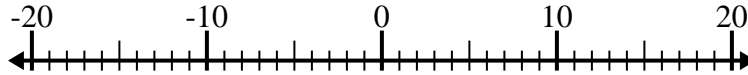


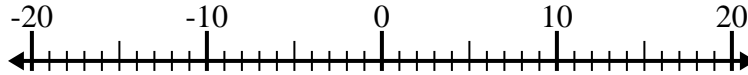


Löse jede Aufgabe. Benutze den Zahlenstrahl, falls du ihn brauchst.

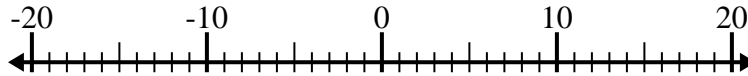
1)  $(-8) + 6 =$  \_\_\_\_\_



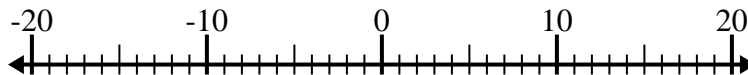
2)  $1 - (-10) =$  \_\_\_\_\_



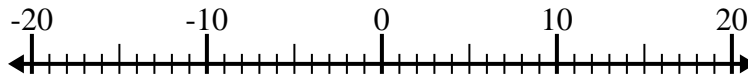
3)  $2 + (-7) =$  \_\_\_\_\_



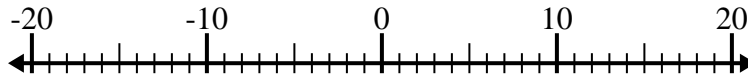
4)  $(-11) - 8 =$  \_\_\_\_\_



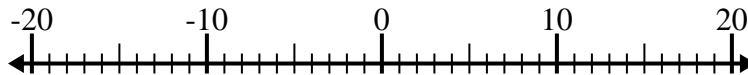
5)  $4 - (-10) =$  \_\_\_\_\_



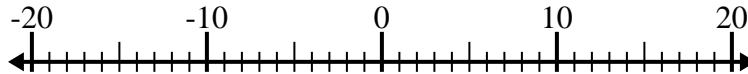
6)  $(-9) - (-13) =$  \_\_\_\_\_



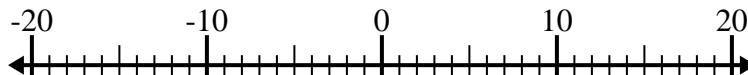
7)  $(-2) + 3 =$  \_\_\_\_\_



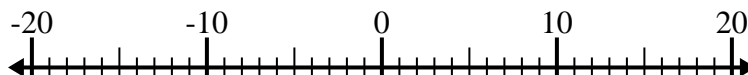
8)  $13 + (-5) =$  \_\_\_\_\_



9)  $(-6) + (-1) =$  \_\_\_\_\_



10)  $4 - (-9) =$  \_\_\_\_\_

**Antworten**

1. \_\_\_\_\_

2. \_\_\_\_\_

3. \_\_\_\_\_

4. \_\_\_\_\_

5. \_\_\_\_\_

6. \_\_\_\_\_

7. \_\_\_\_\_

8. \_\_\_\_\_

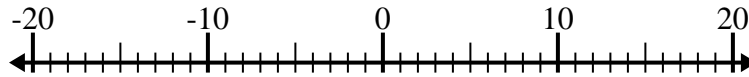
9. \_\_\_\_\_

10. \_\_\_\_\_

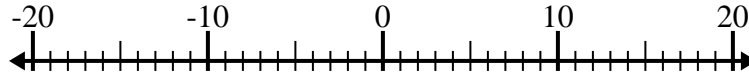


Löse jede Aufgabe. Benutze den Zahlenstrahl, falls du ihn brauchst.

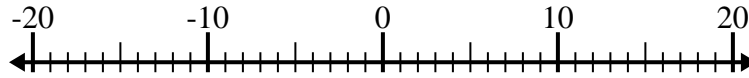
1)  $(-8) + 6 = \underline{-2}$



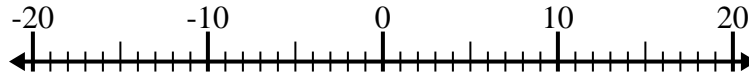
2)  $1 - (-10) = \underline{11}$



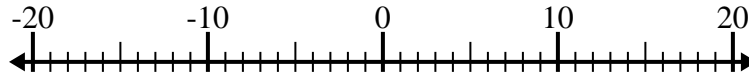
3)  $2 + (-7) = \underline{-5}$



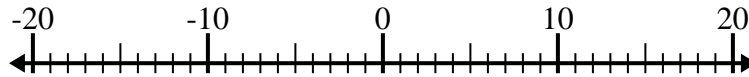
4)  $(-11) - 8 = \underline{-19}$



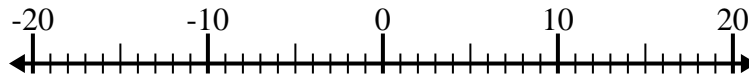
5)  $4 - (-10) = \underline{14}$



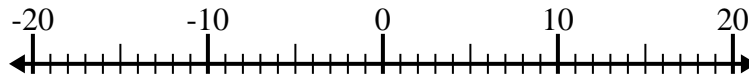
6)  $(-9) - (-13) = \underline{4}$



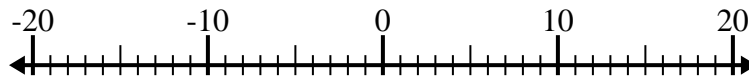
7)  $(-2) + 3 = \underline{1}$



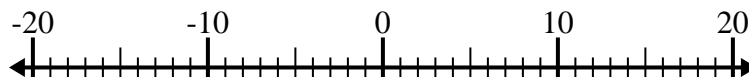
8)  $13 + (-5) = \underline{8}$



9)  $(-6) + (-1) = \underline{-7}$



10)  $4 - (-9) = \underline{13}$

**Antworten**1. **-2**2. **11**3. **-5**4. **-19**5. **14**6. **4**7. **1**8. **8**9. **-7**10. **13**