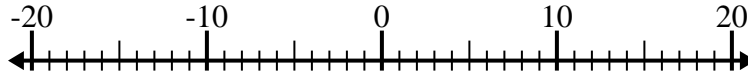


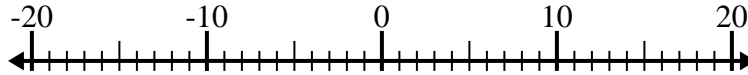


Löse jede Aufgabe. Benutze den Zahlenstrahl, falls du ihn brauchst.

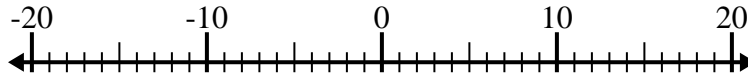
1) $2 - (-1) =$ _____



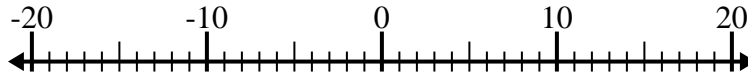
2) $12 + (-3) =$ _____



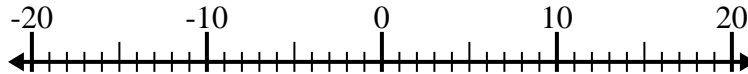
3) $10 - (-7) =$ _____



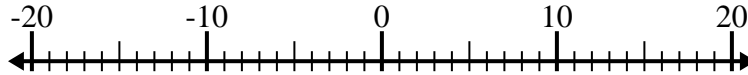
4) $(-1) - 4 =$ _____



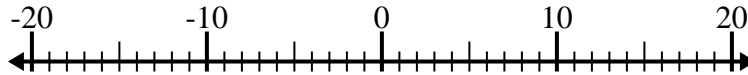
5) $(-4) + (-3) =$ _____



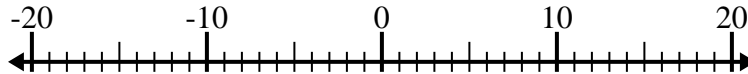
6) $5 - (-11) =$ _____



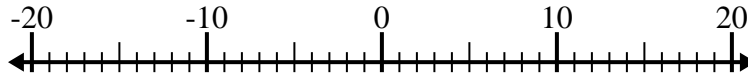
7) $1 + (-9) =$ _____



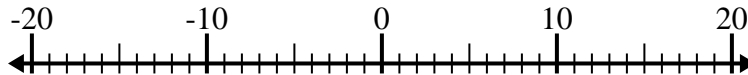
8) $(-15) + 12 =$ _____



9) $2 - (-5) =$ _____



10) $(-15) - (-13) =$ _____



Antworten

1. _____

2. _____

3. _____

4. _____

5. _____

6. _____

7. _____

8. _____

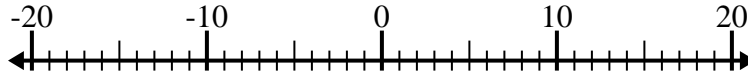
9. _____

10. _____

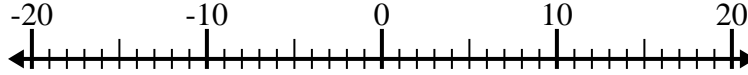


Löse jede Aufgabe. Benutze den Zahlenstrahl, falls du ihn brauchst.

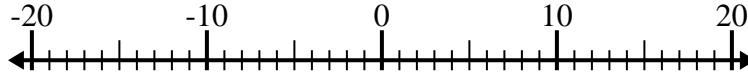
1) $2 - (-1) = \underline{3}$



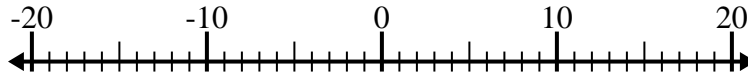
2) $12 + (-3) = \underline{9}$



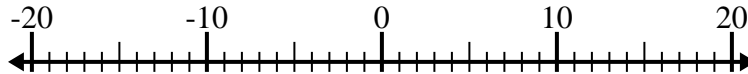
3) $10 - (-7) = \underline{17}$



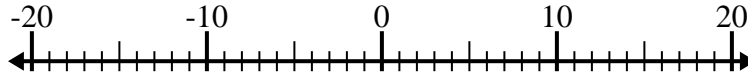
4) $(-1) - 4 = \underline{-5}$



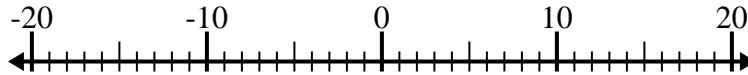
5) $(-4) + (-3) = \underline{-7}$



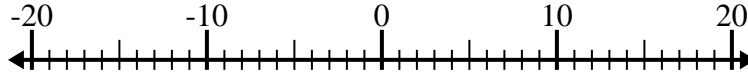
6) $5 - (-11) = \underline{16}$



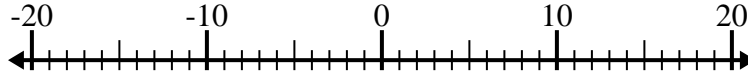
7) $1 + (-9) = \underline{-8}$



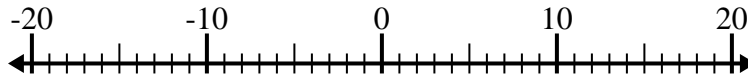
8) $(-15) + 12 = \underline{-3}$



9) $2 - (-5) = \underline{7}$



10) $(-15) - (-13) = \underline{-2}$



Antworten

1. 3

2. 9

3. 17

4. -5

5. -7

6. 16

7. -8

8. -3

9. 7

10. -2