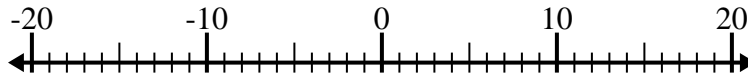


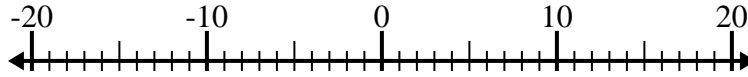


Löse jede Aufgabe. Benutze den Zahlenstrahl, falls du ihn brauchst.

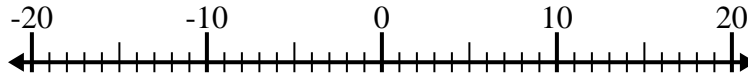
1) $7 + (-11) =$ _____



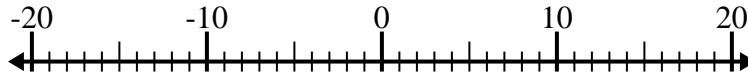
2) $(-9) - 4 =$ _____



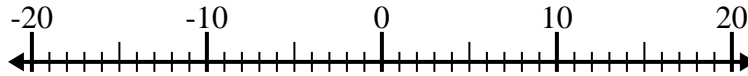
3) $13 - (-7) =$ _____



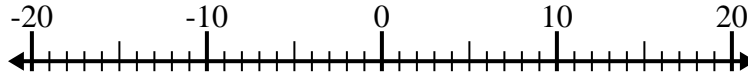
4) $11 - (-4) =$ _____



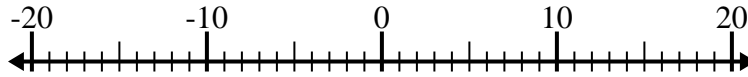
5) $5 - (-9) =$ _____



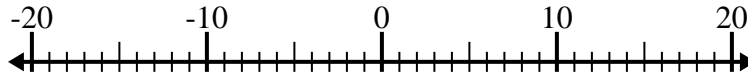
6) $(-1) - (-10) =$ _____



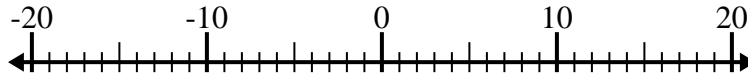
7) $(-6) - 9 =$ _____



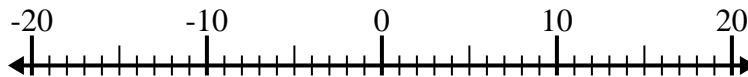
8) $(-2) - (-13) =$ _____



9) $(-10) + (-7) =$ _____



10) $1 - (-2) =$ _____



Antworten

1. _____

2. _____

3. _____

4. _____

5. _____

6. _____

7. _____

8. _____

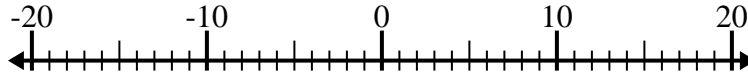
9. _____

10. _____

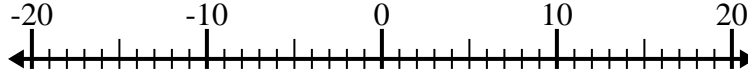


Löse jede Aufgabe. Benutze den Zahlenstrahl, falls du ihn brauchst.

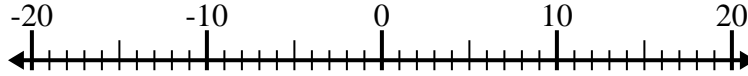
1) $7 + (-11) = \underline{-4}$



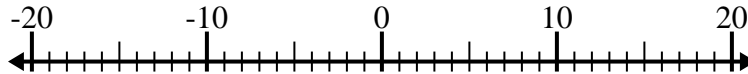
2) $(-9) - 4 = \underline{-13}$



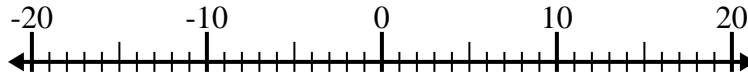
3) $13 - (-7) = \underline{20}$



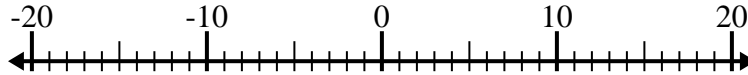
4) $11 - (-4) = \underline{15}$



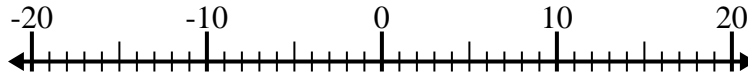
5) $5 - (-9) = \underline{14}$



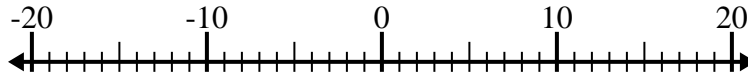
6) $(-1) - (-10) = \underline{9}$



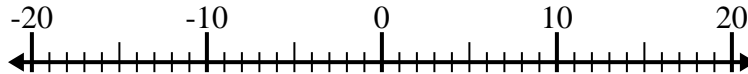
7) $(-6) - 9 = \underline{-15}$



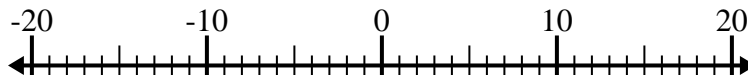
8) $(-2) - (-13) = \underline{11}$



9) $(-10) + (-7) = \underline{-17}$



10) $1 - (-2) = \underline{3}$

**Antworten**1. -42. -133. 204. 155. 146. 97. -158. 119. -1710. 3