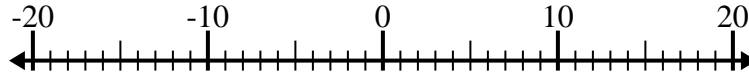


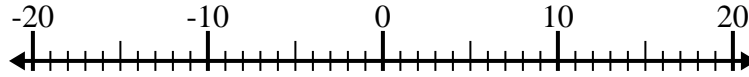


Löse jede Aufgabe. Benutze den Zahlenstrahl, falls du ihn brauchst.

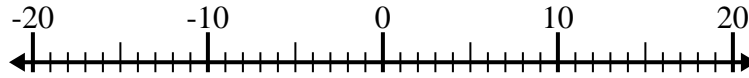
1) $(-1) - (-6) =$ _____



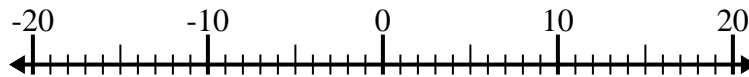
2) $5 - (-12) =$ _____



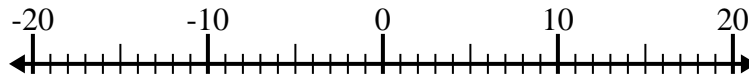
3) $(-12) + (-5) =$ _____



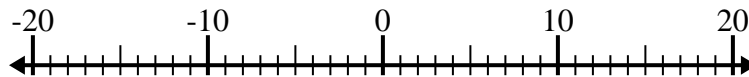
4) $(-2) - 14 =$ _____



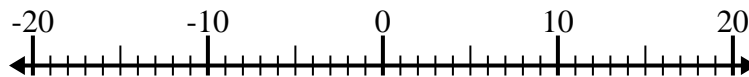
5) $(-6) - (-8) =$ _____



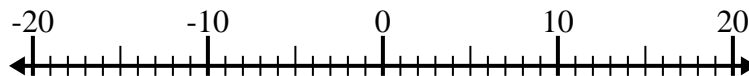
6) $(-8) + 9 =$ _____



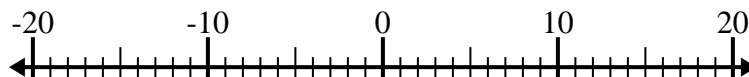
7) $2 - (-13) =$ _____



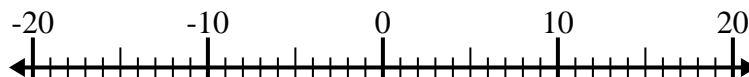
8) $(-7) - 5 =$ _____



9) $(-12) + 10 =$ _____



10) $6 - (-4) =$ _____

Antworten

1. _____

2. _____

3. _____

4. _____

5. _____

6. _____

7. _____

8. _____

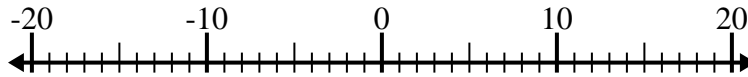
9. _____

10. _____

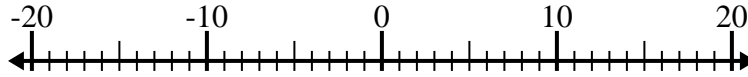


Löse jede Aufgabe. Benutze den Zahlenstrahl, falls du ihn brauchst.

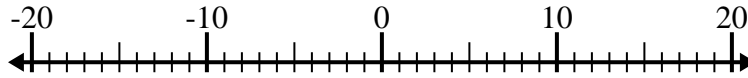
1) $(-1) - (-6) = \underline{5}$



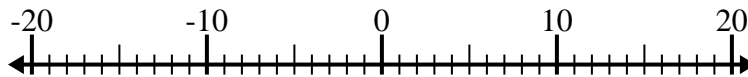
2) $5 - (-12) = \underline{17}$



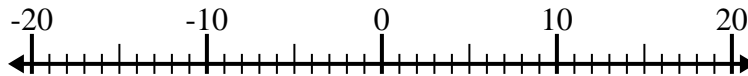
3) $(-12) + (-5) = \underline{-17}$



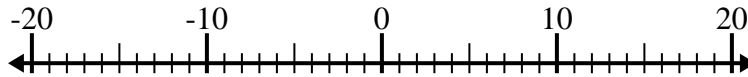
4) $(-2) - 14 = \underline{-16}$



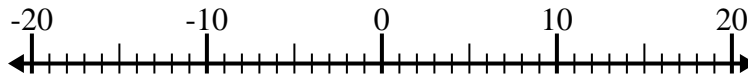
5) $(-6) - (-8) = \underline{2}$



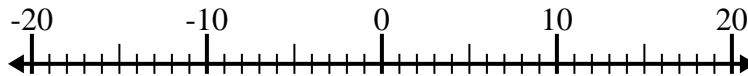
6) $(-8) + 9 = \underline{1}$



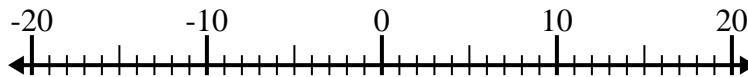
7) $2 - (-13) = \underline{15}$



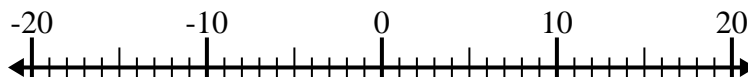
8) $(-7) - 5 = \underline{-12}$



9) $(-12) + 10 = \underline{-2}$



10) $6 - (-4) = \underline{10}$

**Antworten**1. 52. 173. -174. -165. 26. 17. 158. -129. -210. 10