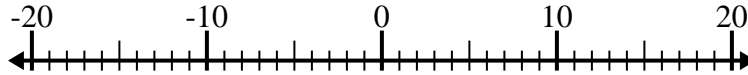


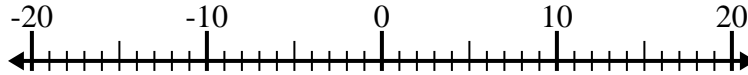


Löse jede Aufgabe. Benutze den Zahlenstrahl, falls du ihn brauchst.

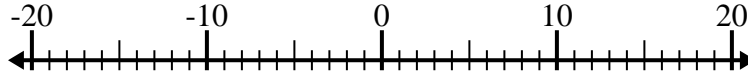
1) $5 - (-3) =$ _____



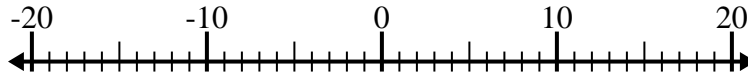
2) $6 + (-4) =$ _____



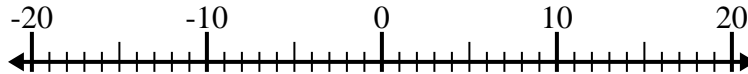
3) $(-3) + (-8) =$ _____



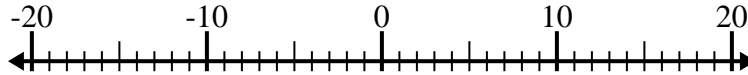
4) $13 + (-9) =$ _____



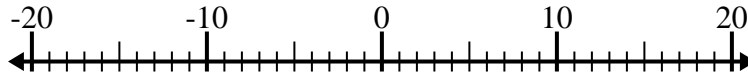
5) $(-5) + (-9) =$ _____



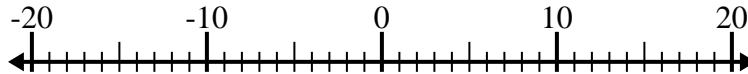
6) $(-15) + 9 =$ _____



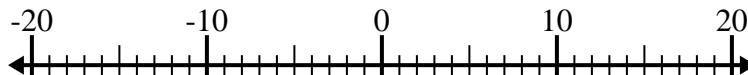
7) $7 - (-11) =$ _____



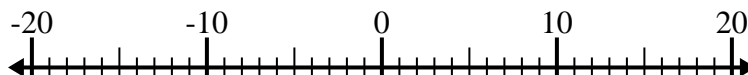
8) $(-4) - 7 =$ _____



9) $(-11) + 12 =$ _____



10) $(-15) - 2 =$ _____

Antworten

1. _____

2. _____

3. _____

4. _____

5. _____

6. _____

7. _____

8. _____

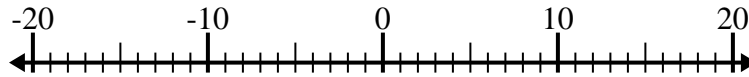
9. _____

10. _____

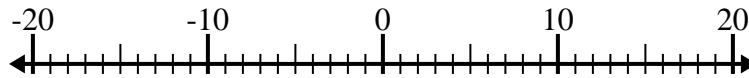


Löse jede Aufgabe. Benutze den Zahlenstrahl, falls du ihn brauchst.

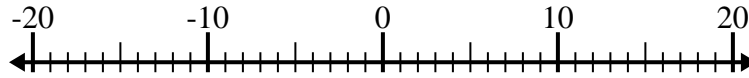
1) $5 - (-3) = \underline{8}$



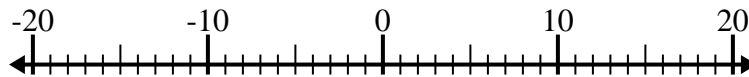
2) $6 + (-4) = \underline{2}$



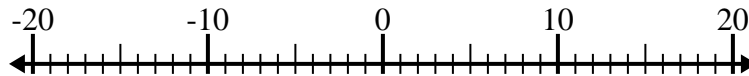
3) $(-3) + (-8) = \underline{-11}$



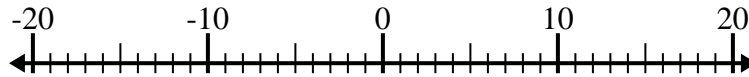
4) $13 + (-9) = \underline{4}$



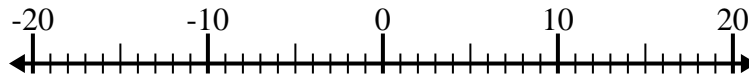
5) $(-5) + (-9) = \underline{-14}$



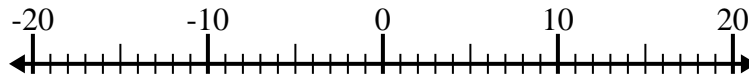
6) $(-15) + 9 = \underline{-6}$



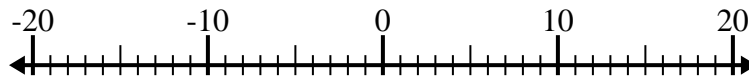
7) $7 - (-11) = \underline{18}$



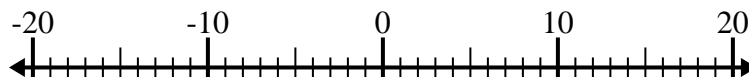
8) $(-4) - 7 = \underline{-11}$



9) $(-11) + 12 = \underline{1}$



10) $(-15) - 2 = \underline{-17}$

**Antworten**1. 82. 23. -114. 45. -146. -67. 188. -119. 110. -17