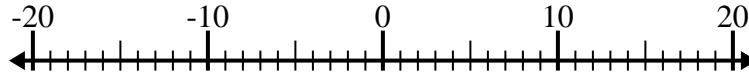


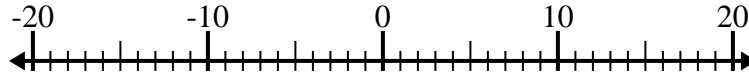


Löse jede Aufgabe. Benutze den Zahlenstrahl, falls du ihn brauchst.

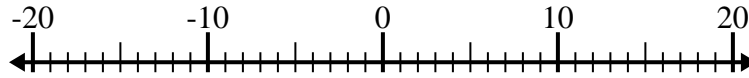
1) $15 + (-11) =$ _____



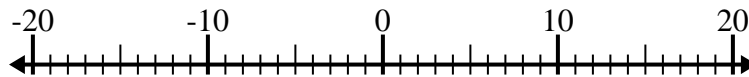
2) $9 - (-6) =$ _____



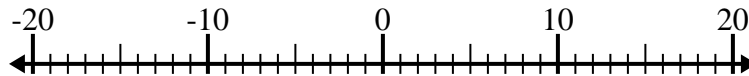
3) $5 - (-10) =$ _____



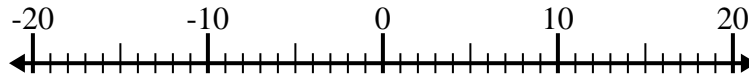
4) $8 - (-12) =$ _____



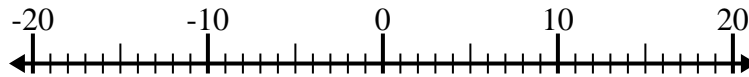
5) $(-12) - 8 =$ _____



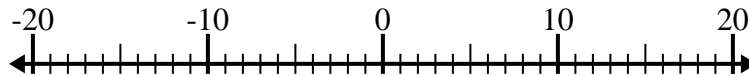
6) $(-1) + (-3) =$ _____



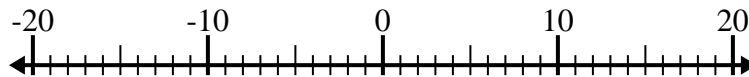
7) $(-14) + (-6) =$ _____



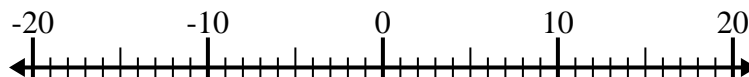
8) $(-8) - 3 =$ _____



9) $(-5) - 14 =$ _____



10) $4 + (-15) =$ _____

Antworten

1. _____

2. _____

3. _____

4. _____

5. _____

6. _____

7. _____

8. _____

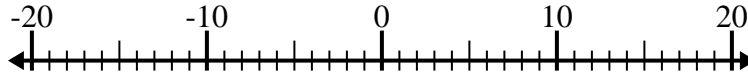
9. _____

10. _____

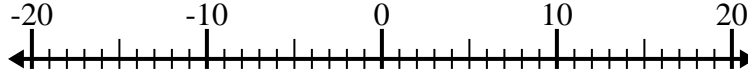


Löse jede Aufgabe. Benutze den Zahlenstrahl, falls du ihn brauchst.

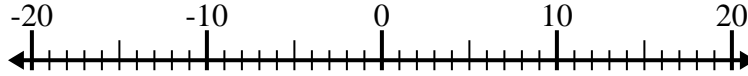
1) $15 + (-11) = \underline{4}$



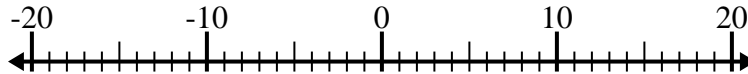
2) $9 - (-6) = \underline{15}$



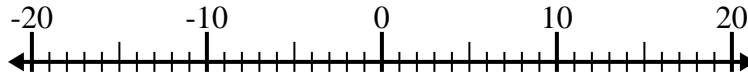
3) $5 - (-10) = \underline{15}$



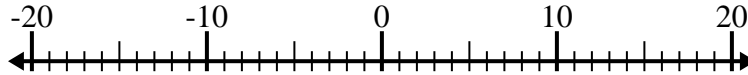
4) $8 - (-12) = \underline{20}$



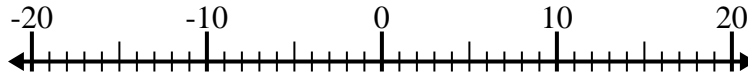
5) $(-12) - 8 = \underline{-20}$



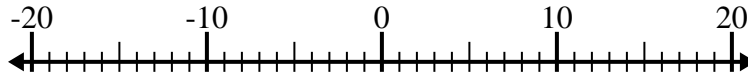
6) $(-1) + (-3) = \underline{-4}$



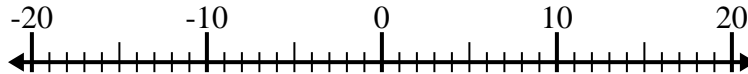
7) $(-14) + (-6) = \underline{-20}$



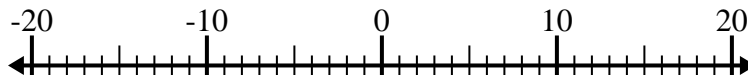
8) $(-8) - 3 = \underline{-11}$



9) $(-5) - 14 = \underline{-19}$



10) $4 + (-15) = \underline{-11}$

**Antworten**1. 42. 153. 154. 205. -206. -47. -208. -119. -1910. -11