




Stelle fest, wie man die gezeigten Gruppen als eine Multiplikationsaufgabe ausdrücken könnte.

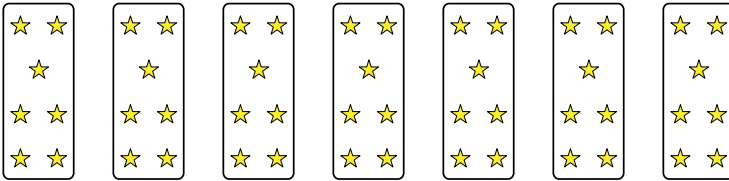
Antworten

Bsp)



Bsp. $2 \cdot 3 = 6$

1)

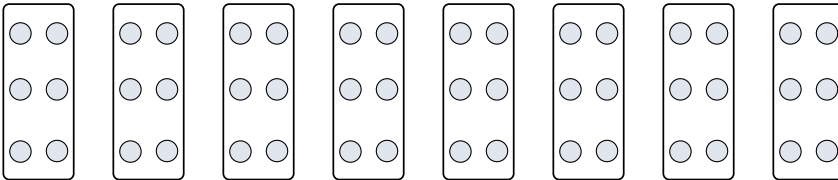


1. _____

2. _____

3. _____

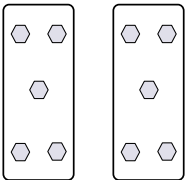
2)



4. _____

5. _____


3)



6. _____

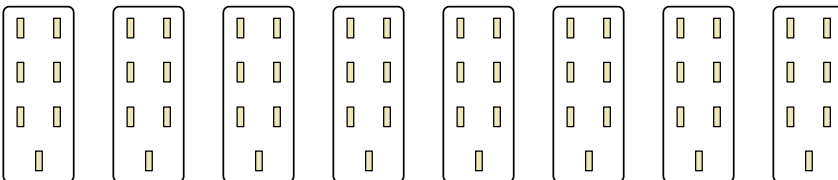
7. _____

4)

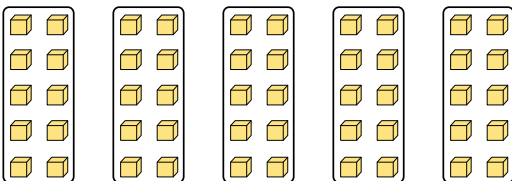


8. _____


5)



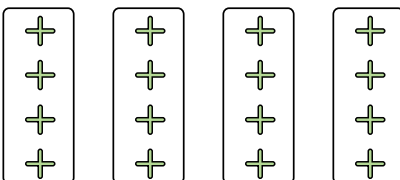
6)



7)



8)






Stelle fest, wie man die gezeigten Gruppen als eine Multiplikationsaufgabe ausdrücken könnte.

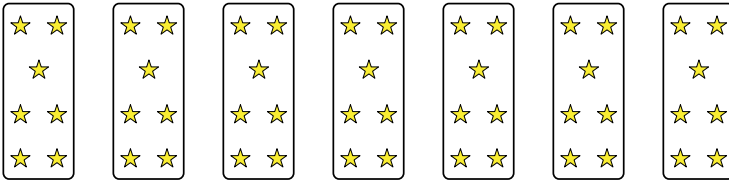
Antworten

Bsp)



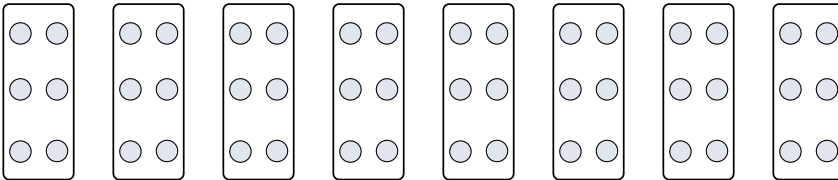
Bsp. $2 \cdot 3 = 6$

1)



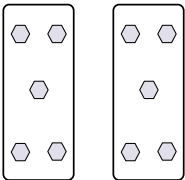
1. $7 \cdot 7 = 49$

2)




2. $8 \cdot 6 = 48$

3)



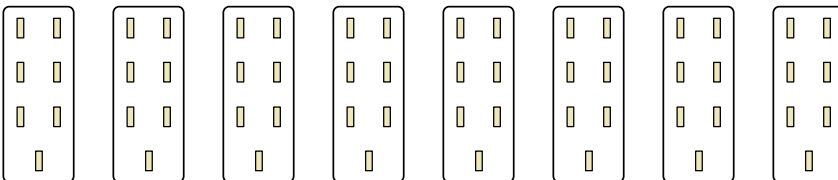
3. $2 \cdot 5 = 10$

4)



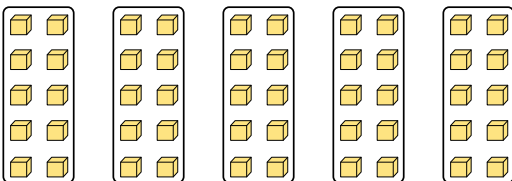
4. $4 \cdot 3 = 12$

5)




5. $8 \cdot 7 = 56$

6)



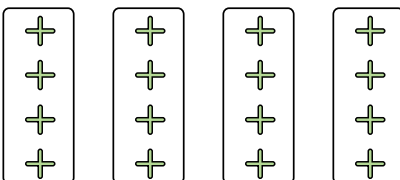
6. $5 \cdot 10 = 50$

7)



7. $10 \cdot 5 = 50$

8)



8. $4 \cdot 4 = 16$