



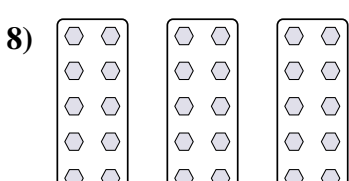
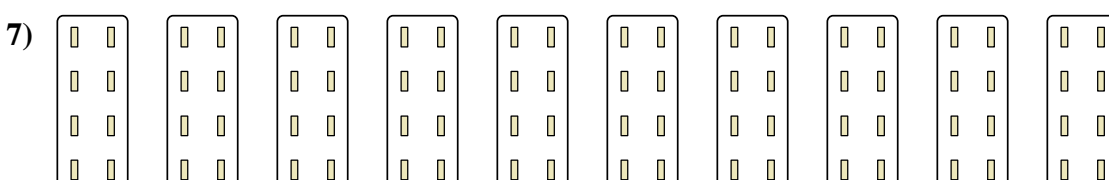
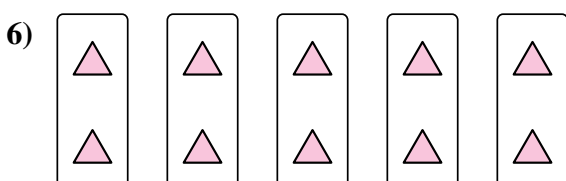

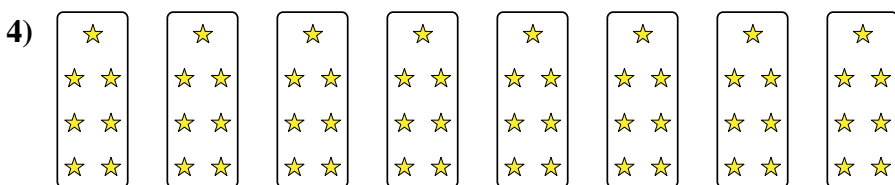
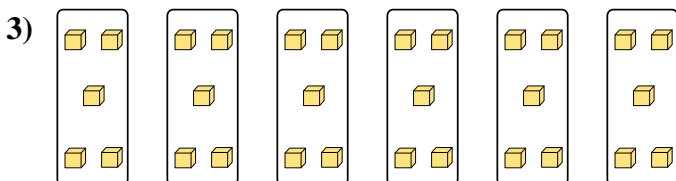

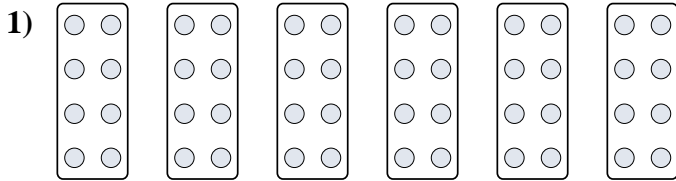
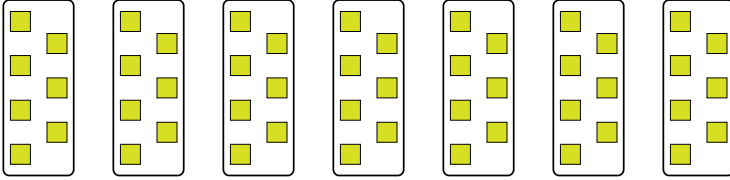
Stelle fest, wie man die gezeigten Gruppen als eine Multiplikationsaufgabe ausdrücken könnte.

Antworten

Bsp)

Bsp. $7 \cdot 7 = 49$

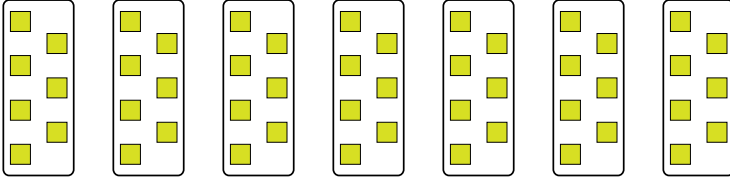
- 1. _____
- 2. _____
- 3. _____
- 4. _____
- 5. _____
- 6. _____
- 7. _____
- 8. _____



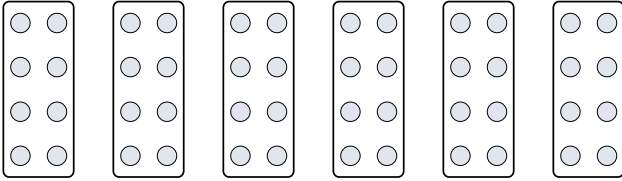


Stelle fest, wie man die gezeigten Gruppen als eine Multiplikationsaufgabe ausdrücken könnte.

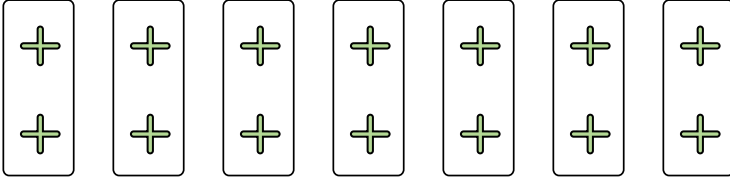
Bsp)



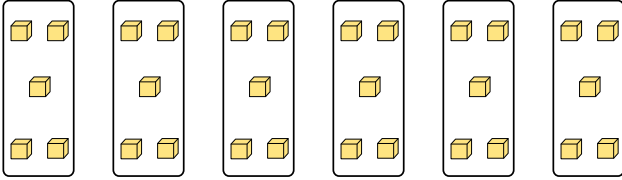
1)




2)




3)



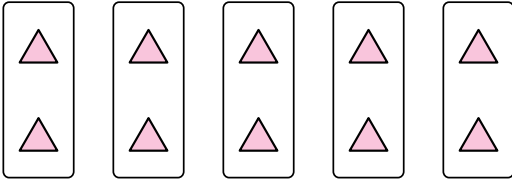
4)



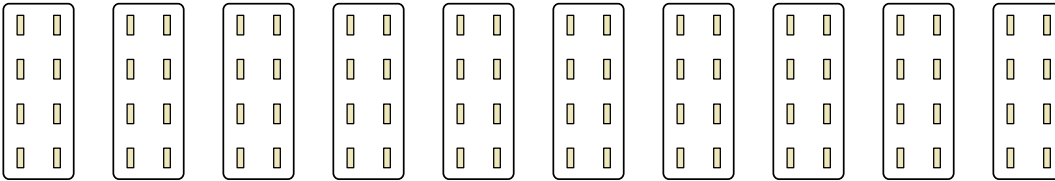
5)



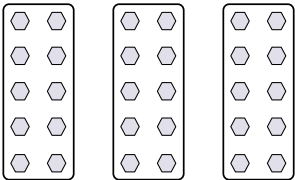
6)



7)



8)



Antworten

Bsp. $7 \cdot 7 = 49$

1. $6 \cdot 8 = 48$

2. $7 \cdot 2 = 14$

3. $6 \cdot 5 = 30$

4. $8 \cdot 7 = 56$

5. $4 \cdot 3 = 12$

6. $5 \cdot 2 = 10$

7. $10 \cdot 8 = 80$

8. $3 \cdot 10 = 30$