




Stelle fest, wie man die gezeigten Gruppen als eine Multiplikationsaufgabe ausdrücken könnte.

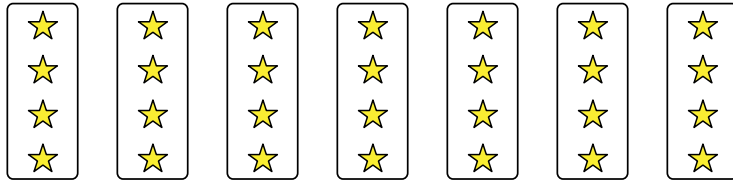
Antworten

Bsp)




Bsp. $10 \cdot 6 = 60$

1)



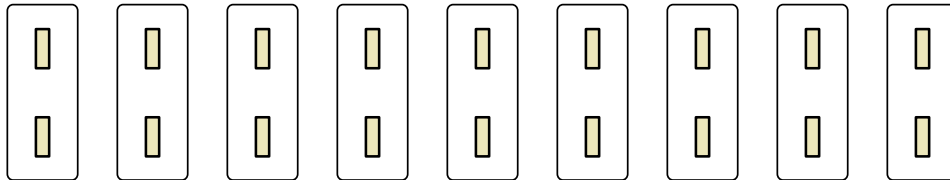
1. _____

2)




2. _____

3)



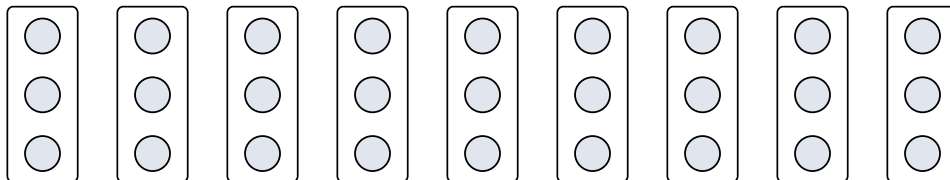
3. _____

4)



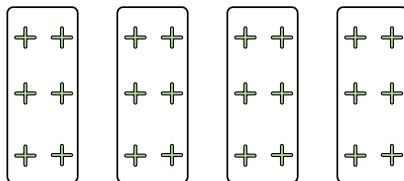
4. _____

5)



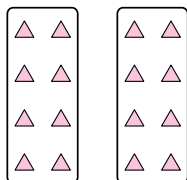
5. _____

6)



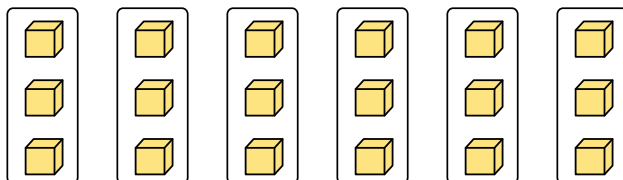
6. _____

7)



7. _____

8)




8. _____

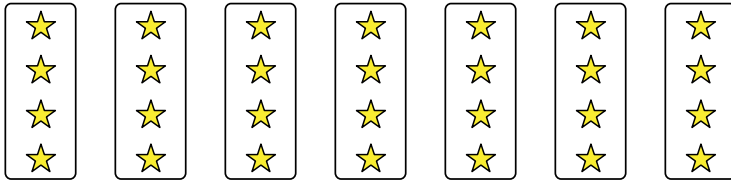


Stelle fest, wie man die gezeigten Gruppen als eine Multiplikationsaufgabe ausdrücken könnte.


Bsp)



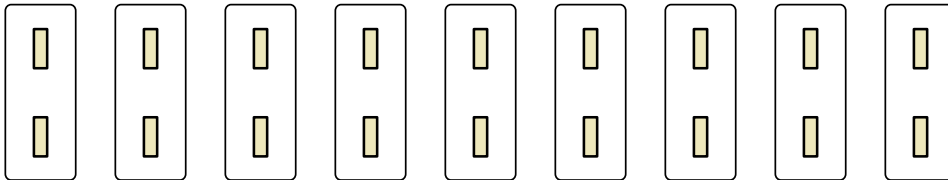
1)




2)



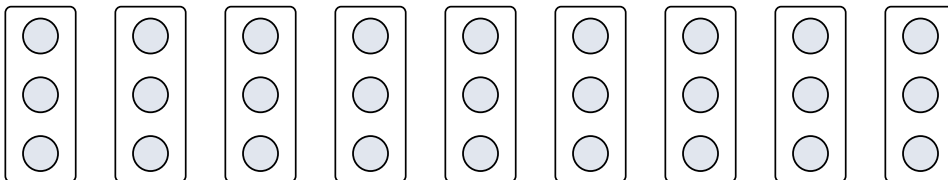
3)



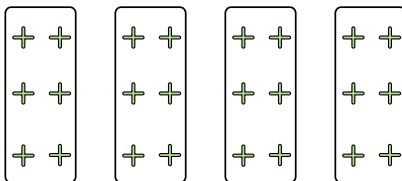
4)



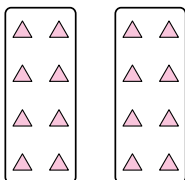
5)



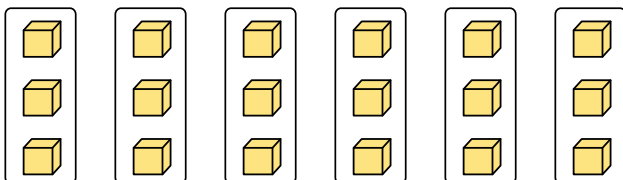
6)



7)



8)

**Antworten**

Bsp. $10 \cdot 6 = 60$

1. $7 \cdot 4 = 28$

2. $5 \cdot 10 = 50$

3. $9 \cdot 2 = 18$

4. $3 \cdot 9 = 27$

5. $9 \cdot 3 = 27$

6. $4 \cdot 6 = 24$

7. $2 \cdot 8 = 16$

8. $6 \cdot 3 = 18$