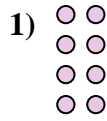
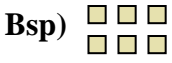




Schreibe jede Anordnung als eine Multiplikationsaufgabe um und löse sie.



Antworten

Bsp. 2 • 3 = 6

1. _____

2. _____

3. _____

4. _____

5. _____

6. _____

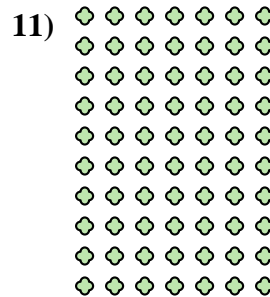
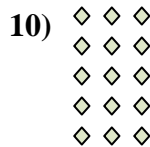

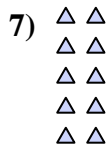

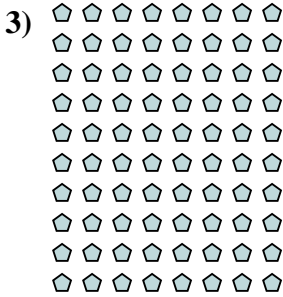
7. _____

8. _____

9. _____

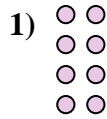
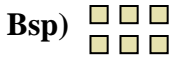
10. _____

11. _____





Schreibe jede Anordnung als eine Multiplikationsaufgabe um und löse sie.



Antworten

Bsp. 2 • 3 = 6

1. 4 • 2 = 8

2. 3 • 2 = 6

3. 10 • 8 = 80

4. 4 • 10 = 40

5. 7 • 8 = 56

6. 8 • 3 = 24

7. 5 • 2 = 10

8. 4 • 8 = 32

9. 9 • 7 = 63

10. 5 • 3 = 15

11. 10 • 7 = 70

