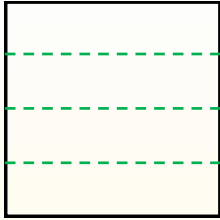




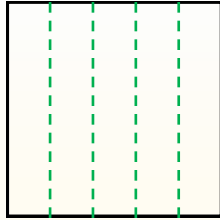
Teile die Form wie beschrieben auf und zähle dann die Anzahl der Felder.

Antworten

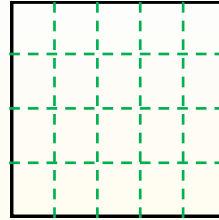
Reihen gehen von links nach rechts.



Spalten gehen von oben nach unten.




Dieses Quadrat hat 4 **Reihen** und 5 **Spalten**.
Es gibt insgesamt **20** Quadrate.




1. _____
2. _____
3. _____
4. _____
5. _____
6. _____
7. _____
8. _____
9. _____


1) 5 Reihen
2 Spalten




2) 3 Reihen
2 Spalten




3) 4 Reihen
3 Spalten




4) 4 Reihen
2 Spalten




5) 5 Reihen
3 Spalten




6) 2 Reihen
3 Spalten




7) 2 Reihen
4 Spalten



8) 5 Reihen
4 Spalten



9) 3 Reihen
3 Spalten





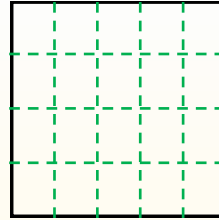
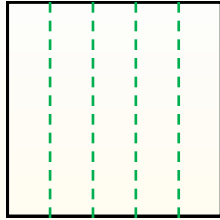
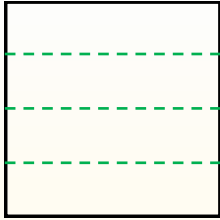
Teile die Form wie beschrieben auf und zähle dann die Anzahl der Felder.

Antworten

Reihen gehen von links nach rechts.

Spalten gehen von oben nach unten.

Dieses Quadrat hat 4 **Reihen** und 5 **Spalten**.
Es gibt insgesamt **20** Quadrate.



1. 10

2. 6

3. 12

4. 8

5. 15

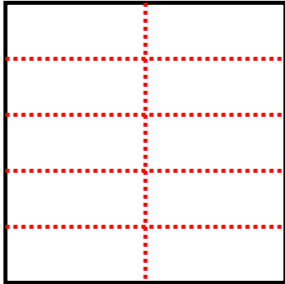
6. 6

7. 8

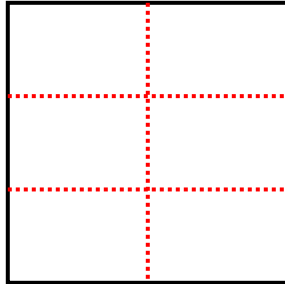
8. 20

9. 9

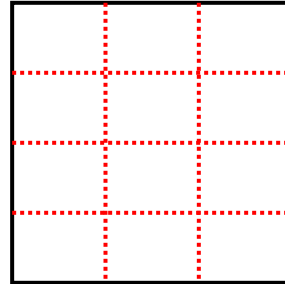
1) 5 Reihen
2 Spalten



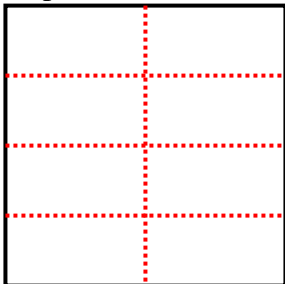
2) 3 Reihen
2 Spalten




3) 4 Reihen
3 Spalten



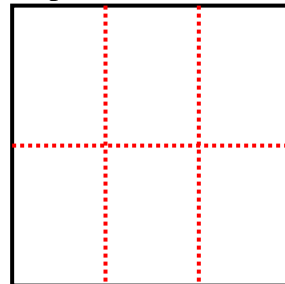
4) 4 Reihen
2 Spalten



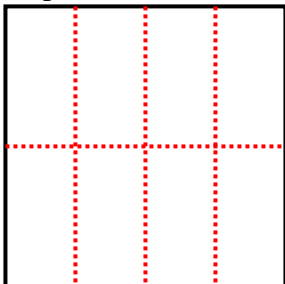
5) 5 Reihen
3 Spalten



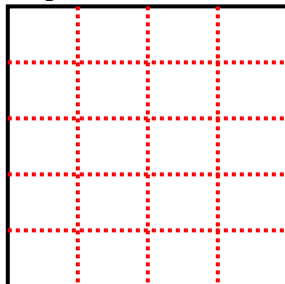
6) 2 Reihen
3 Spalten



7) 2 Reihen
4 Spalten



8) 5 Reihen
4 Spalten



9) 3 Reihen
3 Spalten

