





Benutze die vorgegebene Anordnung um jede Aufgabe zu lösen.


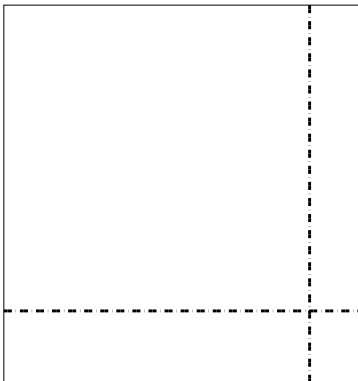
1)  $46 \cdot 32 =$

2)  $36 \cdot 12 =$




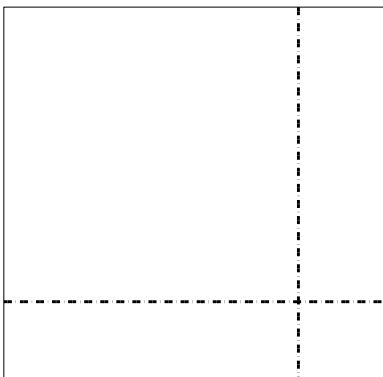
3)  $37 \cdot 35 =$

4)  $38 \cdot 12 =$



5)  $38 \cdot 39 =$

6)  $35 \cdot 16 =$



**Antworten**

1. \_\_\_\_\_

2. \_\_\_\_\_

3. \_\_\_\_\_

4. \_\_\_\_\_

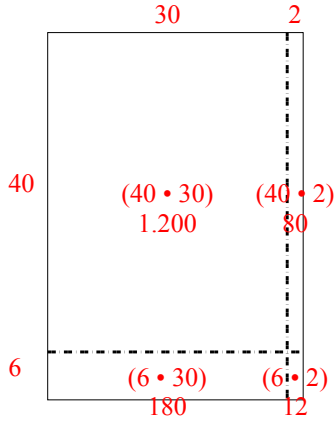
5. \_\_\_\_\_

6. \_\_\_\_\_

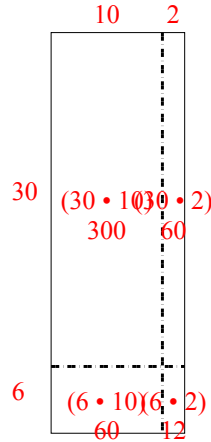


Benutze die vorgegebene Anordnung um jede Aufgabe zu lösen.

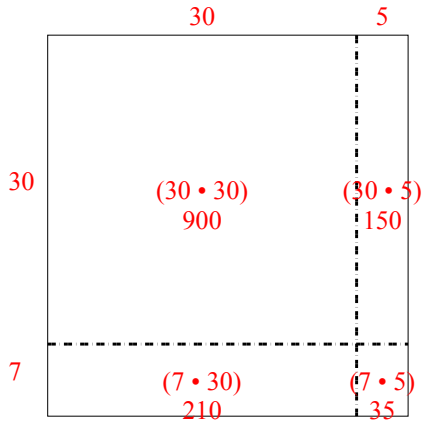
1)  $46 \cdot 32 =$



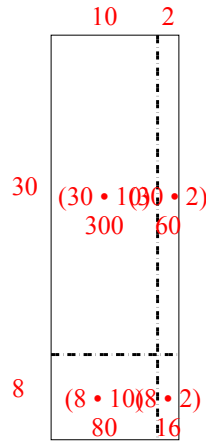
2)  $36 \cdot 12 =$



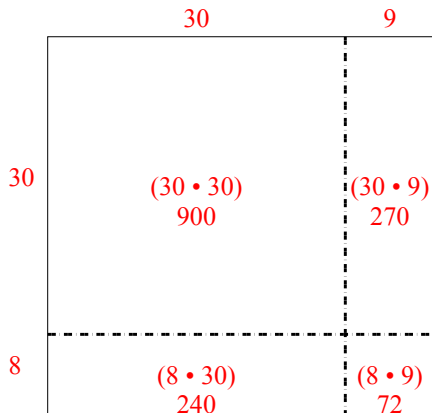
3)  $37 \cdot 35 =$



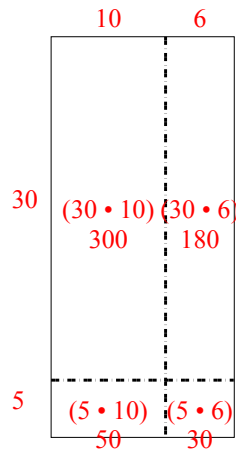
4)  $38 \cdot 12 =$



5)  $38 \cdot 39 =$



6)  $35 \cdot 16 =$



**Antworten**

1. 1.472

2. 432

3. 1.295

4. 456

5. 1.482

6. 560