


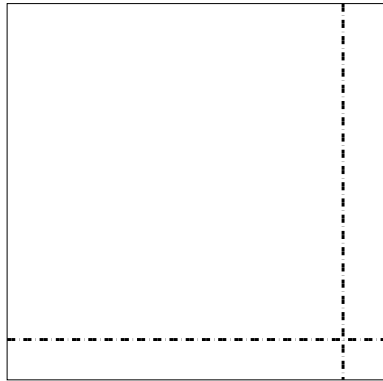


Benutze die vorgegebene Anordnung um jede Aufgabe zu lösen.


1) $45 \cdot 68 =$




2) $56 \cdot 57 =$



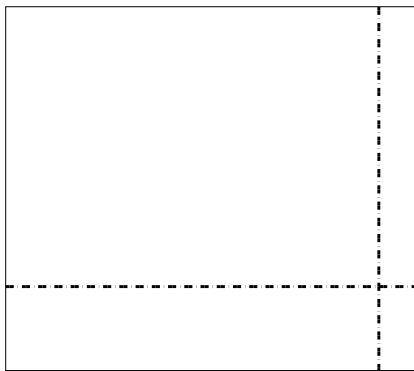
3) $44 \cdot 58 =$




4) $47 \cdot 26 =$



5) $39 \cdot 44 =$



6) $45 \cdot 34 =$



Antworten

1. _____

2. _____

3. _____

4. _____

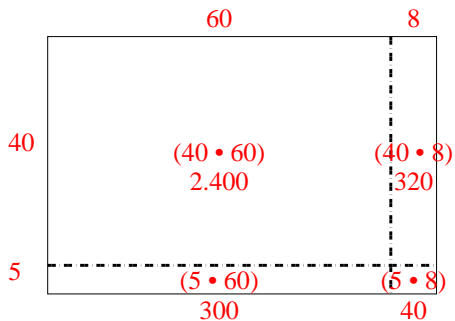
5. _____

6. _____

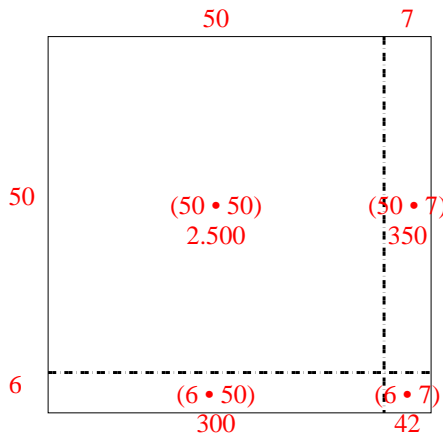


Benutze die vorgegebene Anordnung um jede Aufgabe zu lösen.

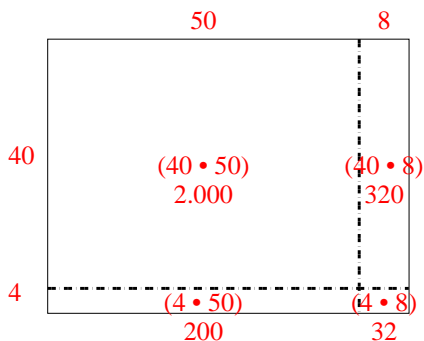
1) $45 \cdot 68 =$



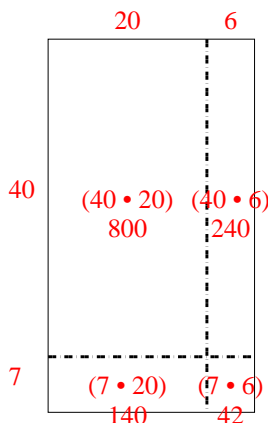
2) $56 \cdot 57 =$



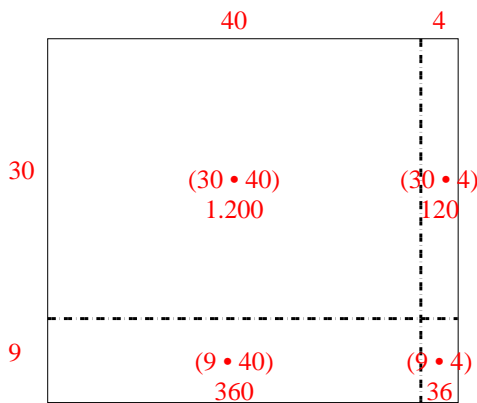
3) $44 \cdot 58 =$



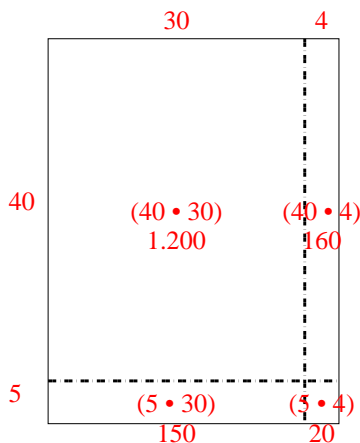
4) $47 \cdot 26 =$



5) $39 \cdot 44 =$



6) $45 \cdot 34 =$



Antworten

1. 3.060

2. 3.192

3. 2.552

4. 1.222


5. 1.716

6. 1.530




Benutze die vorgegebene Anordnung um jede Aufgabe zu lösen.


1) $64 \cdot 62 =$




2) $43 \cdot 27 =$




3) $45 \cdot 54 =$




4) $35 \cdot 27 =$



5) $33 \cdot 36 =$



6) $32 \cdot 48 =$



Antworten

1. _____

2. _____

3. _____

4. _____

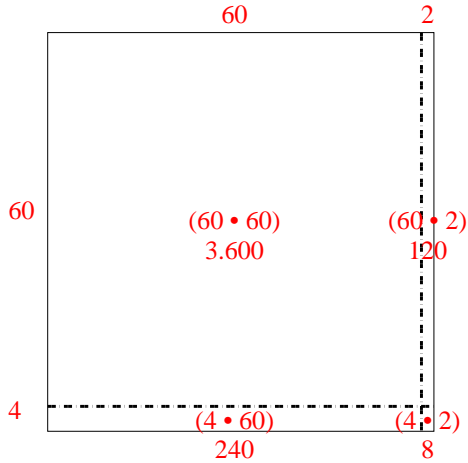
5. _____

6. _____

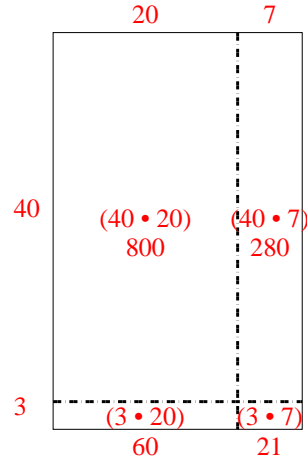


Benutze die vorgegebene Anordnung um jede Aufgabe zu lösen.

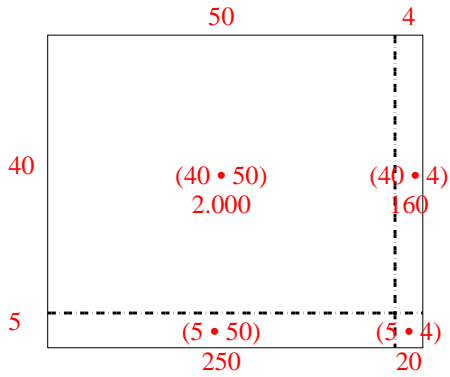
1) $64 \cdot 62 =$



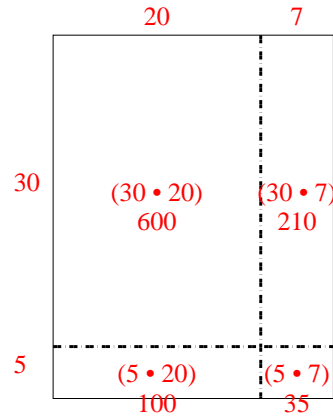
2) $43 \cdot 27 =$



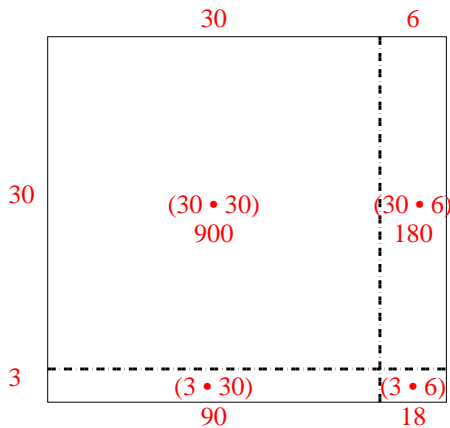
3) $45 \cdot 54 =$



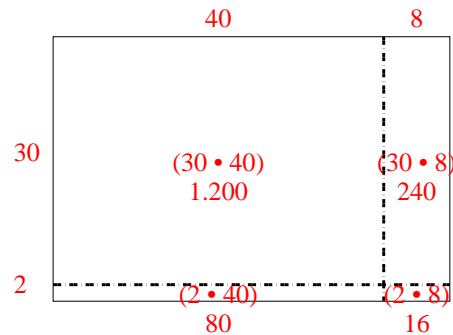
4) $35 \cdot 27 =$



5) $33 \cdot 36 =$



6) $32 \cdot 48 =$



Antworten

1. 3.968

2. 1.161

3. 2.430

4. 945


5. 1.188

6. 1.536




Benutze die vorgegebene Anordnung um jede Aufgabe zu lösen.

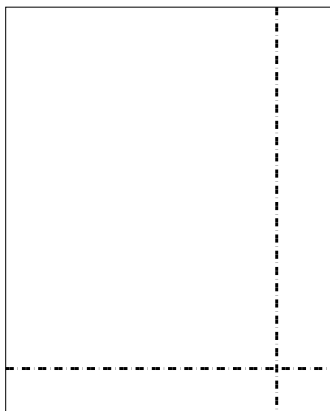
1) $66 \cdot 72 =$




2) $57 \cdot 47 =$




3) $45 \cdot 36 =$




4) $35 \cdot 23 =$



5) $33 \cdot 17 =$



6) $38 \cdot 48 =$



Antworten

1. _____

2. _____

3. _____

4. _____

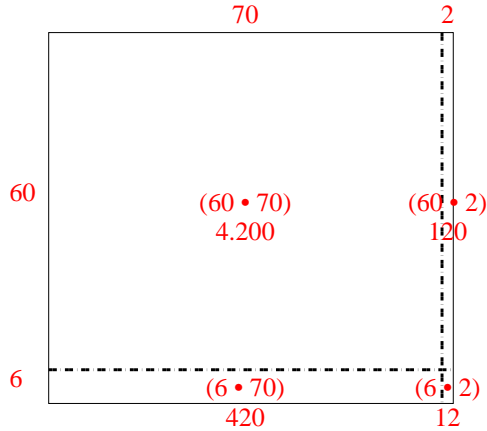
5. _____

6. _____

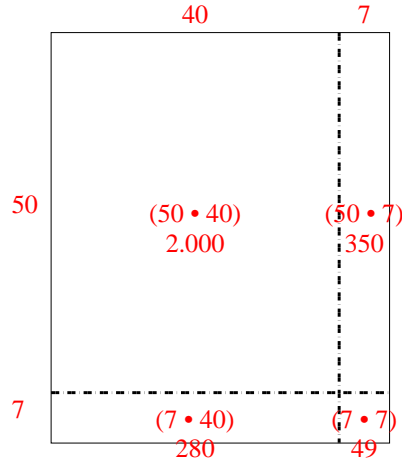


Benutze die vorgegebene Anordnung um jede Aufgabe zu lösen.

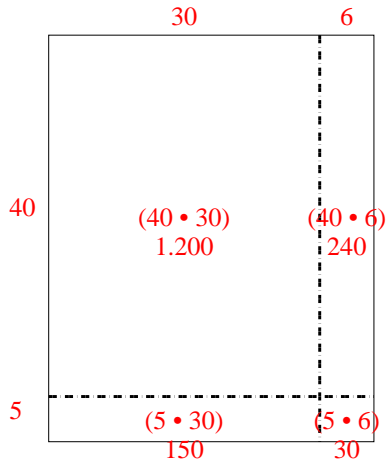
1) $66 \cdot 72 =$



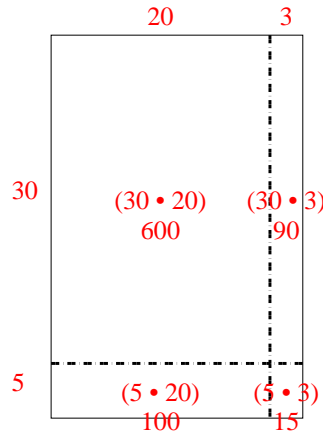
2) $57 \cdot 47 =$



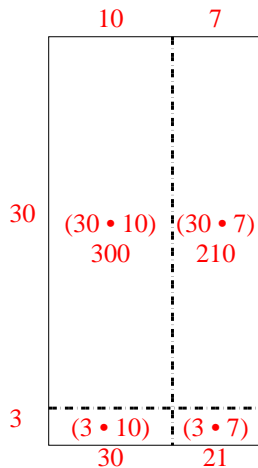
3) $45 \cdot 36 =$



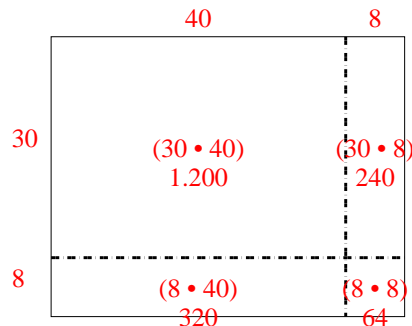
4) $35 \cdot 23 =$



5) $33 \cdot 17 =$




6) $38 \cdot 48 =$

Antworten1. 4.7522. 2.6793. 1.6204. 8055. 5616. 1.824




Benutze die vorgegebene Anordnung um jede Aufgabe zu lösen.


1) $56 \cdot 46 =$



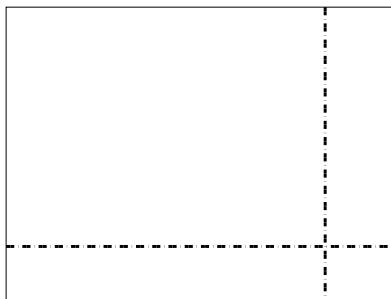
2) $32 \cdot 49 =$




3) $33 \cdot 35 =$



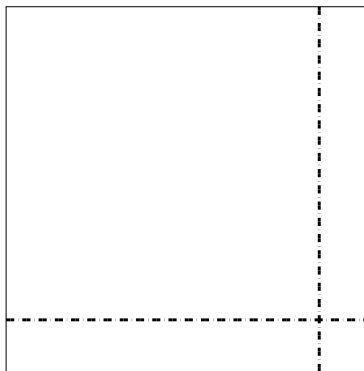
4) $37 \cdot 49 =$



5) $35 \cdot 43 =$



6) $35 \cdot 35 =$



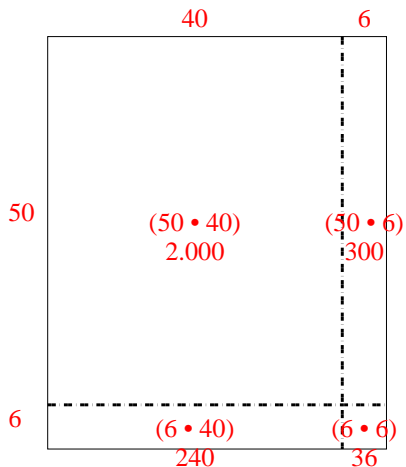
Antworten

- 1. _____
- 2. _____
- 3. _____
- 4. _____
- 5. _____
- 6. _____

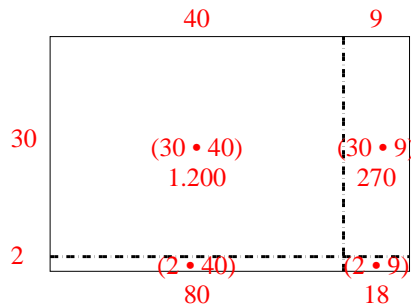


Benutze die vorgegebene Anordnung um jede Aufgabe zu lösen.

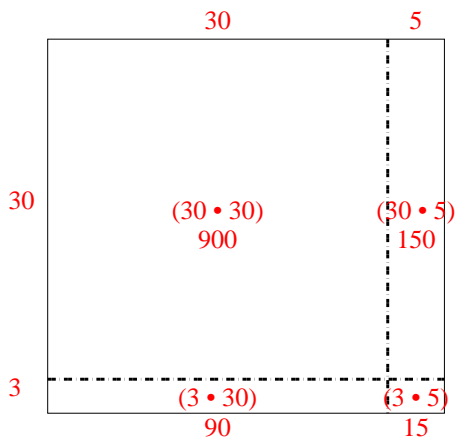
1) $56 \cdot 46 =$



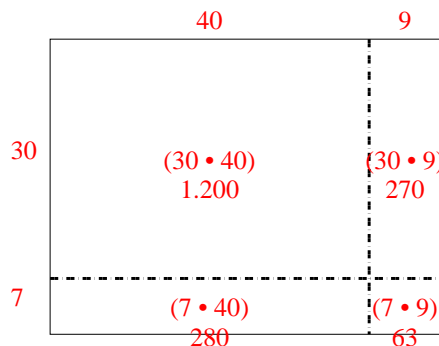
2) $32 \cdot 49 =$



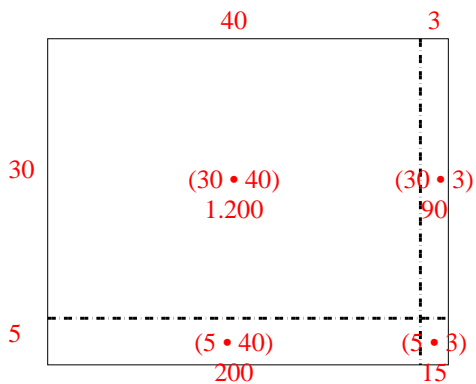
3) $33 \cdot 35 =$



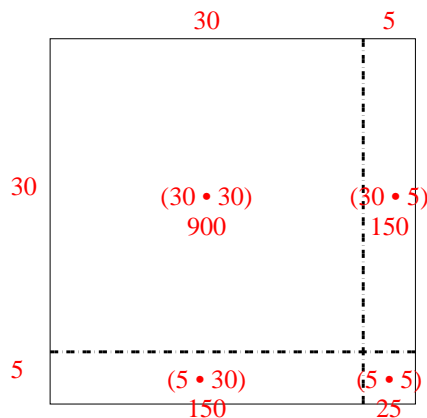
4) $37 \cdot 49 =$



5) $35 \cdot 43 =$



6) $35 \cdot 35 =$



Antworten

1. 2.576

2. 1.568

3. 1.155

4. 1.813


5. 1.505

6. 1.225




Benutze die vorgegebene Anordnung um jede Aufgabe zu lösen.

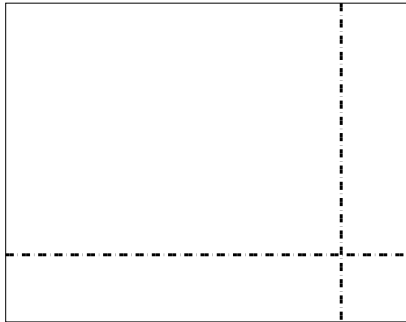
1) $42 \cdot 68 =$




2) $45 \cdot 32 =$



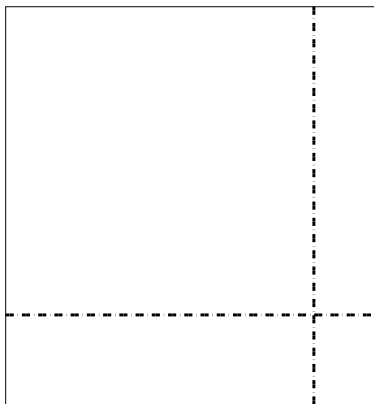
3) $38 \cdot 48 =$




4) $36 \cdot 13 =$



5) $39 \cdot 36 =$



6) $35 \cdot 23 =$



Antworten

1. _____

2. _____

3. _____

4. _____

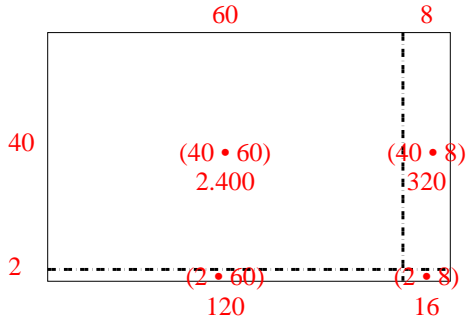
5. _____

6. _____

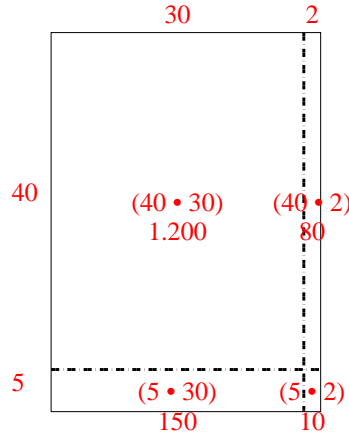


Benutze die vorgegebene Anordnung um jede Aufgabe zu lösen.

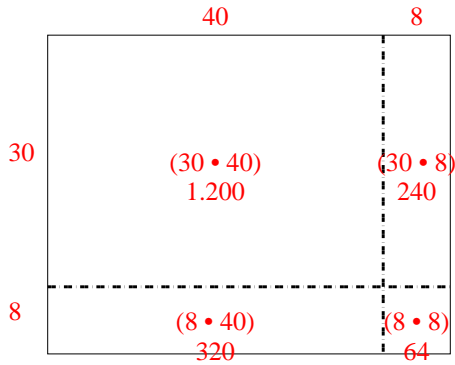
1) $42 \cdot 68 =$



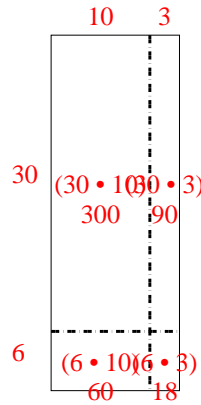
2) $45 \cdot 32 =$



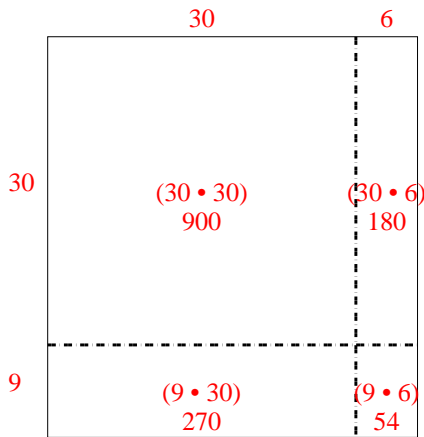
3) $38 \cdot 48 =$



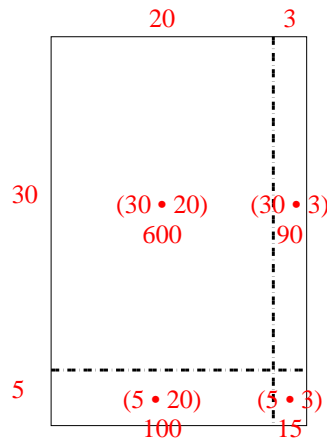
4) $36 \cdot 13 =$



5) $39 \cdot 36 =$



6) $35 \cdot 23 =$




Antworten

1. 2.856
2. 1.440
3. 1.824
4. 468
5. 1.404
6. 805




Benutze die vorgegebene Anordnung um jede Aufgabe zu lösen.


1) $63 \cdot 63 =$




2) $55 \cdot 52 =$



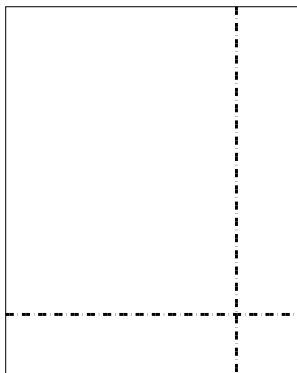
3) $43 \cdot 26 =$




4) $49 \cdot 33 =$



5) $48 \cdot 38 =$



6) $33 \cdot 49 =$



Antworten

1. _____

2. _____

3. _____

4. _____

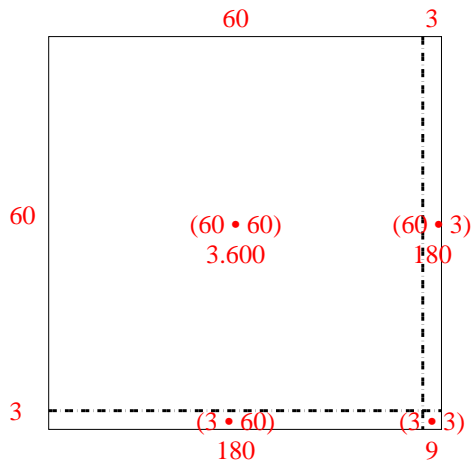
5. _____

6. _____

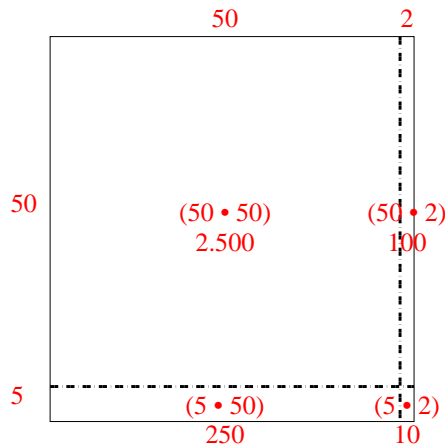


Benutze die vorgegebene Anordnung um jede Aufgabe zu lösen.

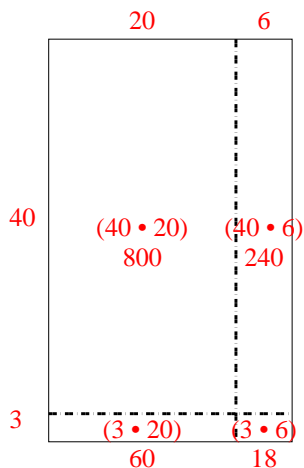
1) $63 \cdot 63 =$



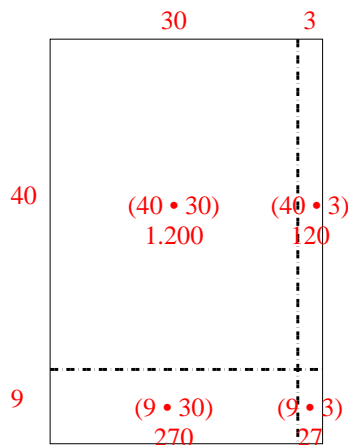
2) $55 \cdot 52 =$



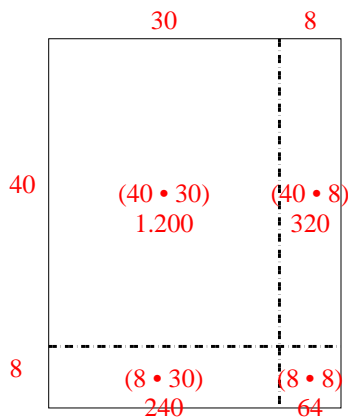
3) $43 \cdot 26 =$



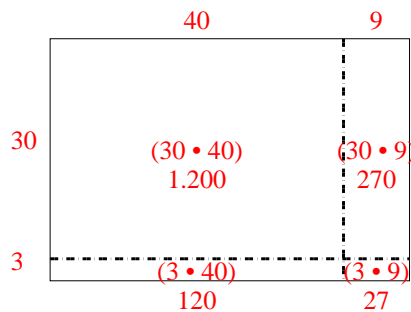
4) $49 \cdot 33 =$



5) $48 \cdot 38 =$




6) $33 \cdot 49 =$

Antworten1. 3.9692. 2.8603. 1.1184. 1.6175. 1.8246. 1.617




Benutze die vorgegebene Anordnung um jede Aufgabe zu lösen.


1) $55 \cdot 59 =$



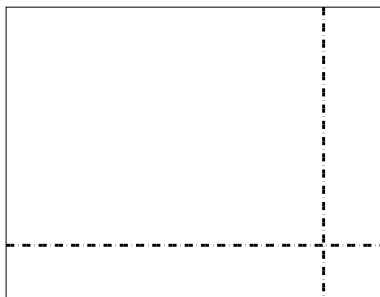
2) $44 \cdot 46 =$




3) $35 \cdot 24 =$




4) $37 \cdot 48 =$



5) $35 \cdot 47 =$



6) $35 \cdot 35 =$



Antworten

1. _____

2. _____

3. _____

4. _____

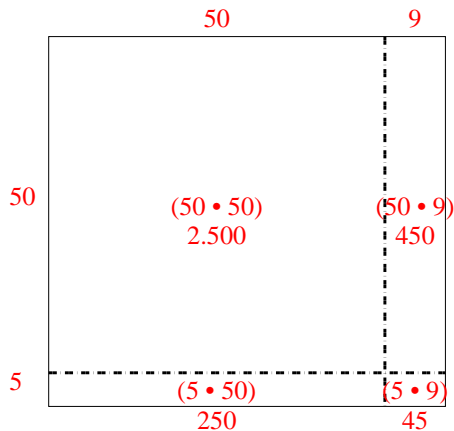
5. _____

6. _____

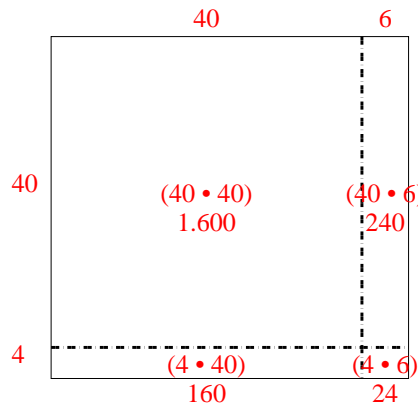


Benutze die vorgegebene Anordnung um jede Aufgabe zu lösen.

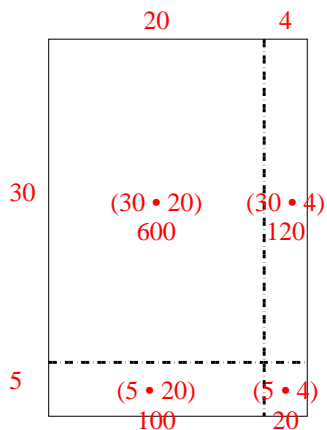
1) $55 \cdot 59 =$



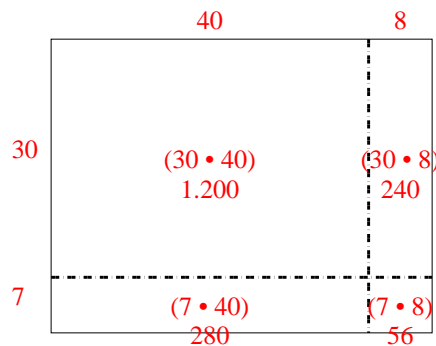
2) $44 \cdot 46 =$



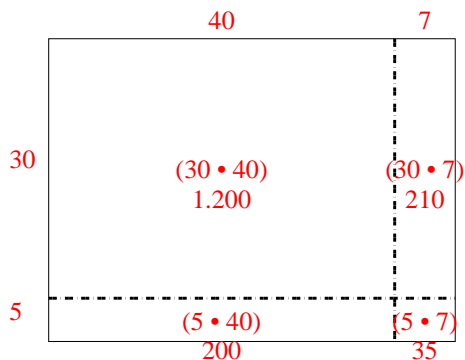
3) $35 \cdot 24 =$



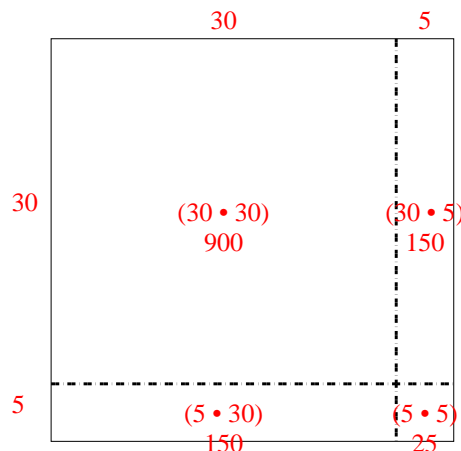
4) $37 \cdot 48 =$



5) $35 \cdot 47 =$




6) $35 \cdot 35 =$

**Antworten**1. 3.2452. 2.0243. 8404. 1.7765. 1.6456. 1.225




Benutze die vorgegebene Anordnung um jede Aufgabe zu lösen.


1) $69 \cdot 59 =$



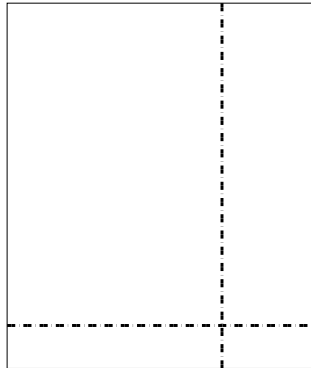
2) $55 \cdot 39 =$




3) $32 \cdot 34 =$




4) $34 \cdot 29 =$



5) $35 \cdot 19 =$



6) $34 \cdot 25 =$



Antworten

1. _____

2. _____

3. _____

4. _____

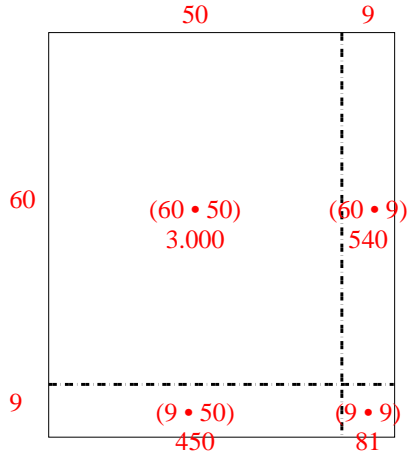
5. _____

6. _____

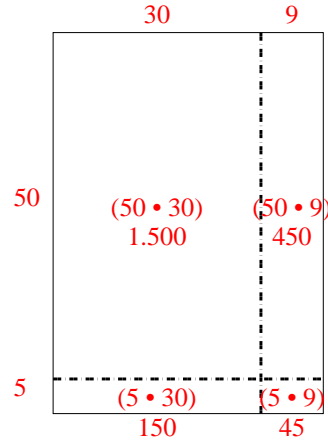


Benutze die vorgegebene Anordnung um jede Aufgabe zu lösen.

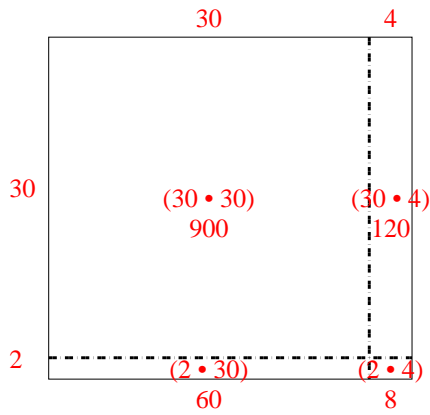
1) $69 \cdot 59 =$



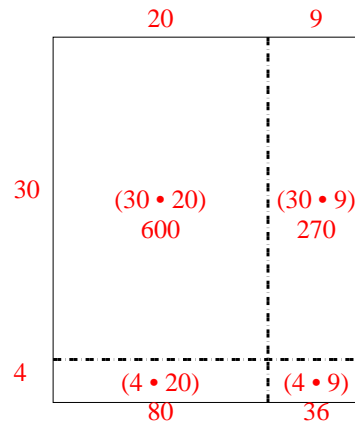
2) $55 \cdot 39 =$



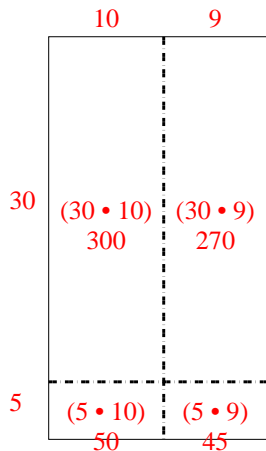
3) $32 \cdot 34 =$



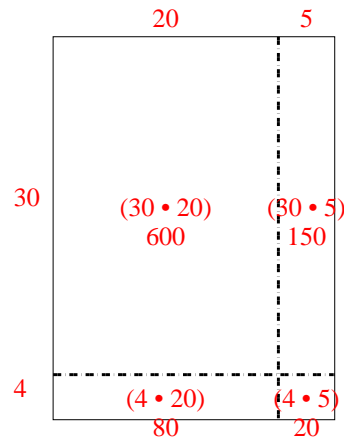
4) $34 \cdot 29 =$



5) $35 \cdot 19 =$




6) $34 \cdot 25 =$

Antworten1. 4.0712. 2.1453. 1.0884. 9865. 6656. 850




Benutze die vorgegebene Anordnung um jede Aufgabe zu lösen.


1) $39 \cdot 22 =$



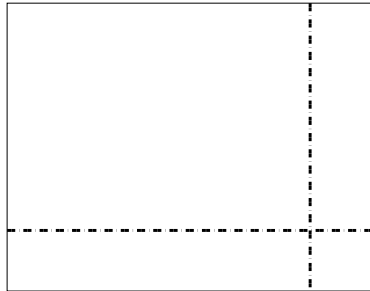
2) $38 \cdot 14 =$




3) $36 \cdot 28 =$




4) $38 \cdot 49 =$



5) $48 \cdot 64 =$



6) $46 \cdot 55 =$



Antworten

1. _____

2. _____

3. _____

4. _____

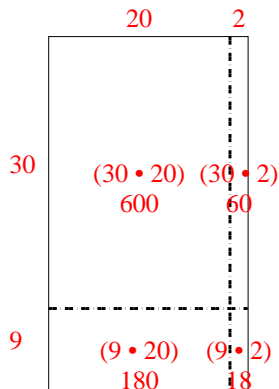
5. _____

6. _____

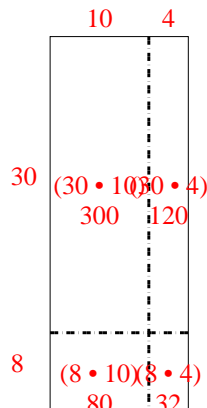


Benutze die vorgegebene Anordnung um jede Aufgabe zu lösen.

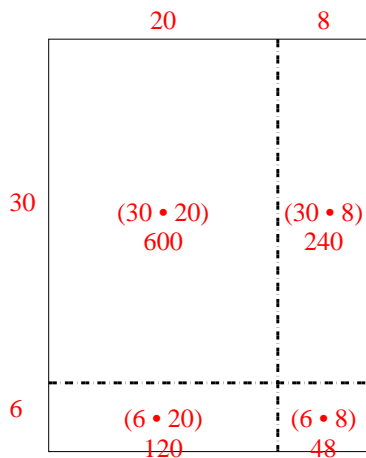
1) $39 \cdot 22 =$



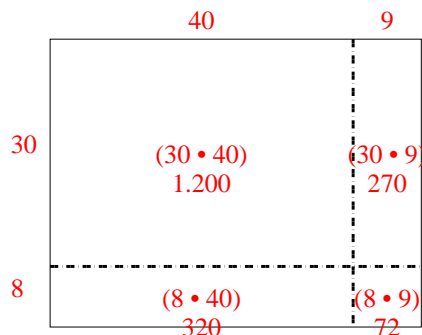
2) $38 \cdot 14 =$



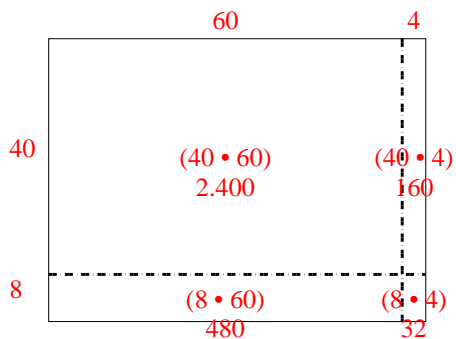
3) $36 \cdot 28 =$



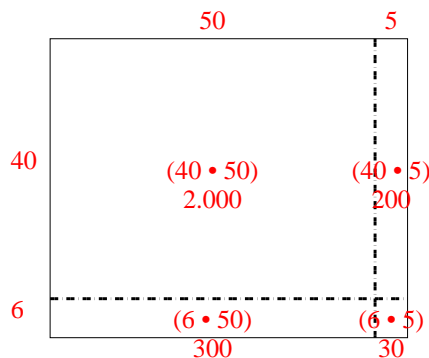
4) $38 \cdot 49 =$



5) $48 \cdot 64 =$




6) $46 \cdot 55 =$

**Antworten**1. 8582. 5323. 1.0084. 1.8625. 3.0726. 2.530




Benutze die vorgegebene Anordnung um jede Aufgabe zu lösen.


1) $63 \cdot 49 =$




2) $55 \cdot 62 =$




3) $38 \cdot 25 =$




4) $37 \cdot 16 =$



5) $32 \cdot 18 =$



6) $34 \cdot 36 =$



Antworten

1. _____

2. _____

3. _____

4. _____

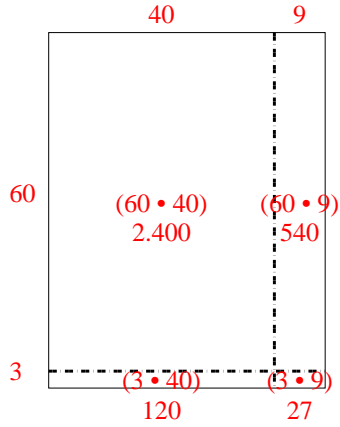
5. _____

6. _____

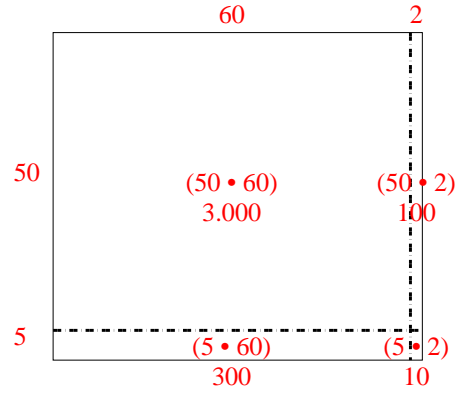


Benutze die vorgegebene Anordnung um jede Aufgabe zu lösen.

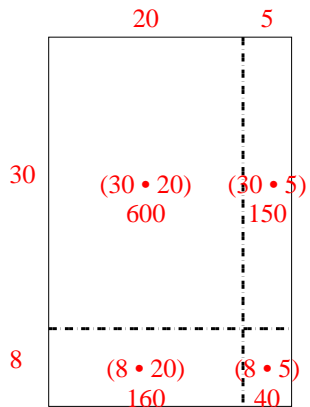
1) $63 \cdot 49 =$



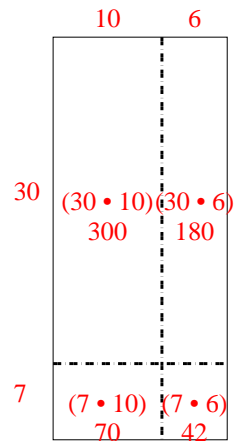
2) $55 \cdot 62 =$



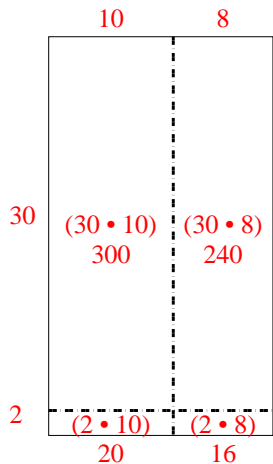
3) $38 \cdot 25 =$



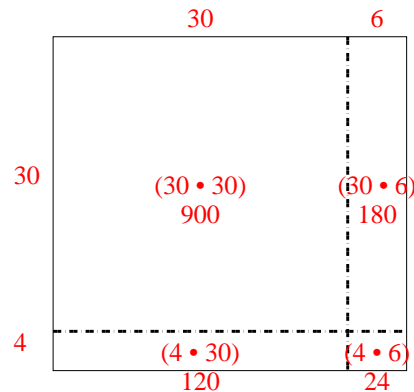
4) $37 \cdot 16 =$



5) $32 \cdot 18 =$



6) $34 \cdot 36 =$

Antworten1. 3.0872. 3.4103. 9504. 5925. 5766. 1.224