





Benutze die vorgegebene Anordnung um jede Aufgabe zu lösen.

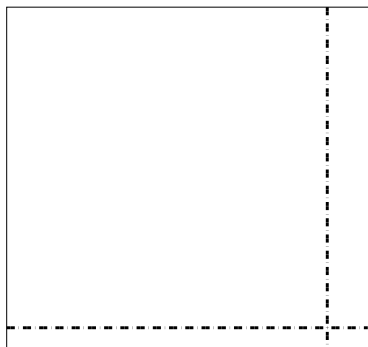
1) $69 \cdot 59 =$




2) $55 \cdot 39 =$




3) $32 \cdot 34 =$




4) $34 \cdot 29 =$



5) $35 \cdot 19 =$



6) $34 \cdot 25 =$



Antworten

1. _____

2. _____

3. _____

4. _____

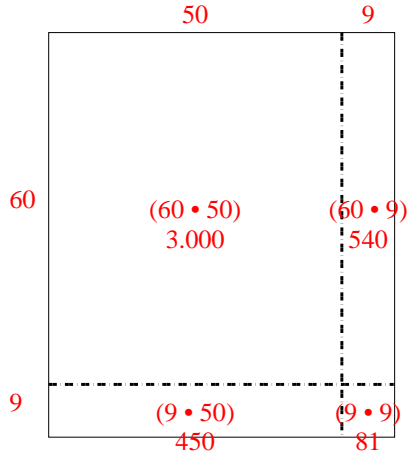
5. _____

6. _____

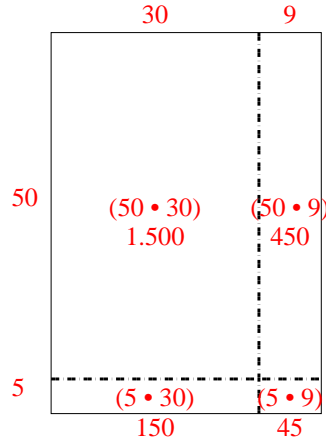


Benutze die vorgegebene Anordnung um jede Aufgabe zu lösen.

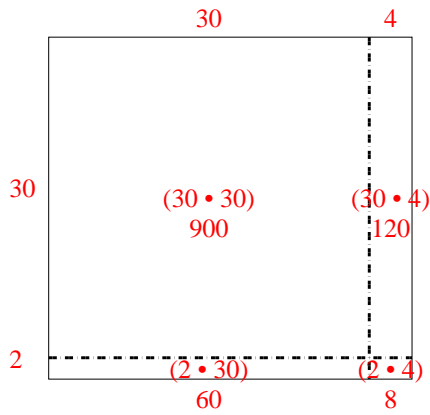
1) $69 \cdot 59 =$



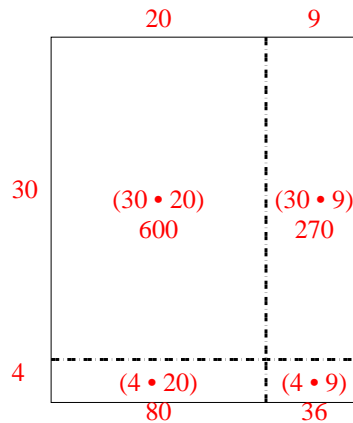
2) $55 \cdot 39 =$



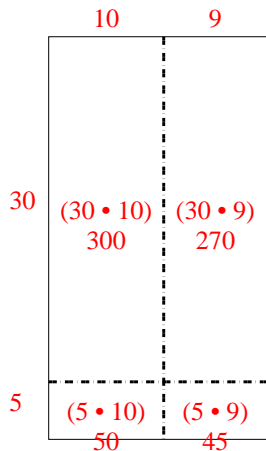
3) $32 \cdot 34 =$



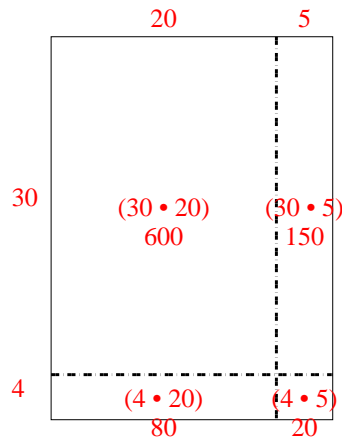
4) $34 \cdot 29 =$



5) $35 \cdot 19 =$



6) $34 \cdot 25 =$

Antworten1. 4.0712. 2.1453. 1.0884. 9865. 6656. 850