





Benutze die vorgegebene Anordnung um jede Aufgabe zu lösen.


1) $63 \cdot 63 =$




2) $55 \cdot 52 =$



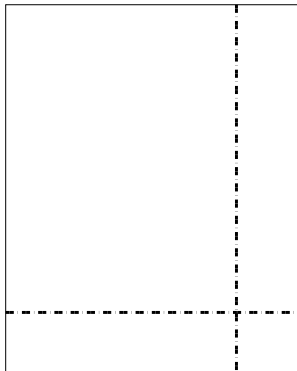
3) $43 \cdot 26 =$




4) $49 \cdot 33 =$



5) $48 \cdot 38 =$



6) $33 \cdot 49 =$



Antworten

1. _____

2. _____

3. _____

4. _____

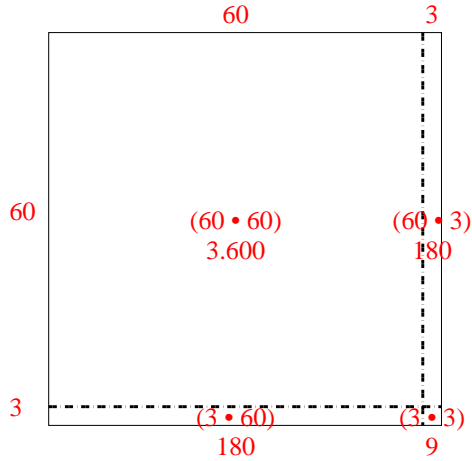
5. _____

6. _____

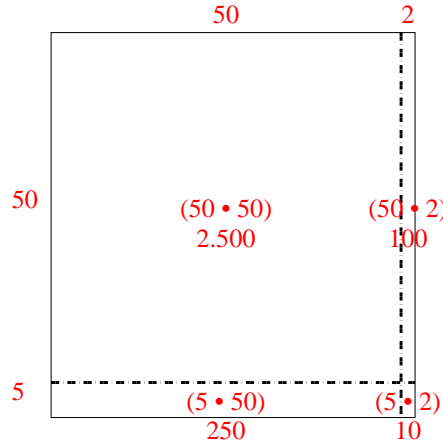


Benutze die vorgegebene Anordnung um jede Aufgabe zu lösen.

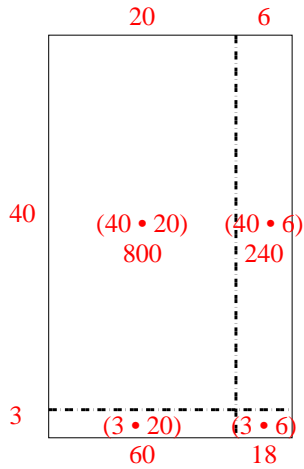
1) $63 \cdot 63 =$



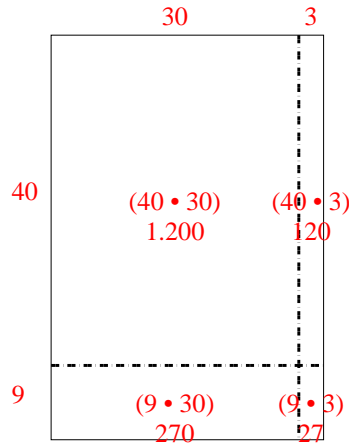
2) $55 \cdot 52 =$



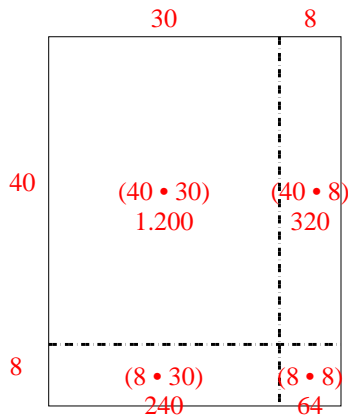
3) $43 \cdot 26 =$



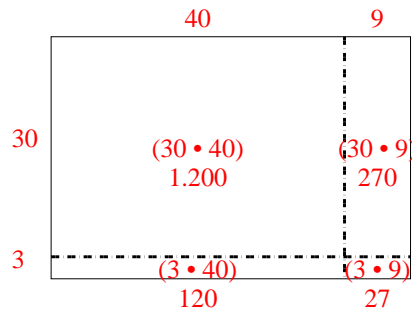
4) $49 \cdot 33 =$



5) $48 \cdot 38 =$



6) $33 \cdot 49 =$

Antworten1. 3.9692. 2.8603. 1.1184. 1.6175. 1.8246. 1.617