





Benutze die vorgegebene Anordnung um jede Aufgabe zu lösen.


1)  $56 \cdot 46 =$



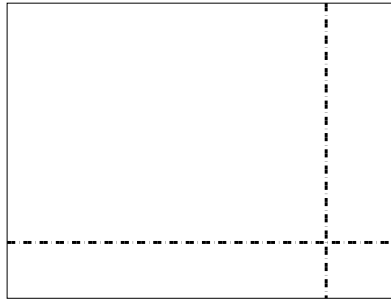
2)  $32 \cdot 49 =$




3)  $33 \cdot 35 =$




4)  $37 \cdot 49 =$



5)  $35 \cdot 43 =$



6)  $35 \cdot 35 =$



Antworten

1. \_\_\_\_\_

2. \_\_\_\_\_

3. \_\_\_\_\_

4. \_\_\_\_\_

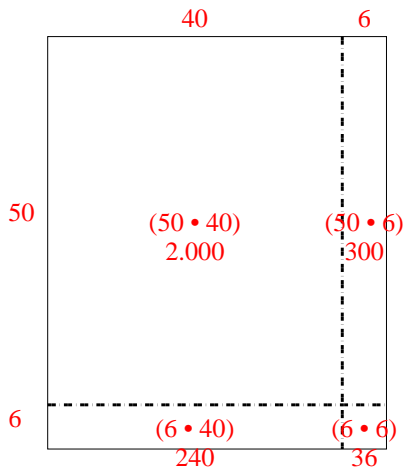
5. \_\_\_\_\_

6. \_\_\_\_\_

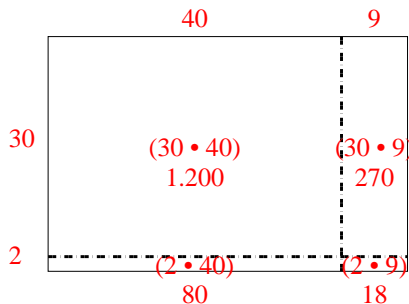


Benutze die vorgegebene Anordnung um jede Aufgabe zu lösen.

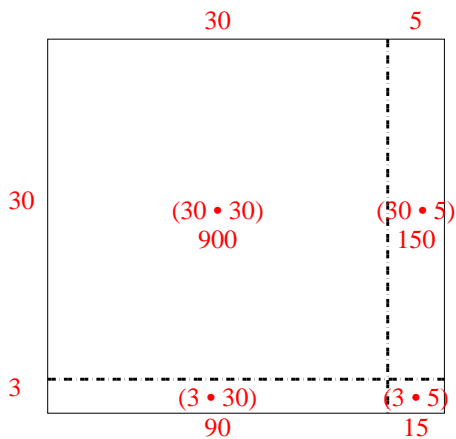
1)  $56 \cdot 46 =$



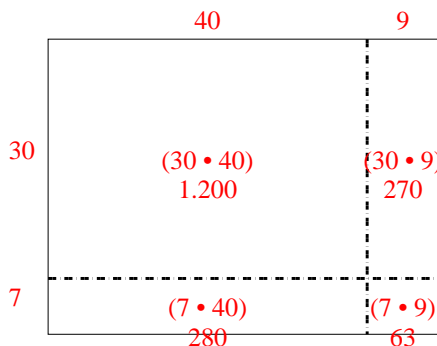
2)  $32 \cdot 49 =$



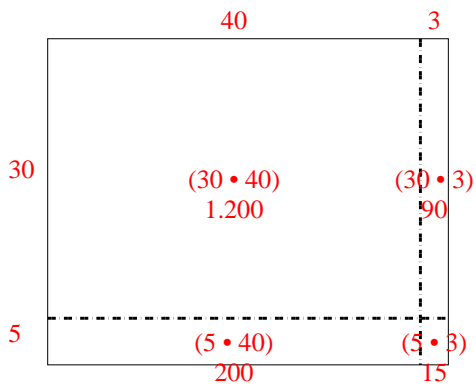
3)  $33 \cdot 35 =$



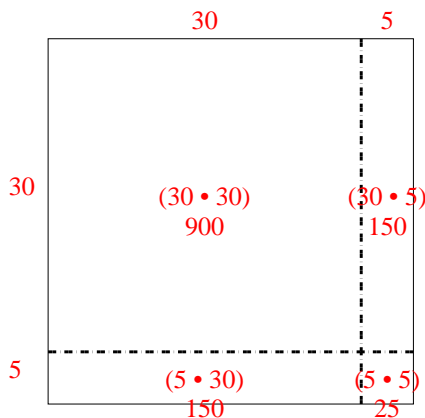
4)  $37 \cdot 49 =$



5)  $35 \cdot 43 =$



6)  $35 \cdot 35 =$



Antworten

1. 2.576

2. 1.568

3. 1.155

4. 1.813

5. 1.505

6. 1.225