





Benutze die vorgegebene Anordnung um jede Aufgabe zu lösen.


1) $63 \cdot 49 =$




2) $55 \cdot 62 =$




3) $38 \cdot 25 =$




4) $37 \cdot 16 =$



5) $32 \cdot 18 =$



6) $34 \cdot 36 =$



Antworten

1. _____

2. _____

3. _____

4. _____

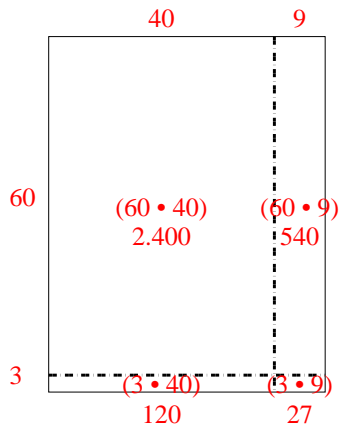
5. _____

6. _____

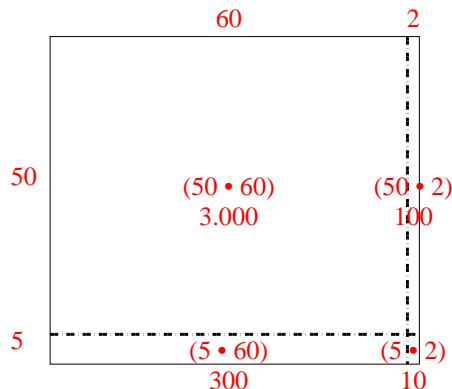


Benutze die vorgegebene Anordnung um jede Aufgabe zu lösen.

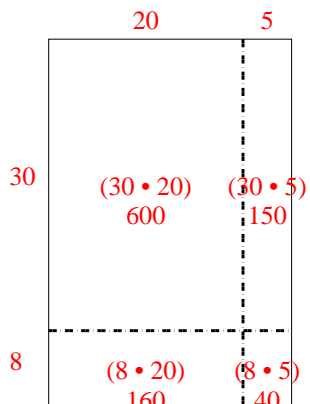
1) $63 \cdot 49 =$



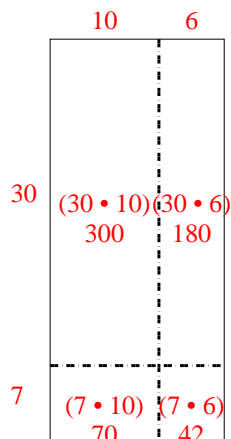
2) $55 \cdot 62 =$



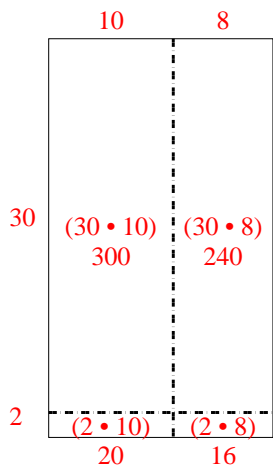
3) $38 \cdot 25 =$



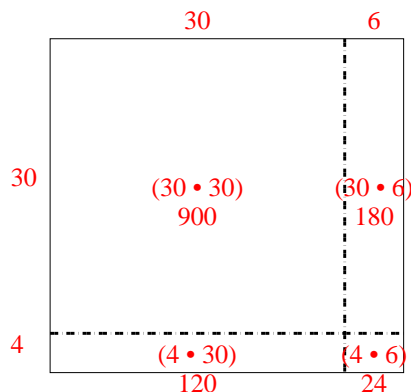
4) $37 \cdot 16 =$



5) $32 \cdot 18 =$



6) $34 \cdot 36 =$

Antworten1. 3.0872. 3.4103. 9504. 5925. 5766. 1.224