





Benutze die vorgegebene Anordnung um jede Aufgabe zu lösen.


1)  $30 \cdot 35 =$




2)  $30 \cdot 23 =$



3)  $20 \cdot 29 =$




4)  $20 \cdot 27 =$



5)  $20 \cdot 24 =$



6)  $20 \cdot 26 =$



Antworten

1. \_\_\_\_\_

2. \_\_\_\_\_

3. \_\_\_\_\_

4. \_\_\_\_\_

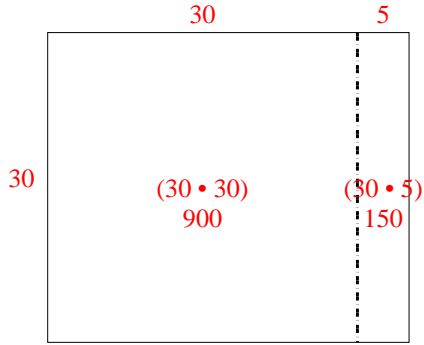
5. \_\_\_\_\_

6. \_\_\_\_\_

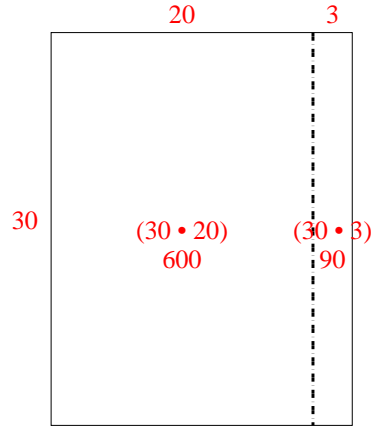


Benutze die vorgegebene Anordnung um jede Aufgabe zu lösen.

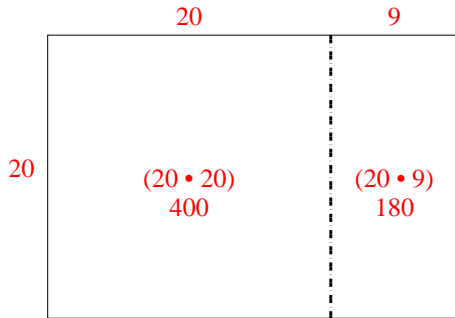
1)  $30 \cdot 35 =$



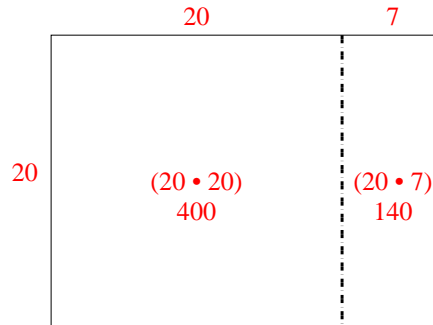
2)  $30 \cdot 23 =$



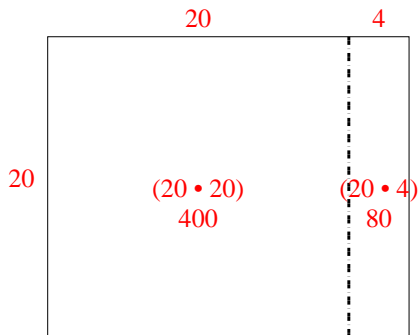
3)  $20 \cdot 29 =$



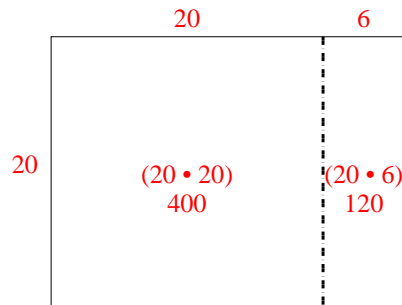
4)  $20 \cdot 27 =$



5)  $20 \cdot 24 =$



6)  $20 \cdot 26 =$



Antworten

1. 1.050
2. 690
3. 580
4. 540
5. 480
6. 520



Benutze die vorgegebene Anordnung um jede Aufgabe zu lösen.

1)  $30 \cdot 35 =$

2)  $20 \cdot 38 =$

3)  $30 \cdot 29 =$

4)  $20 \cdot 24 =$

5)  $20 \cdot 25 =$

6)  $20 \cdot 29 =$

Antworten

1. \_\_\_\_\_

2. \_\_\_\_\_

3. \_\_\_\_\_

4. \_\_\_\_\_

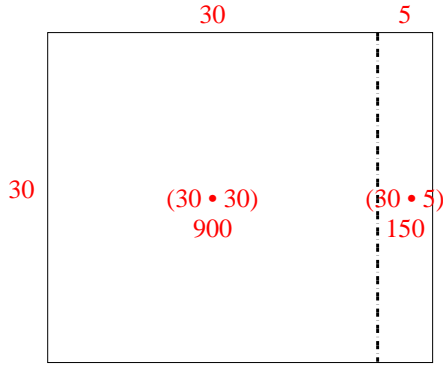
5. \_\_\_\_\_

6. \_\_\_\_\_

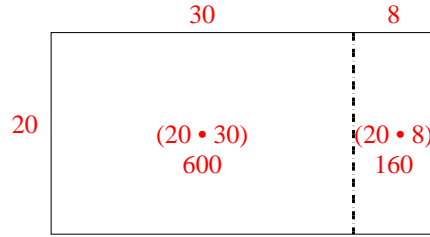


Benutze die vorgegebene Anordnung um jede Aufgabe zu lösen.

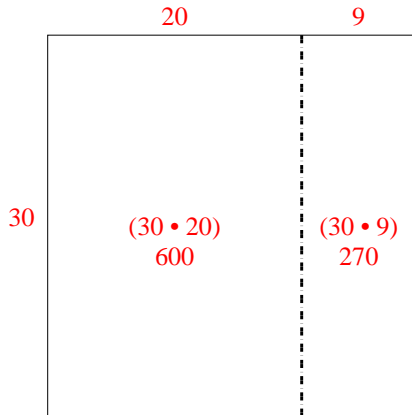
1)  $30 \cdot 35 =$



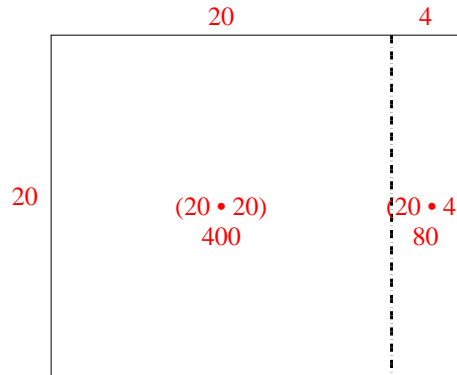
2)  $20 \cdot 38 =$



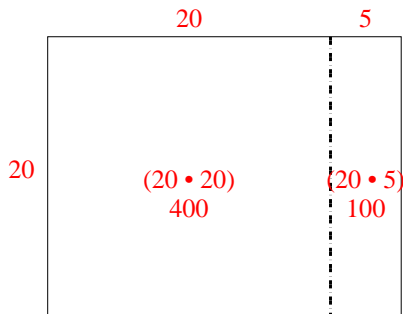
3)  $30 \cdot 29 =$



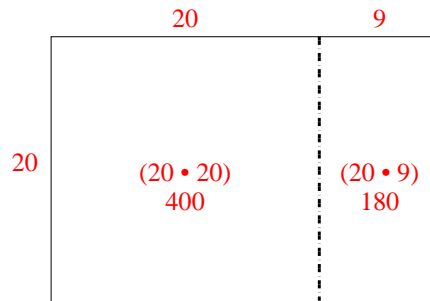
4)  $20 \cdot 24 =$



5)  $20 \cdot 25 =$



6)  $20 \cdot 29 =$



Antworten

1. 1.050

2. 760

3. 870

4. 480


5. 500

6. 580

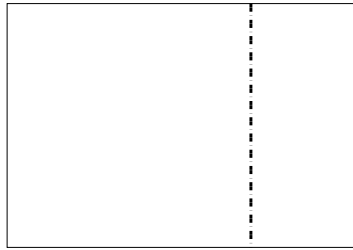


Benutze die vorgegebene Anordnung um jede Aufgabe zu lösen.


1)  $31 \cdot 20 =$




2)  $20 \cdot 29 =$




3)  $26 \cdot 20 =$




4)  $20 \cdot 28 =$



5)  $20 \cdot 22 =$



6)  $20 \cdot 25 =$



**Antworten**

1. \_\_\_\_\_

2. \_\_\_\_\_

3. \_\_\_\_\_

4. \_\_\_\_\_

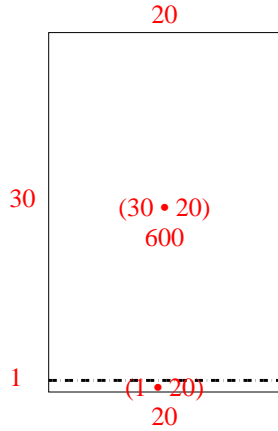
5. \_\_\_\_\_

6. \_\_\_\_\_

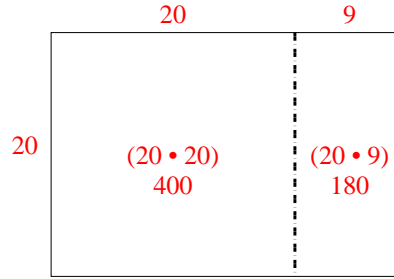


Benutze die vorgegebene Anordnung um jede Aufgabe zu lösen.

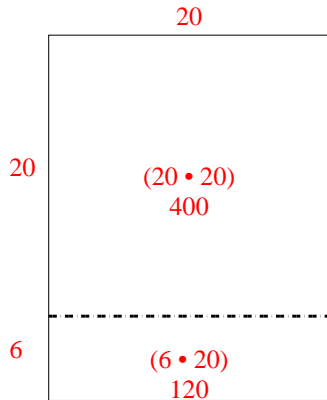
1)  $31 \cdot 20 =$



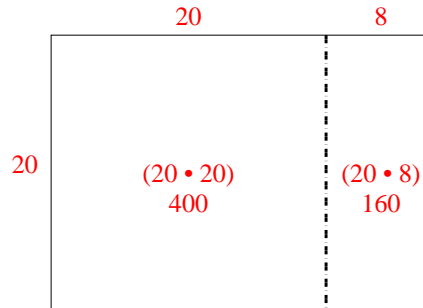
2)  $20 \cdot 29 =$



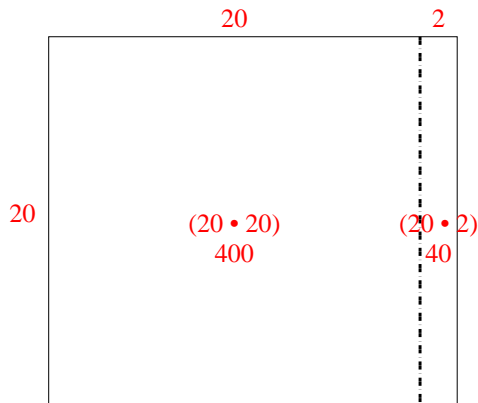
3)  $26 \cdot 20 =$



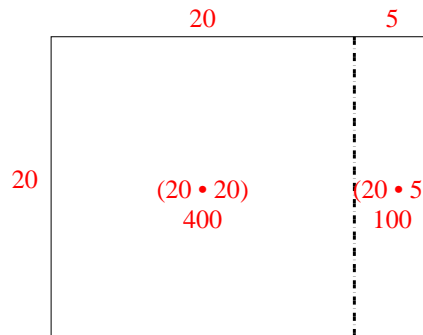
4)  $20 \cdot 28 =$



5)  $20 \cdot 22 =$



6)  $20 \cdot 25 =$

Antworten

1. 620
2. 580
3. 520
4. 560
5. 440
6. 500



Benutze die vorgegebene Anordnung um jede Aufgabe zu lösen.

1)  $20 \cdot 21 =$

2)  $23 \cdot 20 =$

3)  $27 \cdot 20 =$

4)  $24 \cdot 20 =$

5)  $20 \cdot 22 =$

6)  $20 \cdot 28 =$

Antworten

1. \_\_\_\_\_

2. \_\_\_\_\_

3. \_\_\_\_\_

4. \_\_\_\_\_

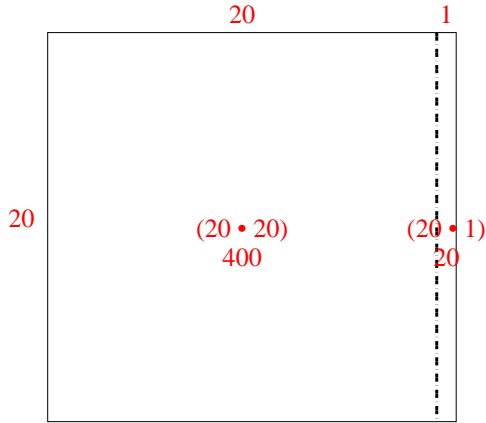
5. \_\_\_\_\_

6. \_\_\_\_\_

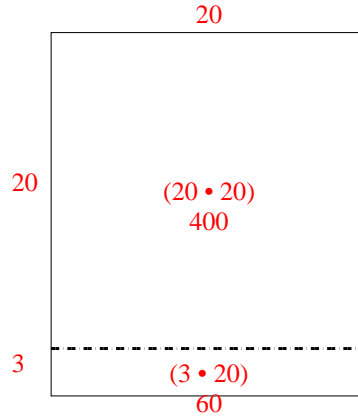


Benutze die vorgegebene Anordnung um jede Aufgabe zu lösen.

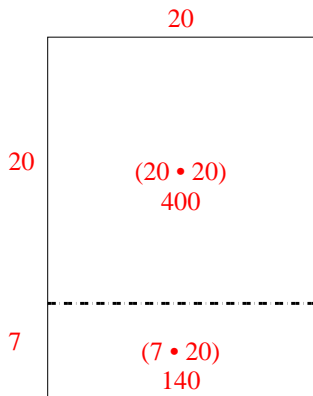
1)  $20 \cdot 21 =$



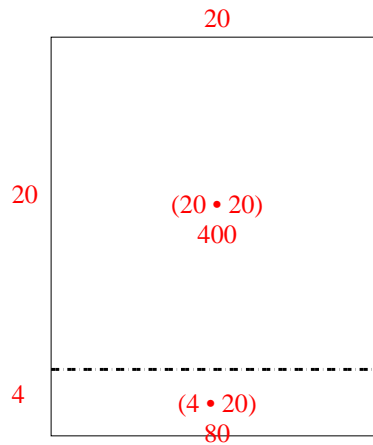
2)  $23 \cdot 20 =$



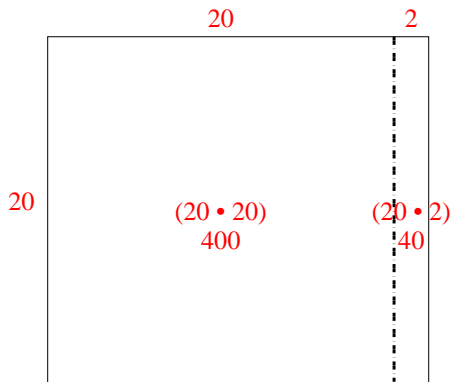
3)  $27 \cdot 20 =$



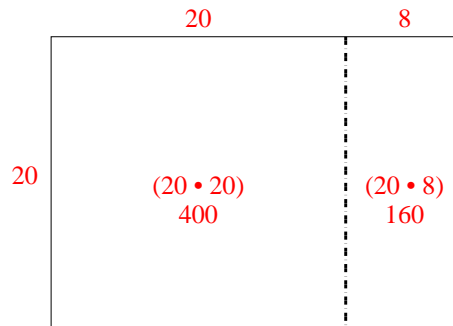
4)  $24 \cdot 20 =$



5)  $20 \cdot 22 =$



6)  $20 \cdot 28 =$



Antworten

1. 420

2. 460

3. 540

4. 480

5. 440

6. 560






Benutze die vorgegebene Anordnung um jede Aufgabe zu lösen.


1)  $20 \cdot 35 =$




2)  $20 \cdot 31 =$




3)  $20 \cdot 25 =$




4)  $22 \cdot 20 =$



5)  $20 \cdot 22 =$



6)  $20 \cdot 28 =$



Antworten

1. \_\_\_\_\_

2. \_\_\_\_\_

3. \_\_\_\_\_

4. \_\_\_\_\_

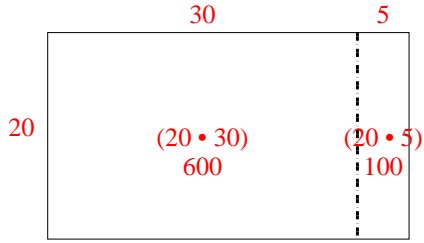
5. \_\_\_\_\_

6. \_\_\_\_\_

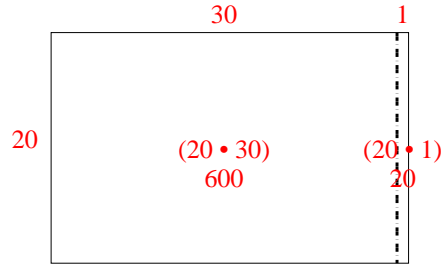


Benutze die vorgegebene Anordnung um jede Aufgabe zu lösen.

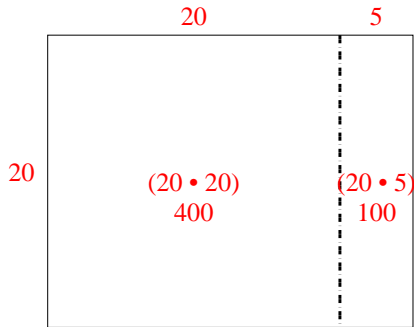
1)  $20 \cdot 35 =$



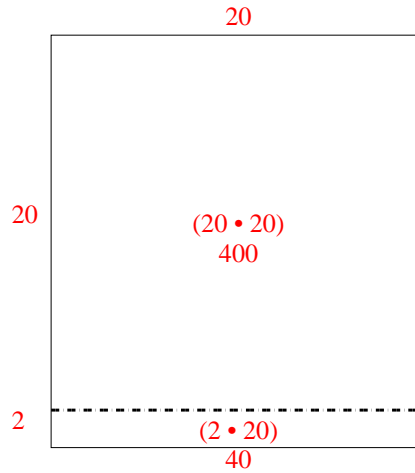
2)  $20 \cdot 31 =$



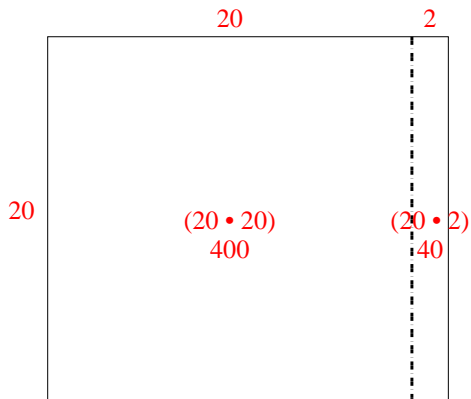
3)  $20 \cdot 25 =$



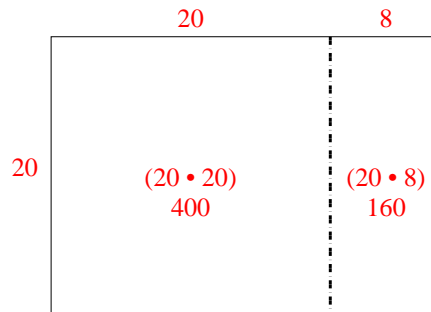
4)  $22 \cdot 20 =$



5)  $20 \cdot 22 =$



6)  $20 \cdot 28 =$



Antworten

1. 700

2. 620

3. 500

4. 440


5. 440

6. 560




Benutze die vorgegebene Anordnung um jede Aufgabe zu lösen.


1)  $20 \cdot 24 =$




2)  $20 \cdot 27 =$




3)  $20 \cdot 22 =$




4)  $20 \cdot 29 =$



5)  $25 \cdot 20 =$



6)  $24 \cdot 20 =$



Antworten

1. \_\_\_\_\_

2. \_\_\_\_\_

3. \_\_\_\_\_

4. \_\_\_\_\_

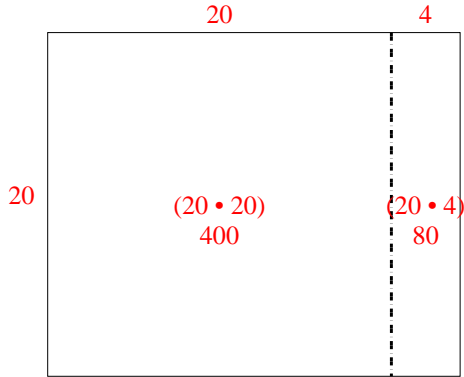
5. \_\_\_\_\_

6. \_\_\_\_\_

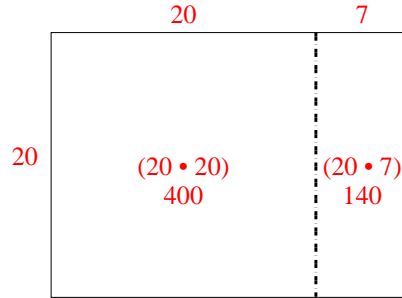


Benutze die vorgegebene Anordnung um jede Aufgabe zu lösen.

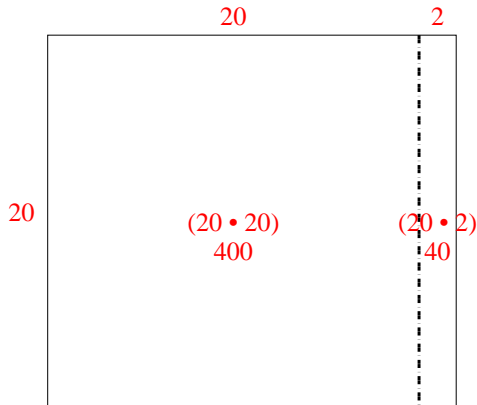
1)  $20 \cdot 24 =$



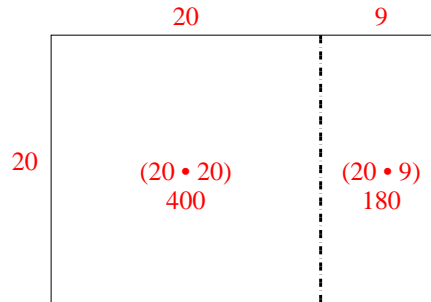
2)  $20 \cdot 27 =$



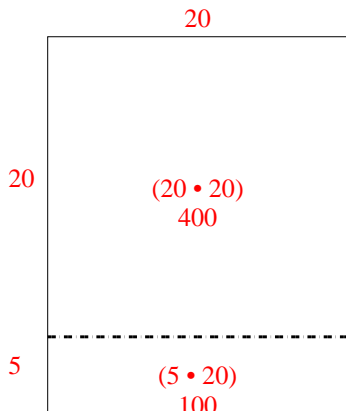
3)  $20 \cdot 22 =$



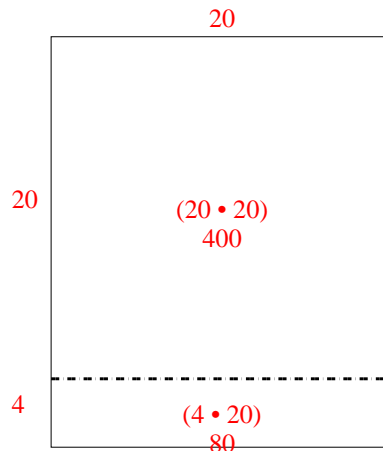
4)  $20 \cdot 29 =$



5)  $25 \cdot 20 =$



6)  $24 \cdot 20 =$



Antworten

1. 480
2. 540
3. 440
4. 580
5. 500
6. 480



Benutze die vorgegebene Anordnung um jede Aufgabe zu lösen.

1)  $20 \cdot 36 =$

2)  $25 \cdot 30 =$

3)  $20 \cdot 29 =$

4)  $23 \cdot 20 =$

5)  $26 \cdot 20 =$

6)  $24 \cdot 20 =$

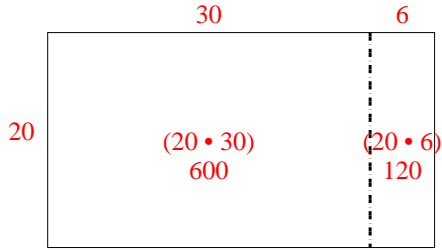
Antworten

- 1. \_\_\_\_\_
- 2. \_\_\_\_\_
- 3. \_\_\_\_\_
- 4. \_\_\_\_\_
- 5. \_\_\_\_\_
- 6. \_\_\_\_\_

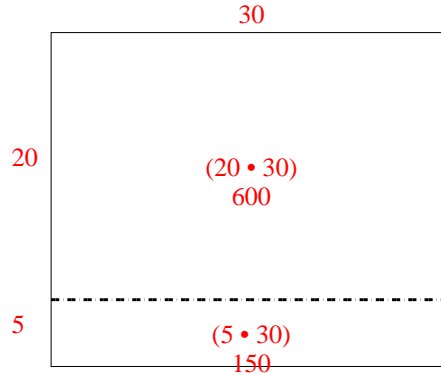


Benutze die vorgegebene Anordnung um jede Aufgabe zu lösen.

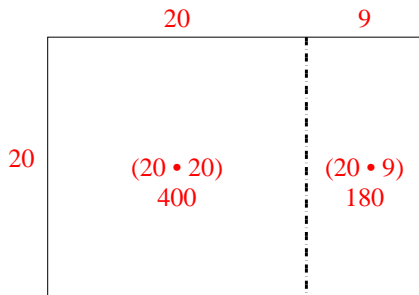
1)  $20 \cdot 36 =$



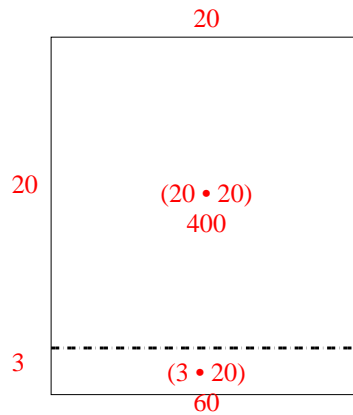
2)  $25 \cdot 30 =$



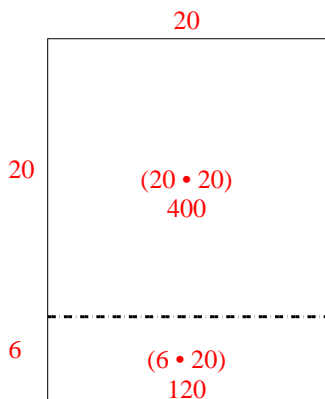
3)  $20 \cdot 29 =$



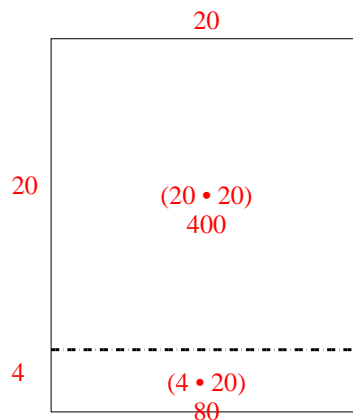
4)  $23 \cdot 20 =$



5)  $26 \cdot 20 =$



6)  $24 \cdot 20 =$



Antworten

1. 720
2. 750
3. 580
4. 460
5. 520
6. 480



Benutze die vorgegebene Anordnung um jede Aufgabe zu lösen.

1)  $40 \cdot 27 =$

2)  $30 \cdot 33 =$

3)  $20 \cdot 24 =$

4)  $23 \cdot 20 =$

5)  $20 \cdot 29 =$

6)  $28 \cdot 20 =$

Antworten

1. \_\_\_\_\_

2. \_\_\_\_\_

3. \_\_\_\_\_

4. \_\_\_\_\_

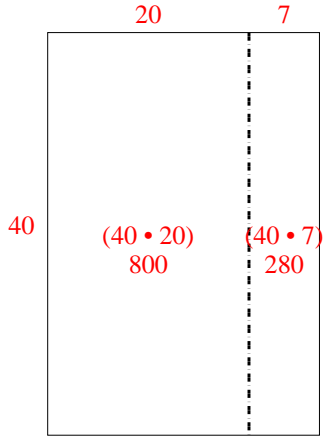
5. \_\_\_\_\_

6. \_\_\_\_\_

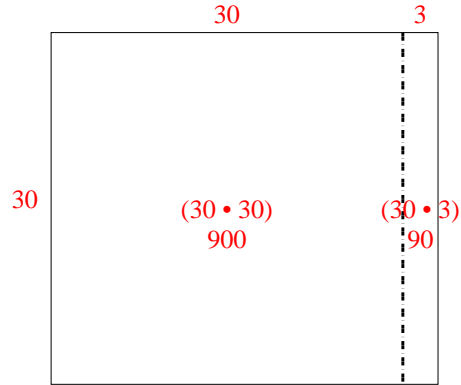


Benutze die vorgegebene Anordnung um jede Aufgabe zu lösen.

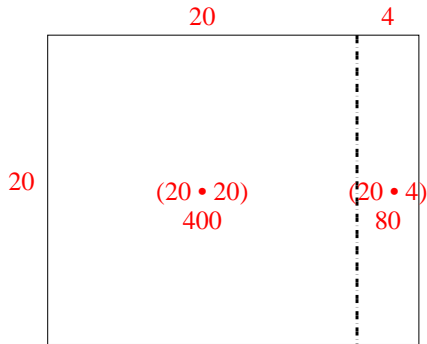
1)  $40 \cdot 27 =$



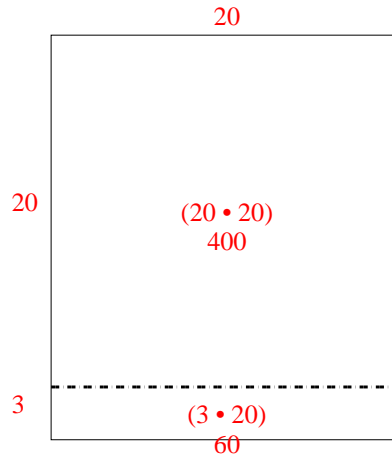
2)  $30 \cdot 33 =$



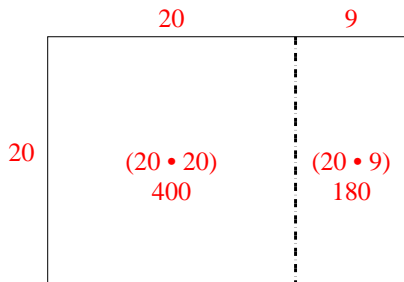
3)  $20 \cdot 24 =$



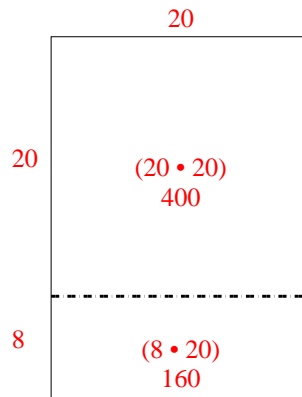
4)  $23 \cdot 20 =$



5)  $20 \cdot 29 =$



6)  $28 \cdot 20 =$

Antworten1. 1.0802. 9903. 4804. 4605. 5806. 560






Benutze die vorgegebene Anordnung um jede Aufgabe zu lösen.


1)  $30 \cdot 32 =$




2)  $20 \cdot 21 =$




3)  $24 \cdot 20 =$




4)  $20 \cdot 28 =$



5)  $20 \cdot 24 =$



6)  $26 \cdot 20 =$



Antworten

1. \_\_\_\_\_

2. \_\_\_\_\_

3. \_\_\_\_\_

4. \_\_\_\_\_

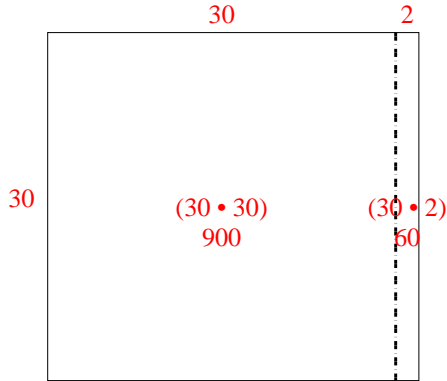
5. \_\_\_\_\_

6. \_\_\_\_\_

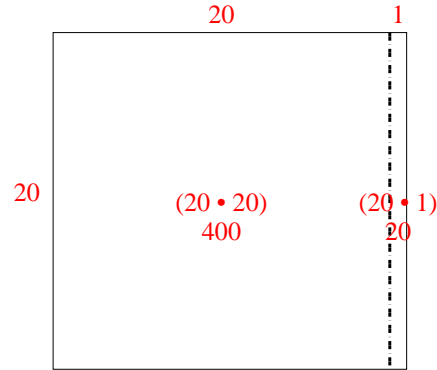


Benutze die vorgegebene Anordnung um jede Aufgabe zu lösen.

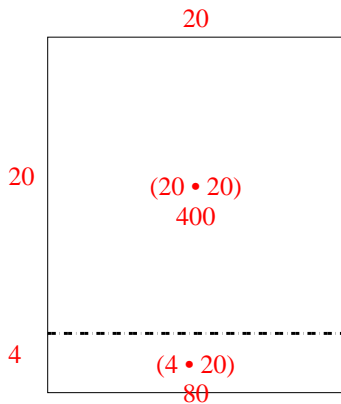
1)  $30 \cdot 32 =$



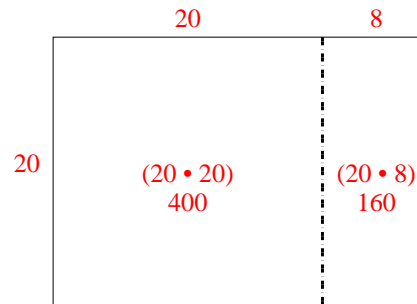
2)  $20 \cdot 21 =$



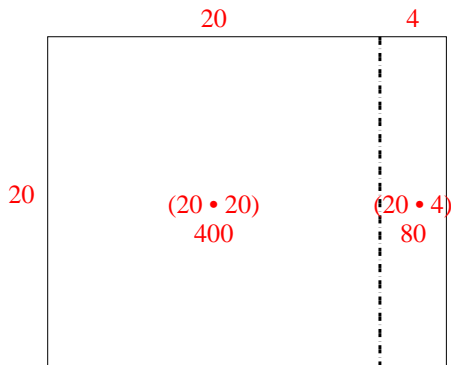
3)  $24 \cdot 20 =$



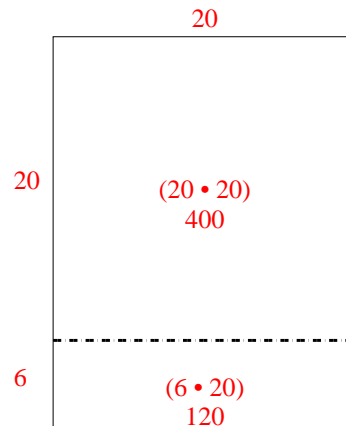
4)  $20 \cdot 28 =$



5)  $20 \cdot 24 =$



6)  $26 \cdot 20 =$

Antworten1. 9602. 4203. 4804. 5605. 4806. 520



Benutze die vorgegebene Anordnung um jede Aufgabe zu lösen.

1)  $20 \cdot 32 =$

2)  $20 \cdot 22 =$

3)  $20 \cdot 23 =$

4)  $20 \cdot 21 =$

5)  $20 \cdot 28 =$

6)  $20 \cdot 24 =$

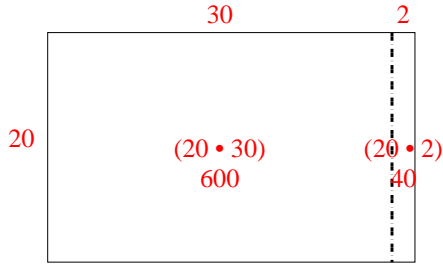
Antworten

- 1. \_\_\_\_\_
- 2. \_\_\_\_\_
- 3. \_\_\_\_\_
- 4. \_\_\_\_\_
- 5. \_\_\_\_\_
- 6. \_\_\_\_\_

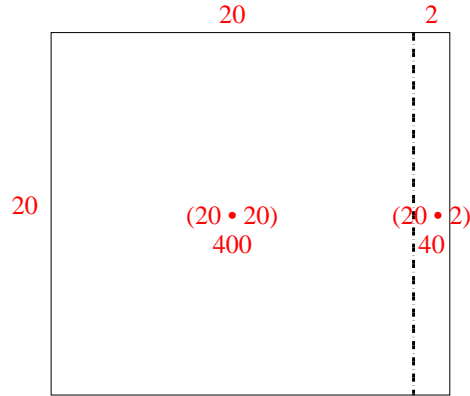


Benutze die vorgegebene Anordnung um jede Aufgabe zu lösen.

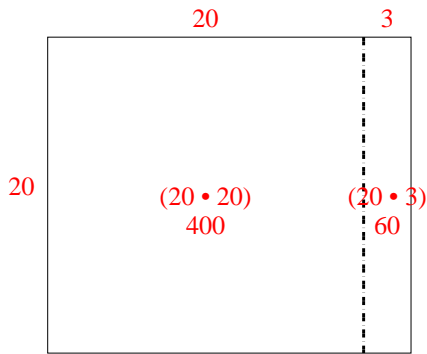
1)  $20 \cdot 32 =$



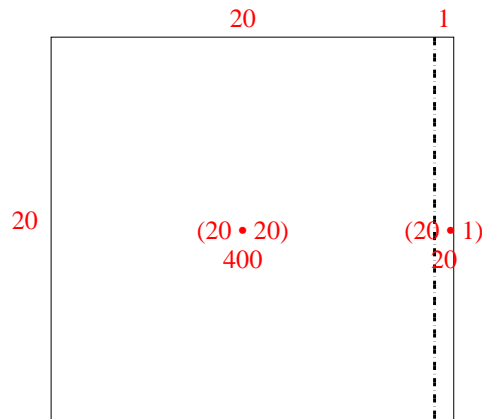
2)  $20 \cdot 22 =$



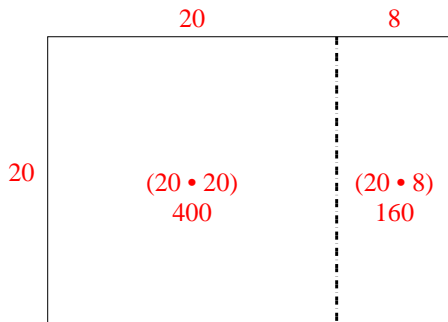
3)  $20 \cdot 23 =$



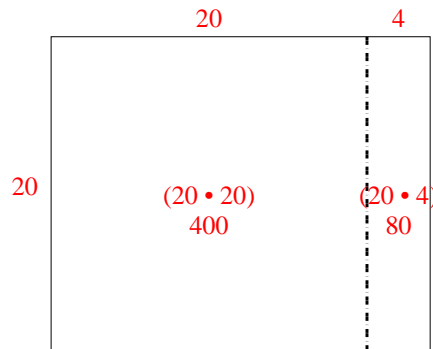
4)  $20 \cdot 21 =$



5)  $20 \cdot 28 =$



6)  $20 \cdot 24 =$



Antworten

1. 640

2. 440

3. 460

4. 420

5. 560

6. 480