



Benutze die vorgegebene Anordnung um jede Aufgabe zu lösen.

1) $40 \cdot 27 =$

2) $30 \cdot 33 =$

3) $20 \cdot 24 =$

4) $23 \cdot 20 =$

5) $20 \cdot 29 =$

6) $28 \cdot 20 =$

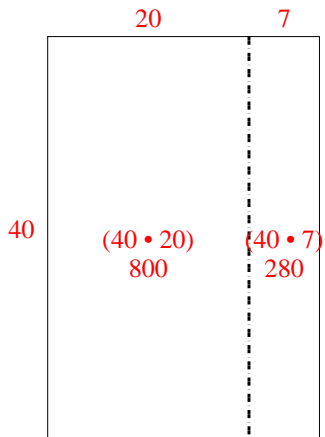
Antworten

- 1. _____
- 2. _____
- 3. _____
- 4. _____
- 5. _____
- 6. _____

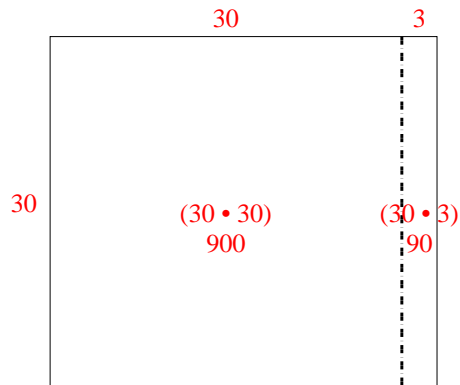


Benutze die vorgegebene Anordnung um jede Aufgabe zu lösen.

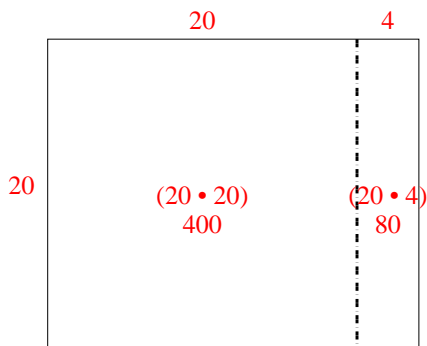
1) $40 \cdot 27 =$



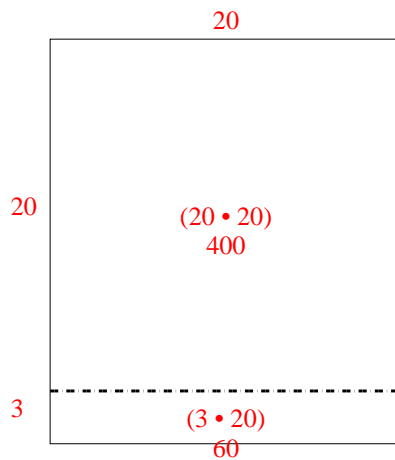
2) $30 \cdot 33 =$



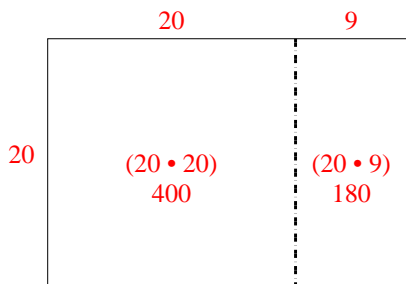
3) $20 \cdot 24 =$



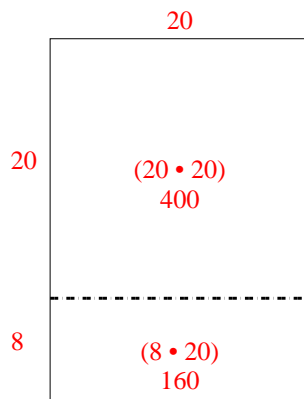
4) $23 \cdot 20 =$



5) $20 \cdot 29 =$



6) $28 \cdot 20 =$



Antworten

1. 1.080

2. 990

3. 480

4. 460

5. 580

6. 560