



Benutze die vorgegebene Anordnung um jede Aufgabe zu lösen.

1)  $30 \cdot 35 =$

2)  $20 \cdot 38 =$

3)  $30 \cdot 29 =$

4)  $20 \cdot 24 =$

5)  $20 \cdot 25 =$

6)  $20 \cdot 29 =$

Antworten

1. \_\_\_\_\_

2. \_\_\_\_\_

3. \_\_\_\_\_

4. \_\_\_\_\_

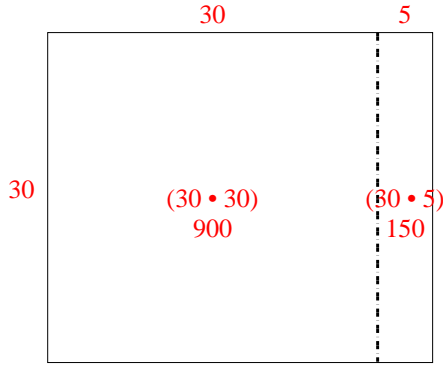
5. \_\_\_\_\_

6. \_\_\_\_\_

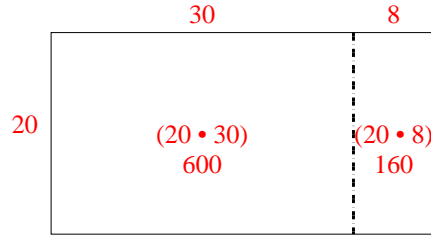


Benutze die vorgegebene Anordnung um jede Aufgabe zu lösen.

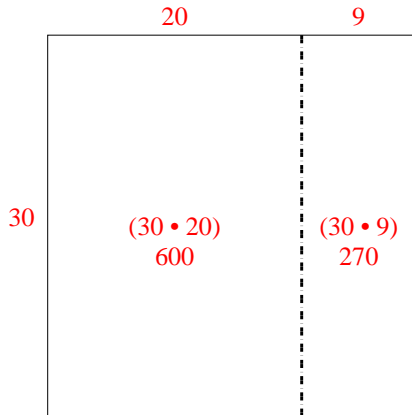
1)  $30 \cdot 35 =$



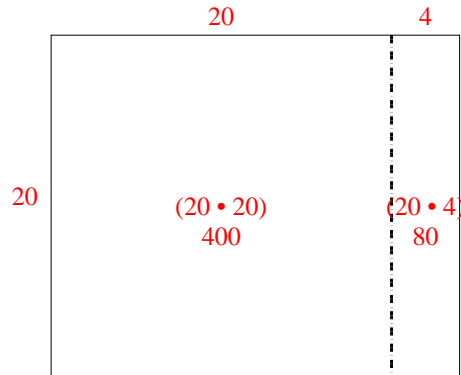
2)  $20 \cdot 38 =$



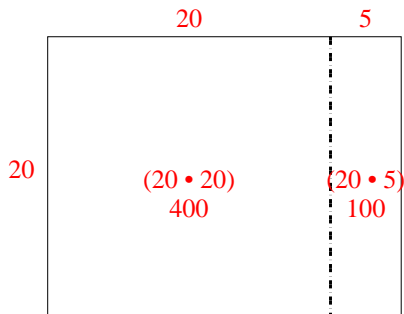
3)  $30 \cdot 29 =$



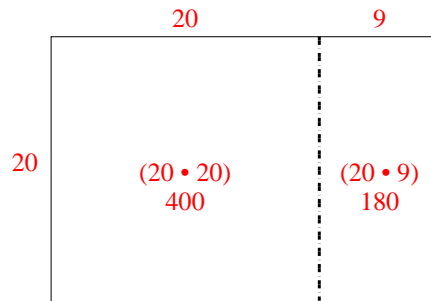
4)  $20 \cdot 24 =$



5)  $20 \cdot 25 =$



6)  $20 \cdot 29 =$



Antworten

1. 1.050

2. 760

3. 870

4. 480

5. 500

6. 580