





Benutze die vorgegebenen Anordnungen um jede Aufgabe zu lösen.


1)  $20 \cdot 29 =$




2)  $17 \cdot 10 =$




3)  $10 \cdot 16 =$




4)  $11 \cdot 10 =$



5)  $12 \cdot 10 =$



6)  $10 \cdot 19 =$



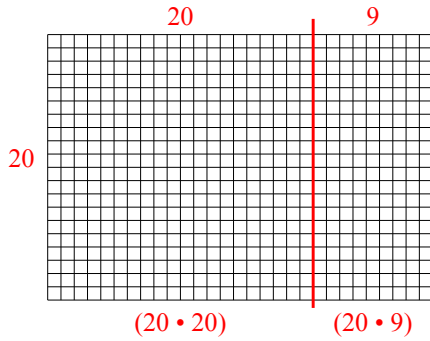
**Antworten**

- 1. \_\_\_\_\_
- 2. \_\_\_\_\_
- 3. \_\_\_\_\_
- 4. \_\_\_\_\_
- 5. \_\_\_\_\_
- 6. \_\_\_\_\_

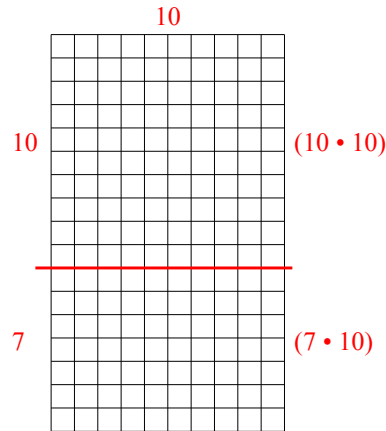


Benutze die vorgegebenen Anordnungen um jede Aufgabe zu lösen.

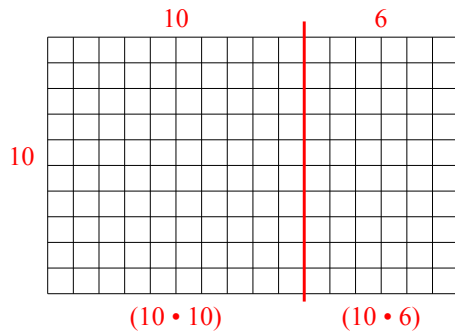
1)  $20 \cdot 29 =$



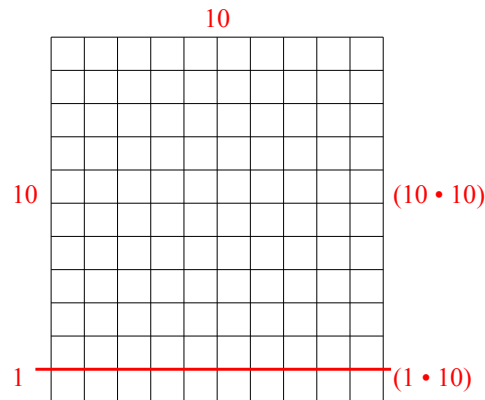
2)  $17 \cdot 10 =$



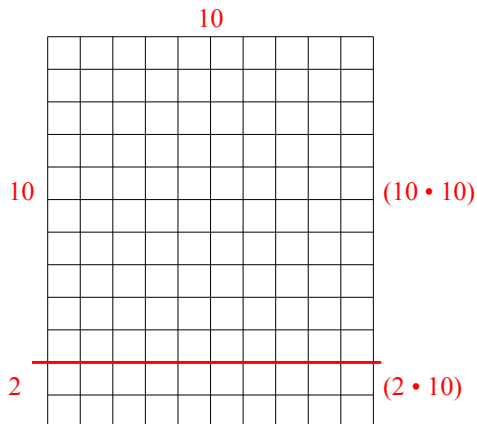
3)  $10 \cdot 16 =$



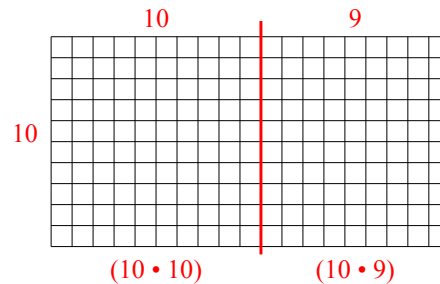
4)  $11 \cdot 10 =$



5)  $12 \cdot 10 =$



6)  $10 \cdot 19 =$



**Antworten**

1. 580

2. 170

3. 160

4. 110

5. 120

6. 190