


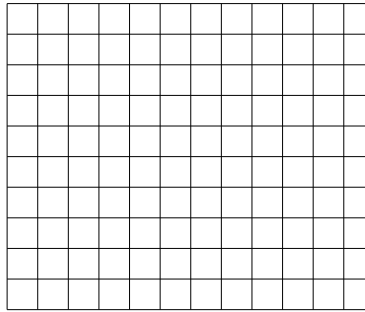


Benutze die vorgegebenen Anordnungen um jede Aufgabe zu lösen.


1)  $23 \cdot 10 =$




2)  $10 \cdot 12 =$




3)  $10 \cdot 13 =$




4)  $10 \cdot 18 =$



5)  $15 \cdot 10 =$



6)  $10 \cdot 16 =$



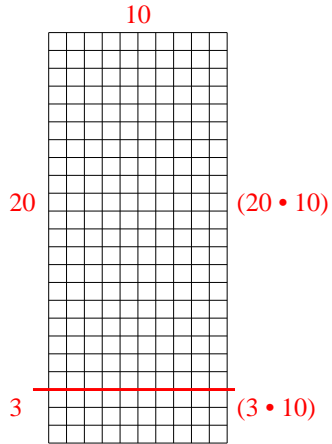
Antworten

- 1. \_\_\_\_\_
- 2. \_\_\_\_\_
- 3. \_\_\_\_\_
- 4. \_\_\_\_\_
- 5. \_\_\_\_\_
- 6. \_\_\_\_\_

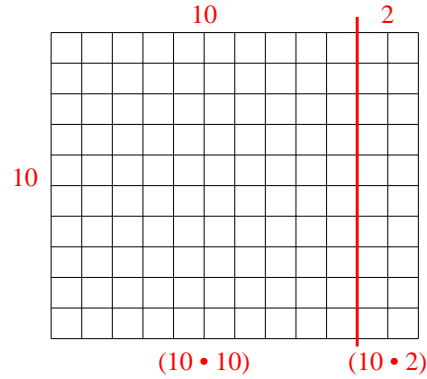


Benutze die vorgegebenen Anordnungen um jede Aufgabe zu lösen.

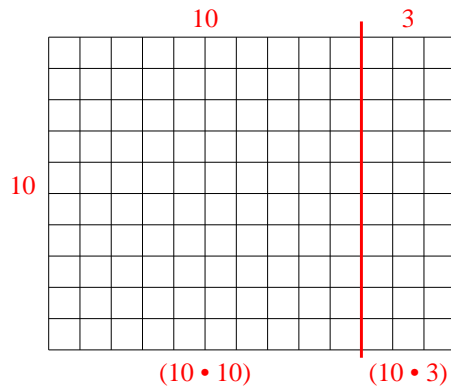
1)  $23 \cdot 10 =$



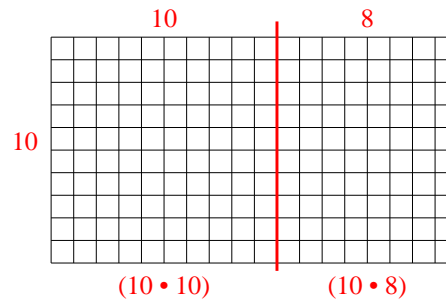
2)  $10 \cdot 12 =$



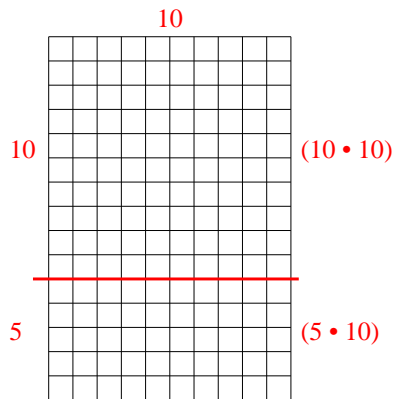
3)  $10 \cdot 13 =$



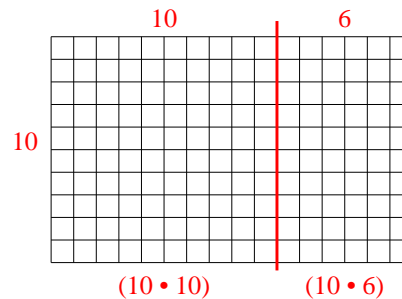
4)  $10 \cdot 18 =$



5)  $15 \cdot 10 =$



6)  $10 \cdot 16 =$

Antworten1. 2302. 1203. 1304. 1805. 1506. 160