





Benutze die vorgegebenen Anordnungen um jede Aufgabe zu lösen.


1)  $20 \cdot 15 =$




2)  $10 \cdot 11 =$




3)  $10 \cdot 15 =$




4)  $17 \cdot 10 =$



5)  $11 \cdot 10 =$



6)  $10 \cdot 13 =$



Antworten

1. \_\_\_\_\_

2. \_\_\_\_\_

3. \_\_\_\_\_

4. \_\_\_\_\_

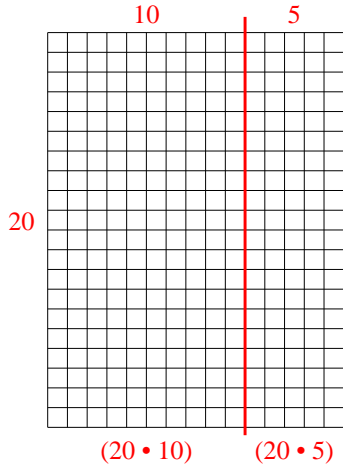
5. \_\_\_\_\_

6. \_\_\_\_\_

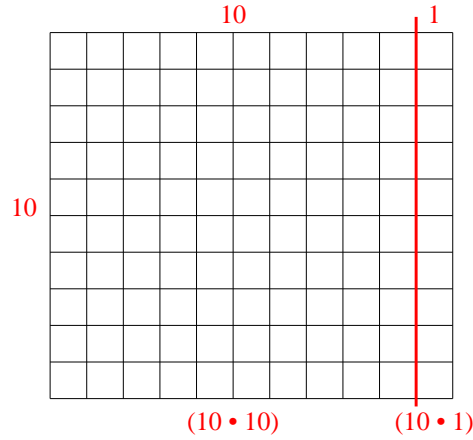


Benutze die vorgegebenen Anordnungen um jede Aufgabe zu lösen.

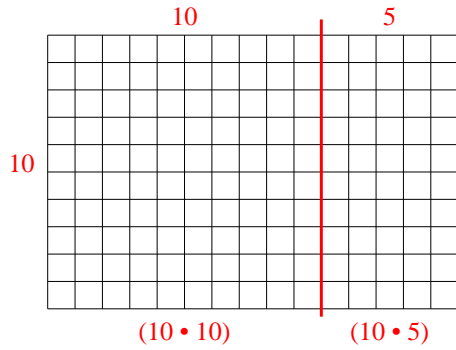
1)  $20 \cdot 15 =$



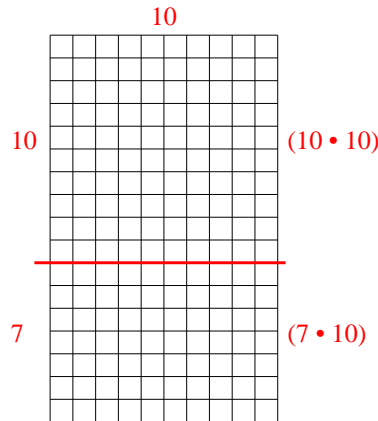
2)  $10 \cdot 11 =$



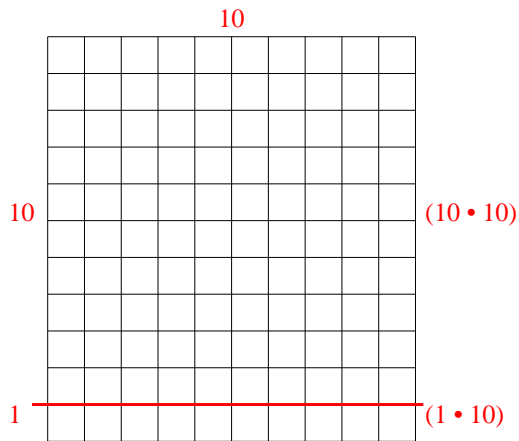
3)  $10 \cdot 15 =$



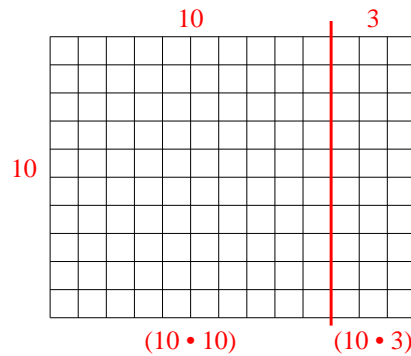
4)  $17 \cdot 10 =$



5)  $11 \cdot 10 =$



6)  $10 \cdot 13 =$



Antworten

- 1. 300
- 2. 110
- 3. 150
- 4. 170
- 5. 110
- 6. 130