


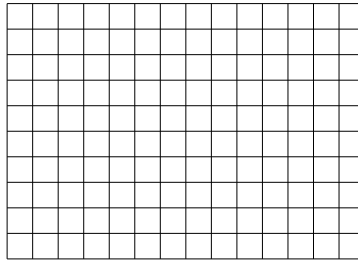


Benutze die vorgegebenen Anordnungen um jede Aufgabe zu lösen.


1) $20 \cdot 27 =$




2) $10 \cdot 14 =$




3) $14 \cdot 10 =$




4) $11 \cdot 10 =$



5) $12 \cdot 10 =$



6) $17 \cdot 10 =$



Antworten

1. _____

2. _____

3. _____

4. _____

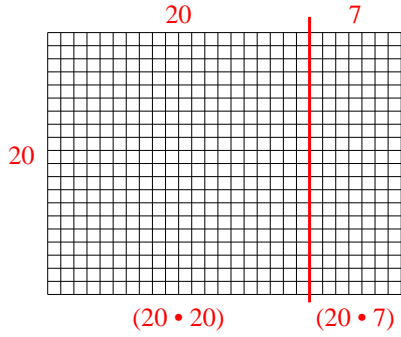
5. _____

6. _____

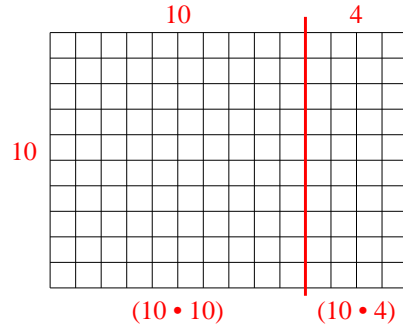


Benutze die vorgegebenen Anordnungen um jede Aufgabe zu lösen.

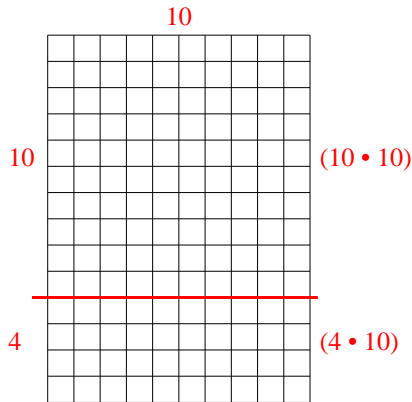
1) $20 \cdot 27 =$



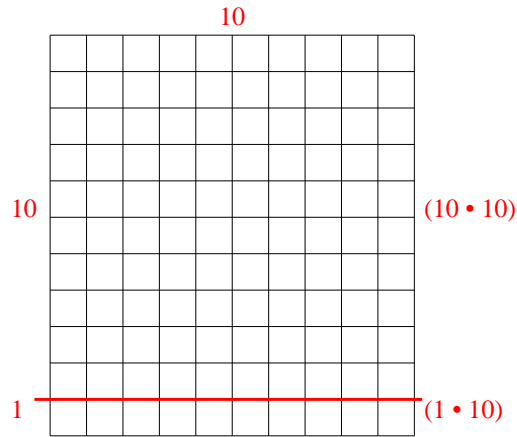
2) $10 \cdot 14 =$



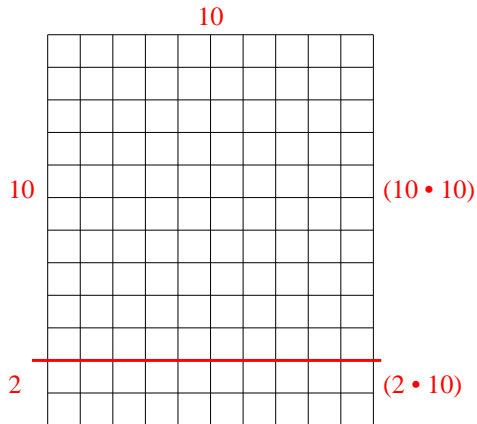
3) $14 \cdot 10 =$



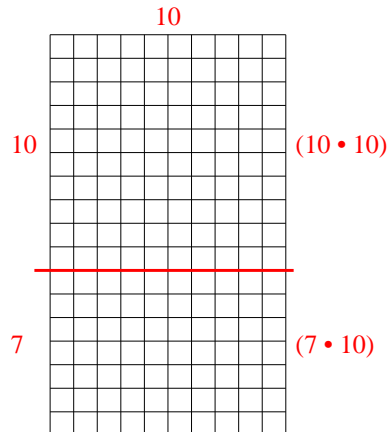
4) $11 \cdot 10 =$



5) $12 \cdot 10 =$



6) $17 \cdot 10 =$



Antworten

1. 540
2. 140
3. 140
4. 110
5. 120
6. 170