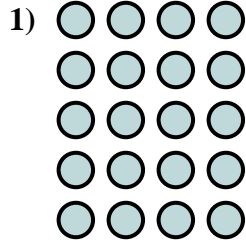
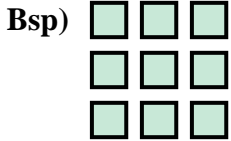




Schreibe eine Gleichung, die der Anordnung entspricht und finde die richtige Anzahl der Formen.



Antworten

Bsp. 3 • 3 = 9

1. \_\_\_\_\_

2. \_\_\_\_\_

3. \_\_\_\_\_

4. \_\_\_\_\_

5. \_\_\_\_\_

6. \_\_\_\_\_

7. \_\_\_\_\_

8. \_\_\_\_\_

9. \_\_\_\_\_

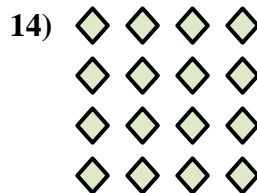

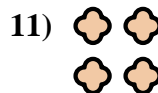
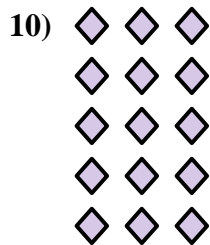

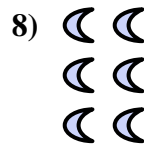
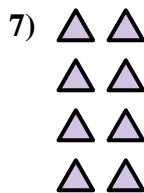


10. \_\_\_\_\_

11. \_\_\_\_\_

12. \_\_\_\_\_

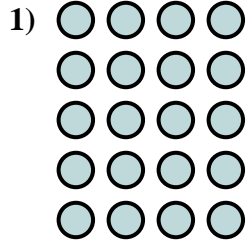
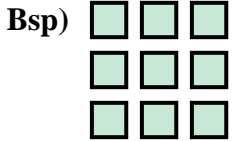
13. \_\_\_\_\_

14. \_\_\_\_\_





Schreibe eine Gleichung, die der Anordnung entspricht und finde die richtige Anzahl der Formen.



**Antworten**

Bsp.  $3 \cdot 3 = 9$

1.  $5 \cdot 4 = 20$

2.  $5 \cdot 5 = 25$

3.  $3 \cdot 5 = 15$

4.  $2 \cdot 3 = 6$

5.  $4 \cdot 3 = 12$

6.  $2 \cdot 5 = 10$

7.  $4 \cdot 2 = 8$

8.  $3 \cdot 2 = 6$

9.  $4 \cdot 5 = 20$

10.  $5 \cdot 3 = 15$

11.  $2 \cdot 2 = 4$

12.  $2 \cdot 4 = 8$

13.  $3 \cdot 4 = 12$

14.  $4 \cdot 4 = 16$

