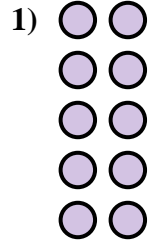





Schreibe eine Gleichung, die der Anordnung entspricht und finde die richtige Anzahl der Formen.



Antworten

Bsp. 3 • 4 = 12

1. _____

2. _____

3. _____

4. _____

5. _____

6. _____

7. _____

8. _____

9. _____



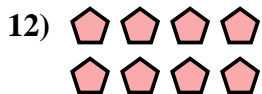
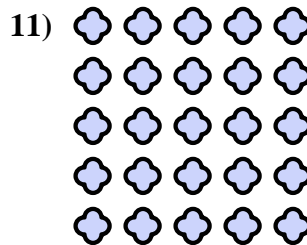




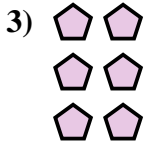
10. _____

11. _____

12. _____

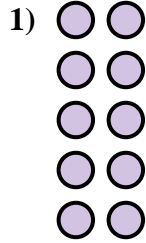

13. _____

14. _____





Schreibe eine Gleichung, die der Anordnung entspricht und finde die richtige Anzahl der Formen.



Antworten

Bsp. 3 • 4 = 12

1. 5 • 2 = 10

2. 3 • 3 = 9

3. 3 • 2 = 6

4. 2 • 3 = 6

5. 5 • 3 = 15

6. 4 • 2 = 8

7. 5 • 4 = 20

8. 4 • 4 = 16

9. 2 • 2 = 4

10. 2 • 5 = 10

11. 5 • 5 = 25

12. 2 • 4 = 8

13. 4 • 5 = 20

14. 4 • 3 = 12

