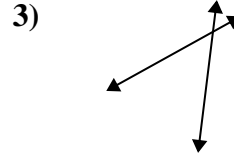
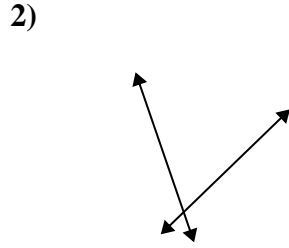
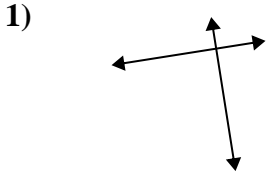




Benutze 'parallel', 'rechtwinklig'(rech) oder 'sich überschneidend'(über) um die Linien zu beschreiben.

Antworten

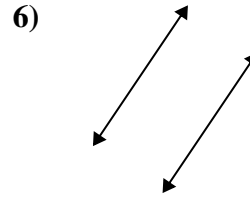
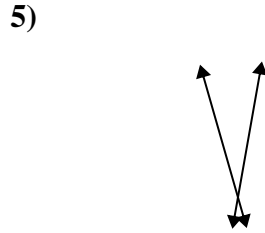
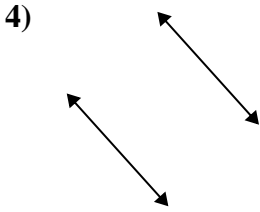


1. _____

2. _____

3. _____

4. _____

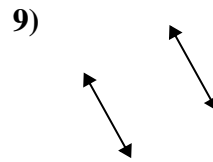
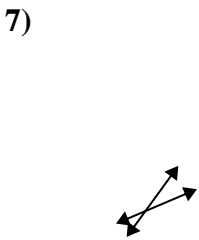


5. _____

6. _____

7. _____

8. _____

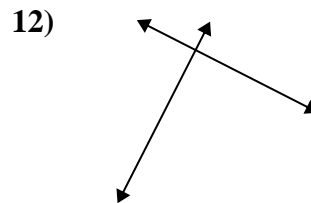
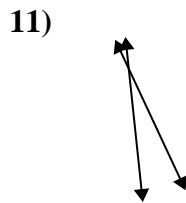
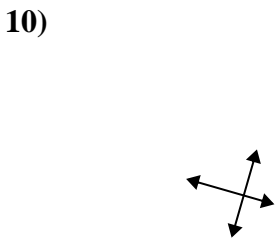


9. _____

10. _____

11. _____

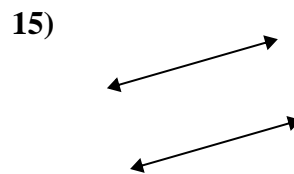
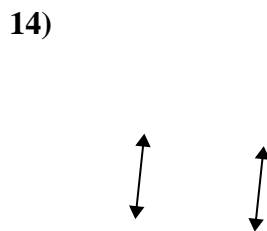
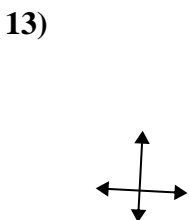
12. _____



13. _____

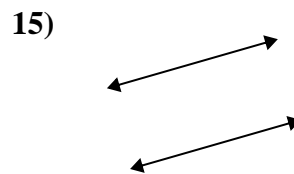
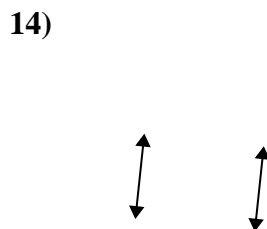
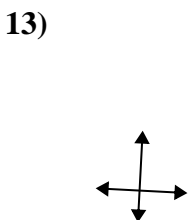
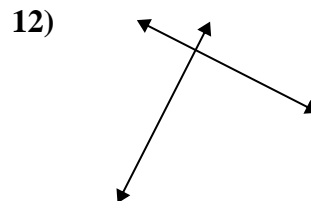
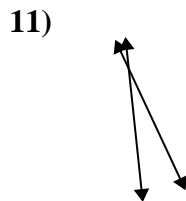
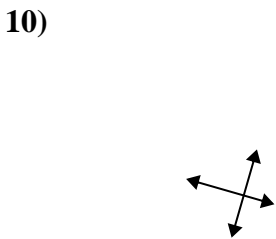
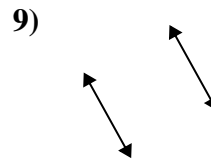
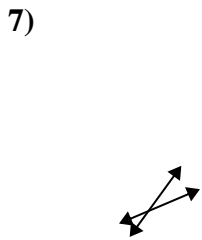
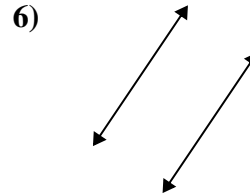
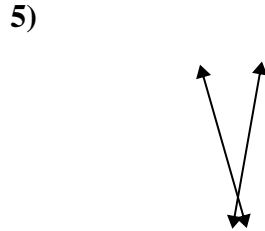
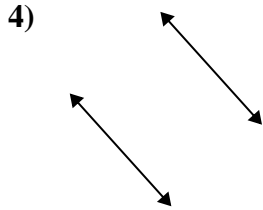
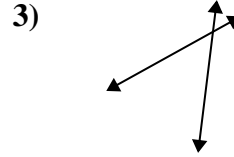
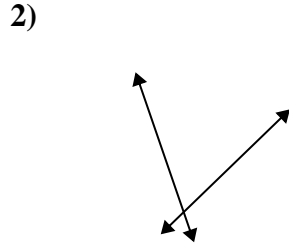
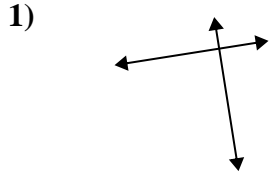
14. _____

15. _____





Benutze 'parallel', 'rechtwinklig'(rech) oder 'sich überschneidend'(über) um die Linien zu beschreiben.



Antworten

1. rech & über

2. über

3. über

4. parallel

5. über

6. parallel

7. über

8. rech & über

9. parallel

10. rech & über

11. über

12. rech & über

13. rech & über

14. parallel

15. parallel