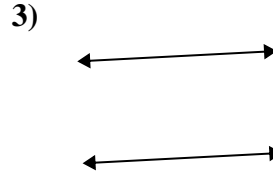
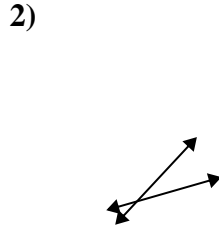
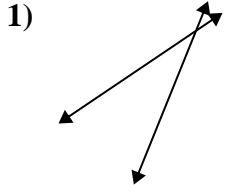




Benutze 'parallel', 'rechtwinklig'(rech) oder 'sich überschneidend'(über) um die Linien zu beschreiben.

Antworten

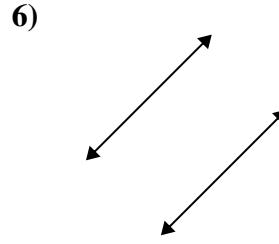
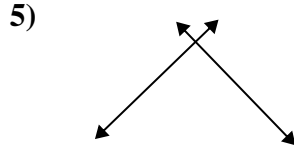
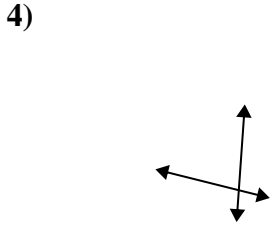


1. _____

2. _____

3. _____

4. _____

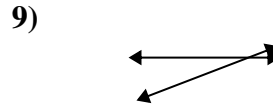
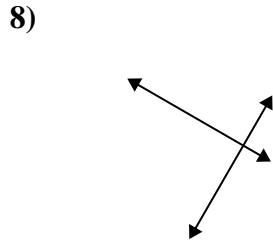
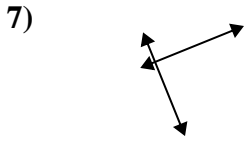


5. _____

6. _____

7. _____

8. _____



9. _____

10. _____

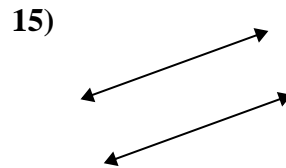
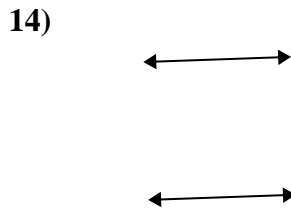
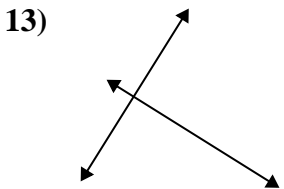
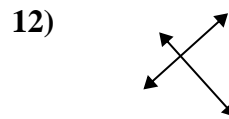
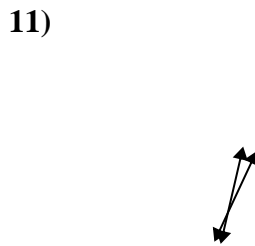
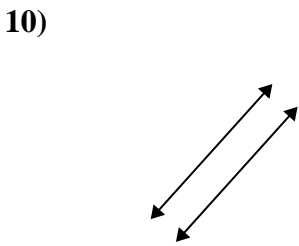
11. _____

12. _____

13. _____

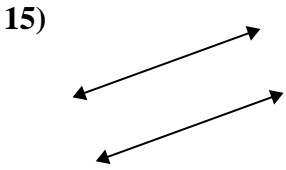
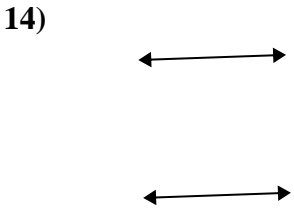
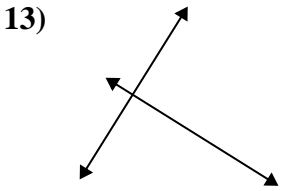
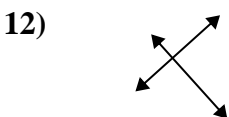
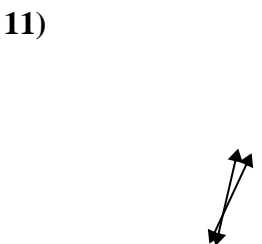
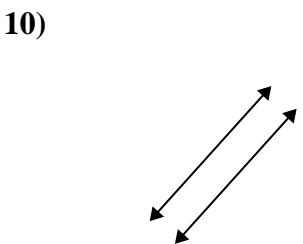
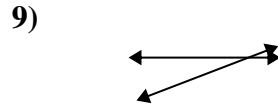
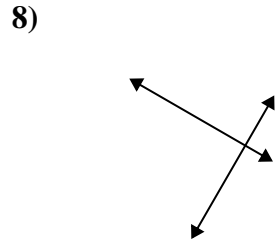
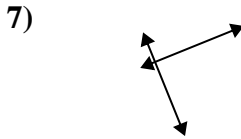
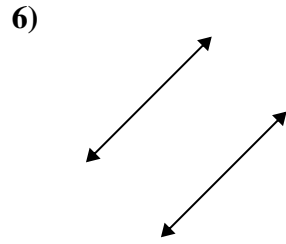
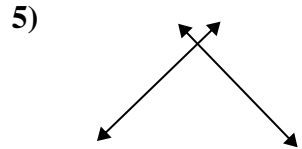
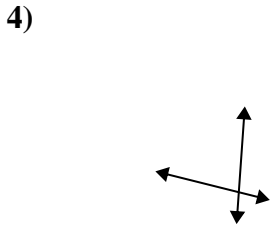
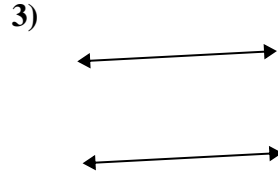
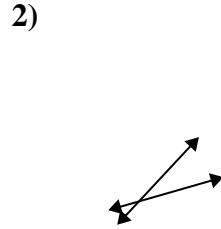
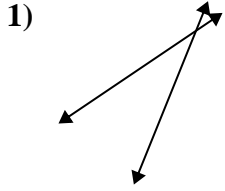
14. _____

15. _____





Benutze 'parallel', 'rechtwinklig'(rech) oder 'sich überschneidend'(über) um die Linien zu beschreiben.



Antworten

1. über

2. über

3. parallel

4. über

5. rech & über

6. parallel

7. rech & über

8. rech & über

9. über

10. parallel

11. über

12. rech & über

13. rech & über

14. parallel

15. parallel