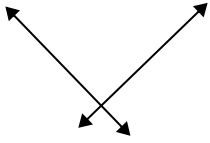




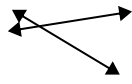
Benutze 'parallel', 'rechtwinklig'(rech) oder 'sich überschneidend'(über) um die Linien zu beschreiben.

Antworten

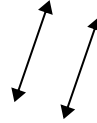
1)



2)



3)



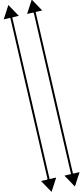
1. _____

2. _____

3. _____

4. _____

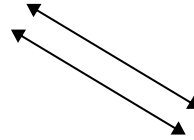
4)



5)



6)



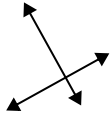
5. _____

6. _____

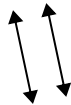
7. _____

8. _____

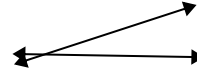
7)



8)



9)

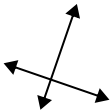


9. _____

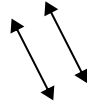
10. _____

11. _____

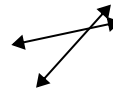
10)



11)



12)



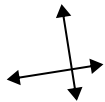
12. _____

13. _____

14. _____

15. _____

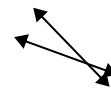
13)



14)



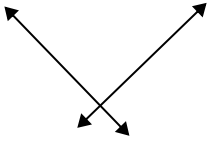
15)



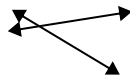


Benutze 'parallel', 'rechtwinklig'(rech) oder 'sich überschneidend'(über) um die Linien zu beschreiben.

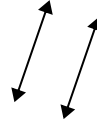
1)



2)



3)



Antworten

1. rech & über

2. über

3. parallel

4. parallel

5. über

6. parallel

7. rech & über

8. parallel

9. über

10. rech & über

11. parallel

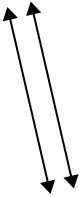
12. über

13. rech & über

14. rech & über

15. über

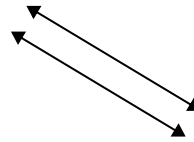
4)



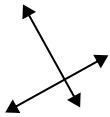
5)



6)



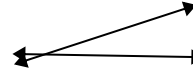
7)



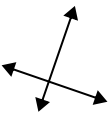
8)



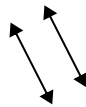
9)



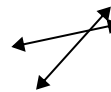
10)



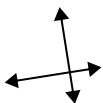
11)



12)



13)



14)



15)

