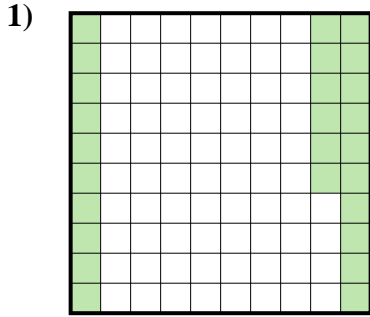
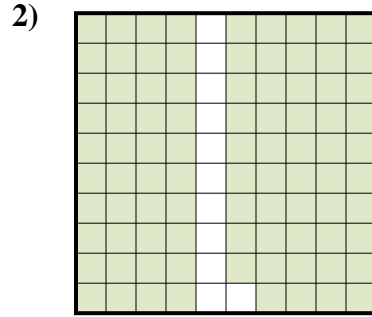




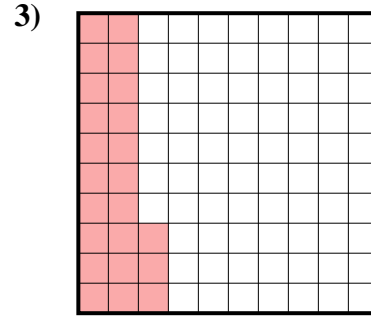
Stelle fest, welcher Buchstabe die schraffierte Fläche in Bezug auf das Ganze richtig darstellt.




- A. 0,26  
B. 260  
C. 2,6  
D. 26




- A. 0,89  
B. 89  
C. 0,089  
D. 890




- A. 23  
B. 0,023  
C. 230  
D. 0,23



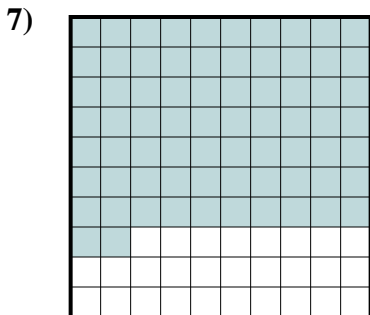
- A. 30  
B. 0,03  
C. 0,3  
D. 3



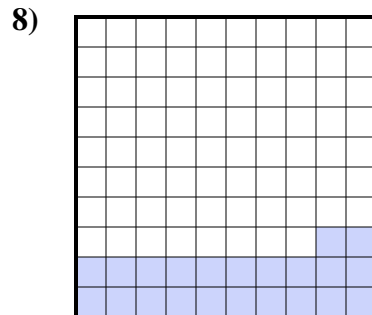
- A. 0,05  
B. 0,5  
C. 500  
D. 50



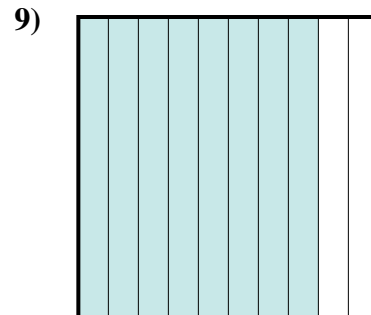
- A. 40  
B. 4  
C. 400  
D. 0,4



- A. 0,072  
B. 72  
C. 0,72  
D. 720



- A. 0,022  
B. 220  
C. 22  
D. 0,22



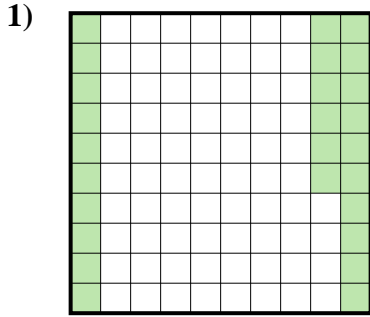
- A. 0,8  
B. 800  
C. 80  
D. 0,08

Antworten

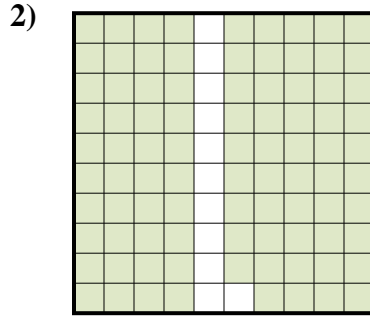
1. \_\_\_\_\_  
2. \_\_\_\_\_  
3. \_\_\_\_\_  
4. \_\_\_\_\_  
5. \_\_\_\_\_  
6. \_\_\_\_\_  
7. \_\_\_\_\_  
8. \_\_\_\_\_  
9. \_\_\_\_\_



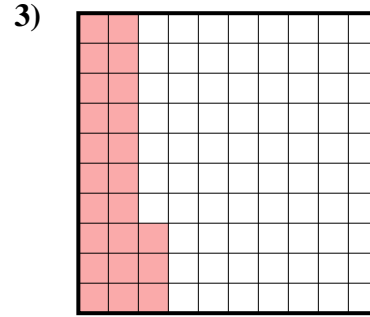
Stelle fest, welcher Buchstabe die schraffierte Fläche in Bezug auf das Ganze richtig darstellt.



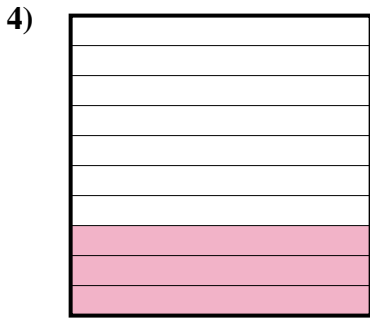
- A. 0,26
- B. 260
- C. 2,6
- D. 26




- A. 0,89
- B. 89
- C. 0,089
- D. 890




- A. 23
- B. 0,023
- C. 230
- D. 0,23



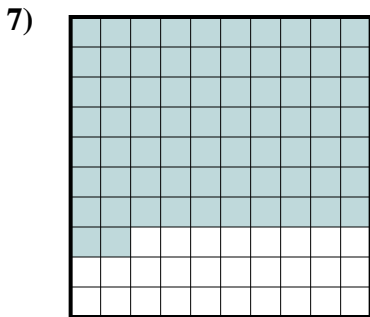
- A. 30
- B. 0,03
- C. 0,3
- D. 3



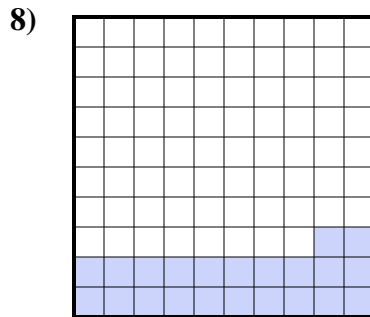
- A. 0,05
- B. 0,5
- C. 500
- D. 50



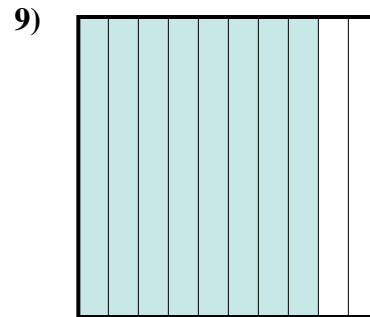
- A. 40
- B. 4
- C. 400
- D. 0,4



- A. 0,072
- B. 72
- C. 0,72
- D. 720



- A. 0,022
- B. 220
- C. 22
- D. 0,22



- A. 0,8
- B. 800
- C. 80
- D. 0,08

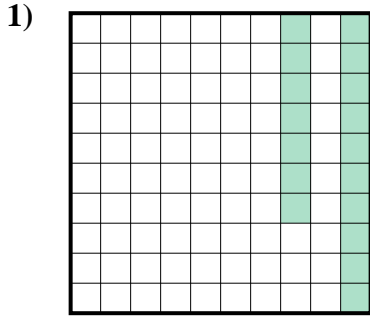
Antworten

1.     **A**
2.     **A**
3.     **D**
4.     **C**
5.     **B**
6.     **D**
7.     **C**
8.     **D**
9.     **A**

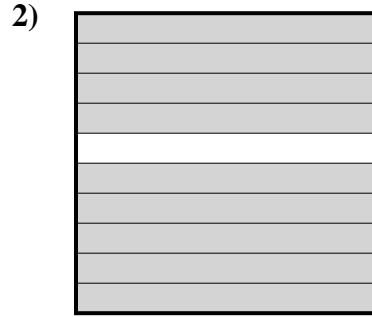


Stelle fest, welcher Buchstabe die schraffierte Fläche in Bezug auf das Ganze richtig darstellt.

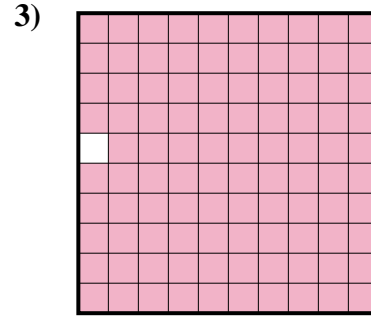
Antworten



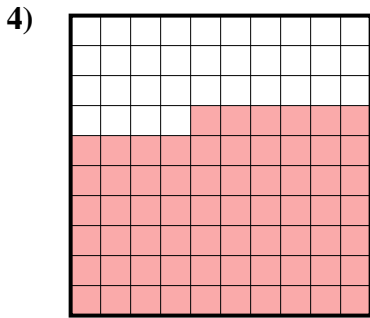
- A. 0,17
- B. 1,7
- C. 17
- D. 0,017



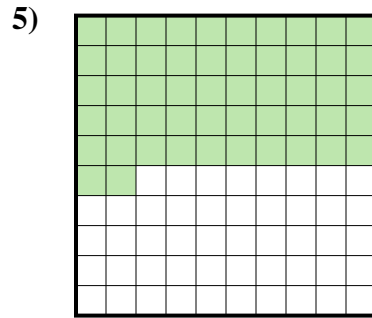
- A. 0,09
- B. 0,9
- C. 90
- D. 9



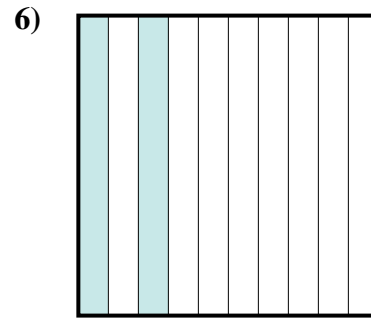
- A. 0,99
- B. 0,099
- C. 9,9
- D. 99



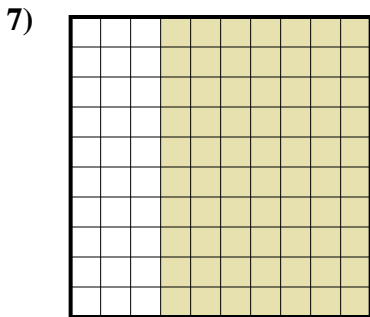
- A. 660
- B. 0,066
- C. 0,66
- D. 6,6



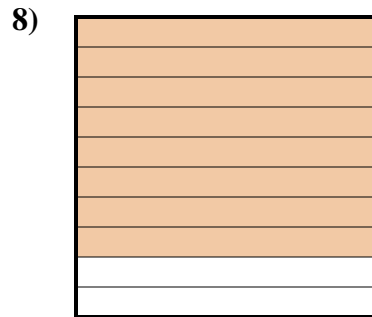
- A. 5,2
- B. 0,052
- C. 0,52
- D. 520



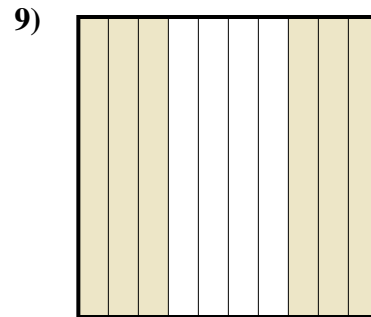
- A. 2
- B. 0,2
- C. 20
- D. 0,02



- A. 0,7
- B. 0,07
- C. 7
- D. 70



- A. 0,8
- B. 800
- C. 8
- D. 80

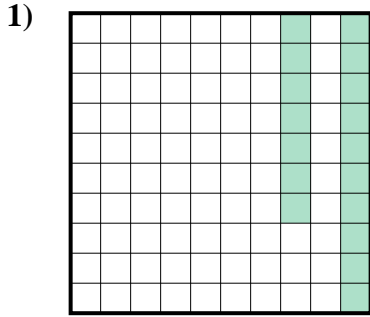


- A. 600
- B. 6
- C. 0,06
- D. 0,6

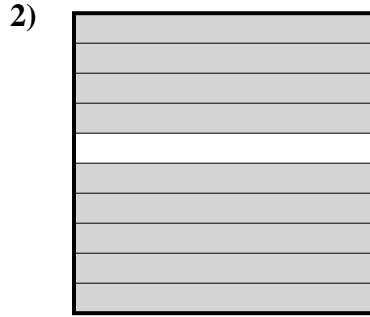
- 1. \_\_\_\_\_
- 2. \_\_\_\_\_
- 3. \_\_\_\_\_
- 4. \_\_\_\_\_
- 5. \_\_\_\_\_
- 6. \_\_\_\_\_
- 7. \_\_\_\_\_
- 8. \_\_\_\_\_
- 9. \_\_\_\_\_



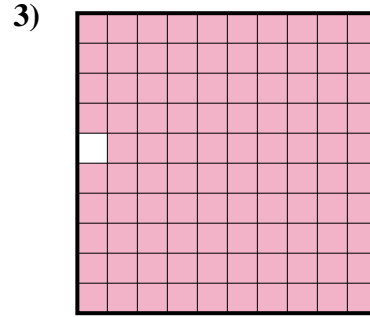
Stelle fest, welcher Buchstabe die schraffierte Fläche in Bezug auf das Ganze richtig darstellt.



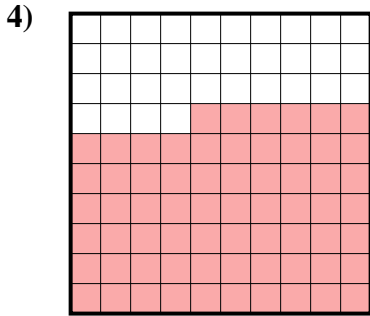
- A. 0,17  
B. 1,7  
C. 17  
D. 0,017



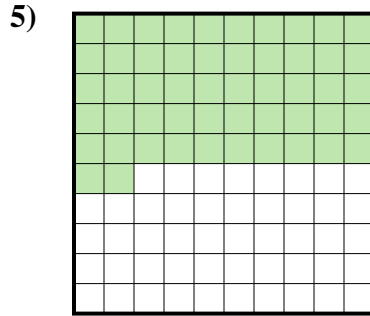
- A. 0,09  
B. 0,9  
C. 90  
D. 9



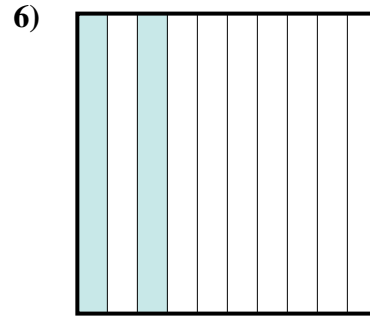
- A. 0,99  
B. 0,099  
C. 9,9  
D. 99



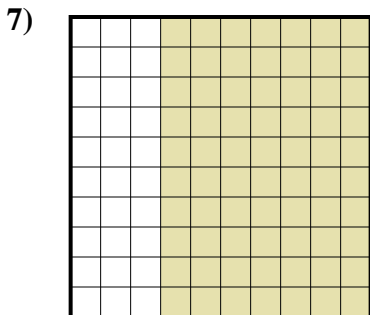
- A. 660  
B. 0,066  
C. 0,66  
D. 6,6



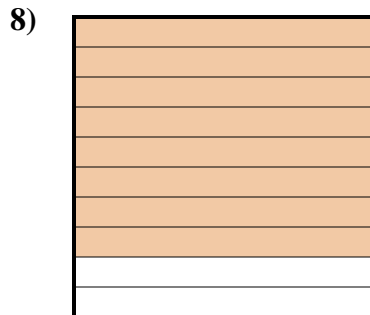
- A. 5,2  
B. 0,052  
C. 0,52  
D. 520



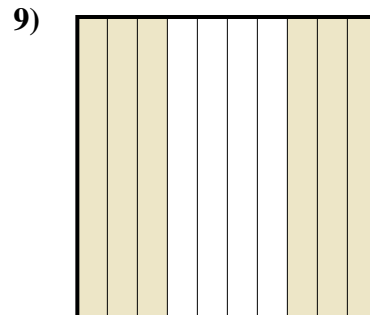
- A. 2  
B. 0,2  
C. 20  
D. 0,02



- A. 0,7  
B. 0,07  
C. 7  
D. 70



- A. 0,8  
B. 800  
C. 8  
D. 80



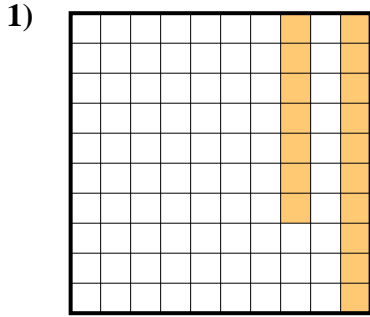
- A. 600  
B. 6  
C. 0,06  
D. 0,6

**Antworten**

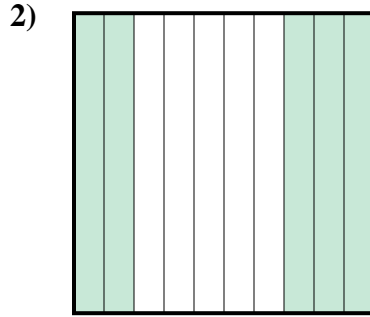
1.     **A**      
2.     **B**      
3.     **A**      
4.     **C**      
5.     **C**      
6.     **B**      
7.     **A**      
8.     **A**      
9.     **D**



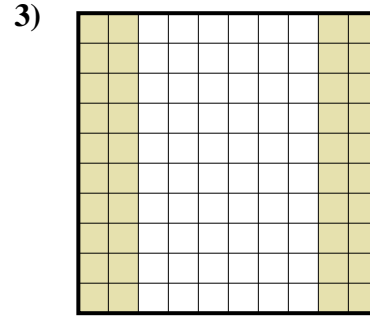
Stelle fest, welcher Buchstabe die schraffierte Fläche in Bezug auf das Ganze richtig darstellt.




- A. 1,7  
B. 0,17  
C. 0,017  
D. 170



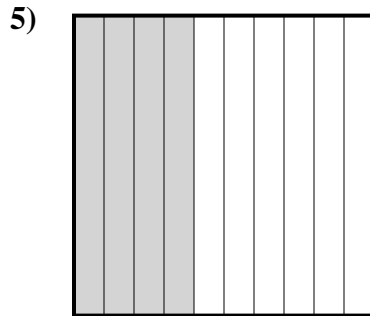
- A. 0,5  
B. 500  
C. 50  
D. 0,05



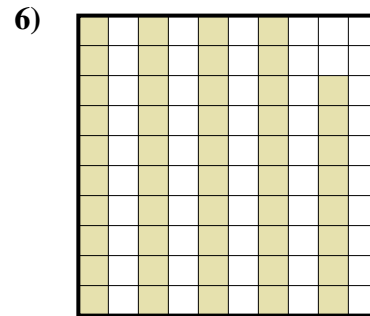
- A. 400  
B. 0,04  
C. 0,4  
D. 40



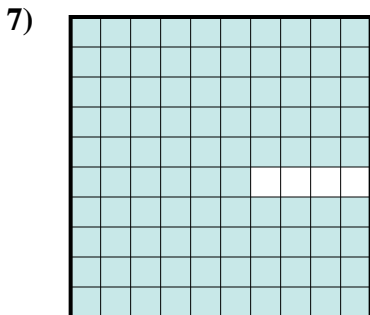
- A. 0,03  
B. 30  
C. 0,3  
D. 300



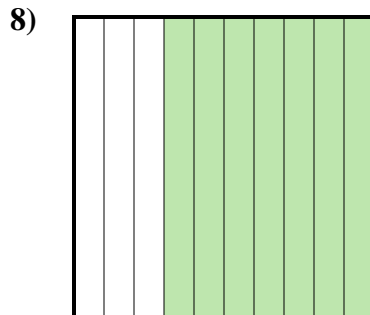
- A. 0,4  
B. 400  
C. 4  
D. 0,04



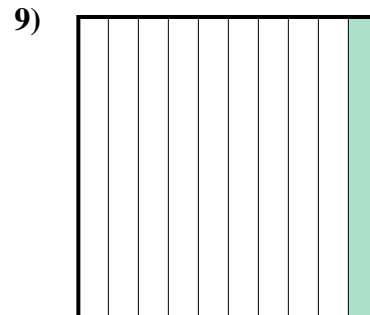
- A. 480  
B. 4,8  
C. 0,48  
D. 48



- A. 0,96  
B. 960  
C. 96  
D. 9,6



- A. 700  
B. 0,7  
C. 0,07  
D. 7



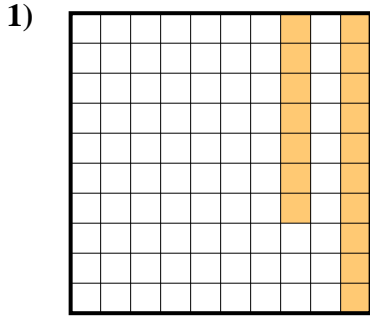
- A. 100  
B. 0,1  
C. 0,01  
D. 1

Antworten

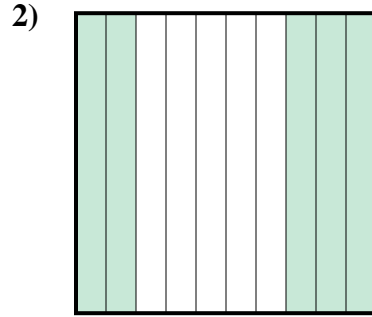
1. \_\_\_\_\_  
2. \_\_\_\_\_  
3. \_\_\_\_\_  
4. \_\_\_\_\_  
5. \_\_\_\_\_  
6. \_\_\_\_\_  
7. \_\_\_\_\_  
8. \_\_\_\_\_  
9. \_\_\_\_\_



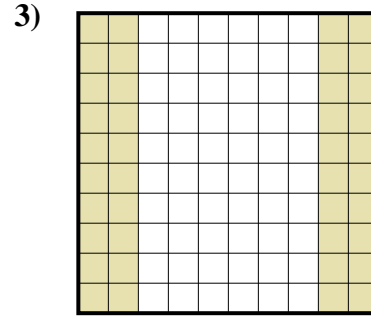
Stelle fest, welcher Buchstabe die schraffierte Fläche in Bezug auf das Ganze richtig darstellt.



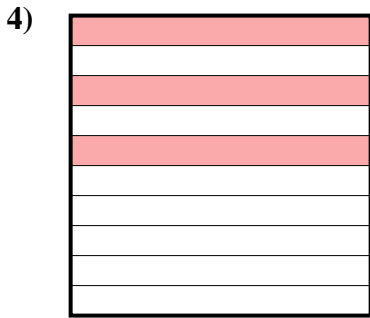
- A. 1,7  
B. 0,17  
C. 0,017  
D. 170



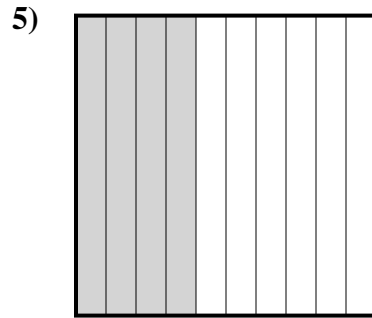
- A. 0,5  
B. 500  
C. 50  
D. 0,05



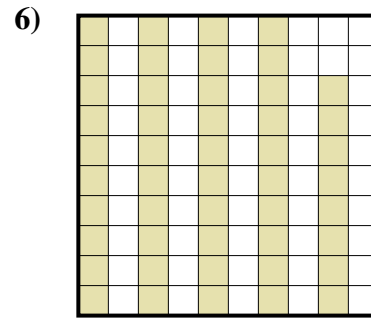
- A. 400  
B. 0,04  
C. 0,4  
D. 40



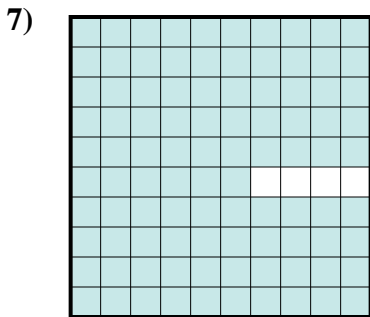
- A. 0,03  
B. 30  
C. 0,3  
D. 300



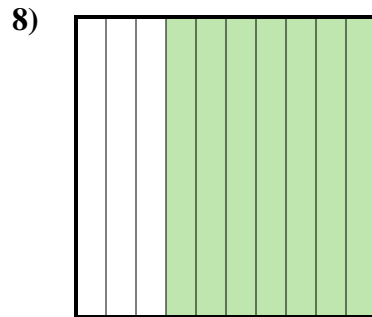
- A. 0,4  
B. 400  
C. 4  
D. 0,04



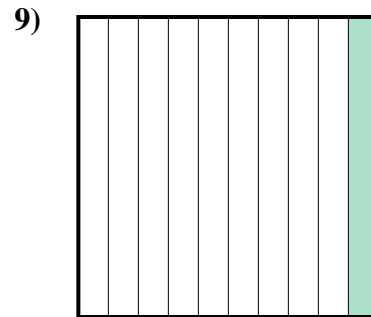
- A. 480  
B. 4,8  
C. 0,48  
D. 48



- A. 0,96  
B. 960  
C. 96  
D. 9,6



- A. 700  
B. 0,7  
C. 0,07  
D. 7



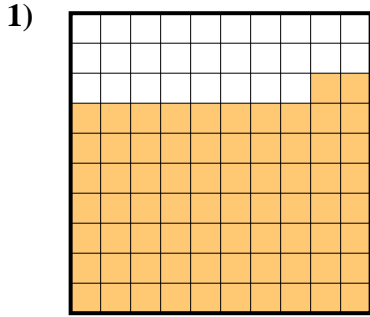
- A. 100  
B. 0,1  
C. 0,01  
D. 1

**Antworten**

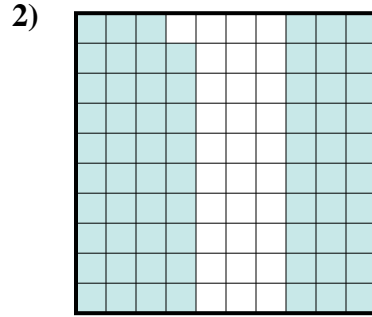
1.     **B**      
2.     **A**      
3.     **C**      
4.     **C**      
5.     **A**      
6.     **C**      
7.     **A**      
8.     **B**      
9.     **B**



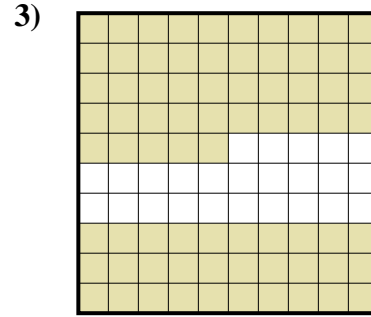
Stelle fest, welcher Buchstabe die schraffierte Fläche in Bezug auf das Ganze richtig darstellt.



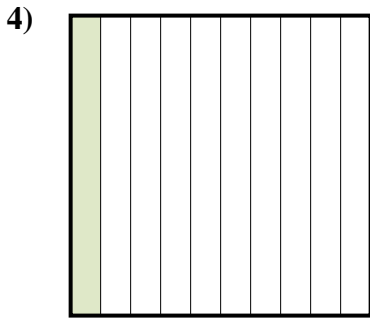
- A. 0,72
- B. 72
- C. 0,072
- D. 720




- A. 0,69
- B. 0,069
- C. 69
- D. 6,9




- A. 7,5
- B. 75
- C. 0,075
- D. 0,75



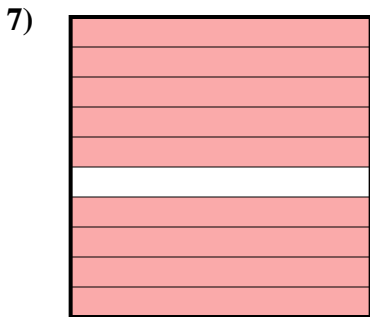
- A. 100
- B. 0,1
- C. 1
- D. 10



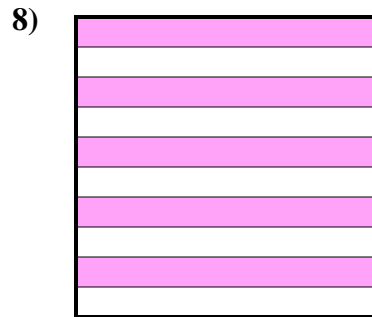
- A. 7
- B. 700
- C. 0,07
- D. 0,7



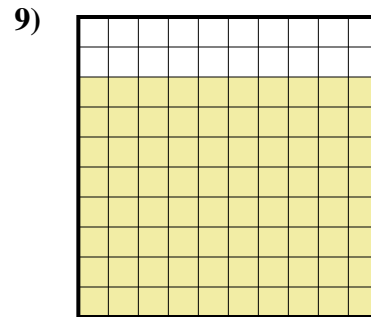
- A. 0,06
- B. 60
- C. 0,6
- D. 600



- A. 9
- B. 90
- C. 900
- D. 0,9



- A. 5
- B. 50
- C. 0,5
- D. 500



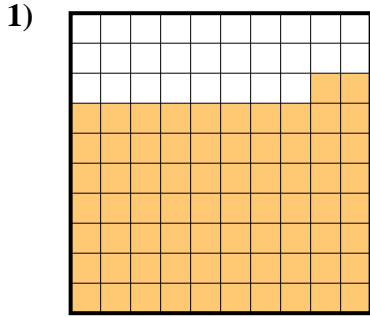
- A. 8
- B. 80
- C. 800
- D. 0,8

Antworten

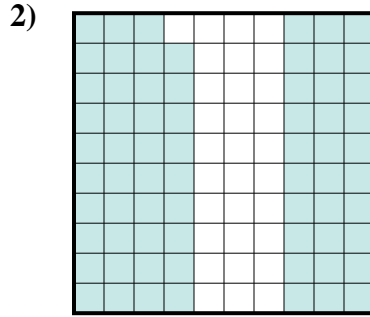
1. \_\_\_\_\_
2. \_\_\_\_\_
3. \_\_\_\_\_
4. \_\_\_\_\_
5. \_\_\_\_\_
6. \_\_\_\_\_
7. \_\_\_\_\_
8. \_\_\_\_\_
9. \_\_\_\_\_



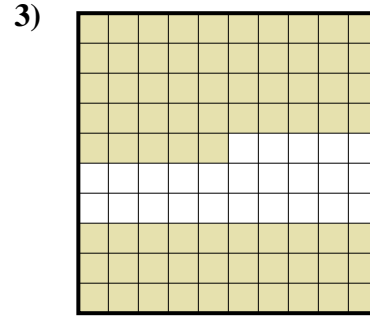
Stelle fest, welcher Buchstabe die schraffierte Fläche in Bezug auf das Ganze richtig darstellt.



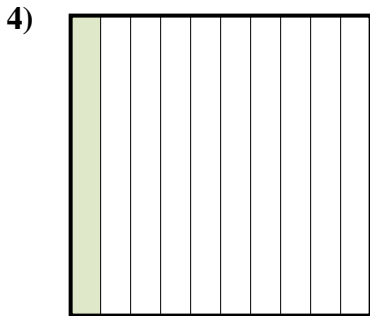
- A. 0,72  
B. 72  
C. 0,072  
D. 720




- A. 0,69  
B. 0,069  
C. 69  
D. 6,9




- A. 7,5  
B. 75  
C. 0,075  
D. 0,75




- A. 100  
B. 0,1  
C. 1  
D. 10



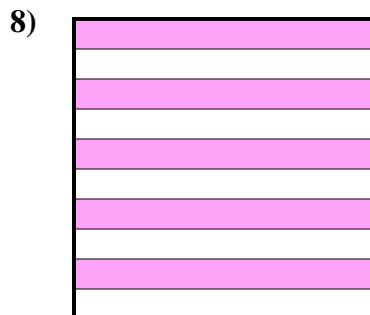
- A. 7  
B. 700  
C. 0,07  
D. 0,7



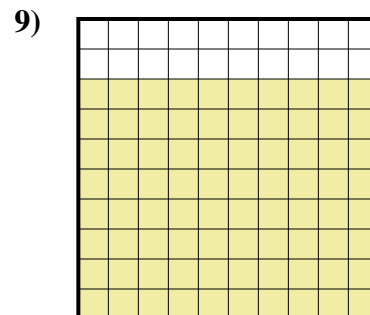
- A. 0,06  
B. 60  
C. 0,6  
D. 600



- A. 9  
B. 90  
C. 900  
D. 0,9



- A. 5  
B. 50  
C. 0,5  
D. 500



- A. 8  
B. 80  
C. 800  
D. 0,8

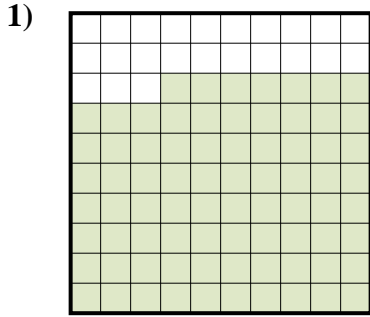
**Antworten**

1.     **A**      
2.     **A**      
3.     **D**      
4.     **B**      
5.     **D**      
6.     **C**      
7.     **D**      
8.     **C**      
9.     **D**

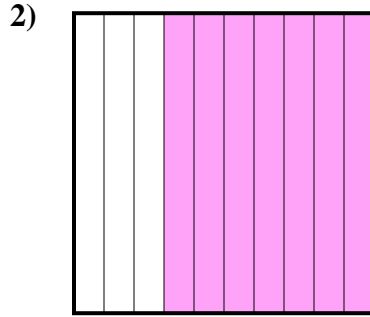




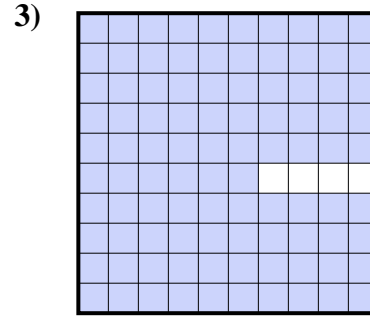
Stelle fest, welcher Buchstabe die schraffierte Fläche in Bezug auf das Ganze richtig darstellt.




- A. 0,077  
B. 77  
C. 7,7  
D. 0,77



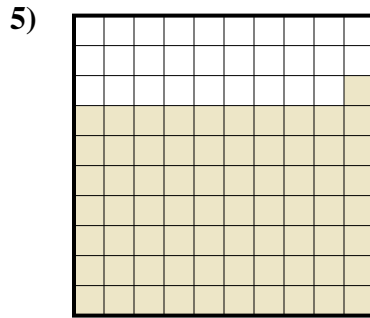
- A. 0,07  
B. 700  
C. 7  
D. 0,7



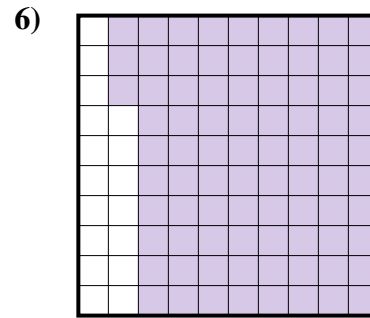
- A. 0,096  
B. 96  
C. 0,96  
D. 960




- A. 4  
B. 0,4  
C. 40  
D. 0,04



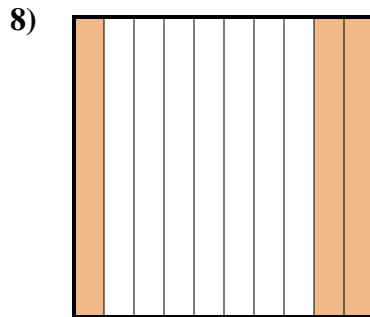
- A. 7,1  
B. 0,71  
C. 71  
D. 710



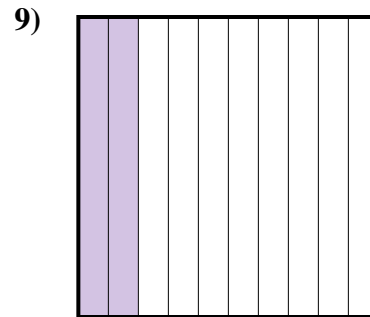
- A. 830  
B. 0,83  
C. 0,083  
D. 8,3



- A. 1  
B. 0,01  
C. 0,1  
D. 10



- A. 30  
B. 3  
C. 0,3  
D. 0,03



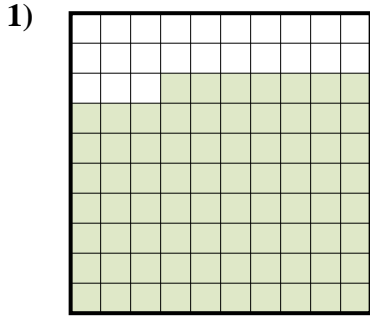
- A. 20  
B. 200  
C. 0,2  
D. 0,02

Antworten

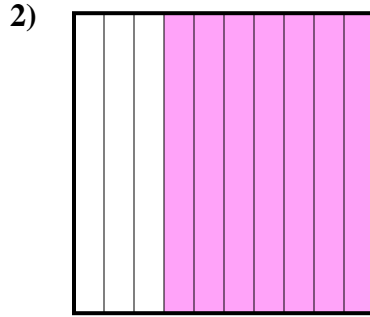
1. \_\_\_\_\_  
2. \_\_\_\_\_  
3. \_\_\_\_\_  
4. \_\_\_\_\_  
5. \_\_\_\_\_  
6. \_\_\_\_\_  
7. \_\_\_\_\_  
8. \_\_\_\_\_  
9. \_\_\_\_\_



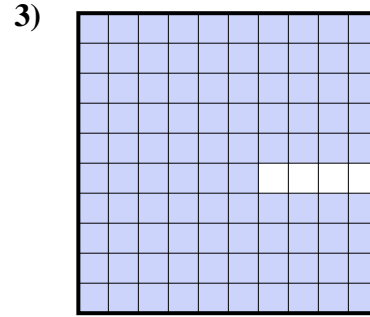
Stelle fest, welcher Buchstabe die schraffierte Fläche in Bezug auf das Ganze richtig darstellt.




- A. 0,077  
B. 77  
C. 7,7  
D. 0,77



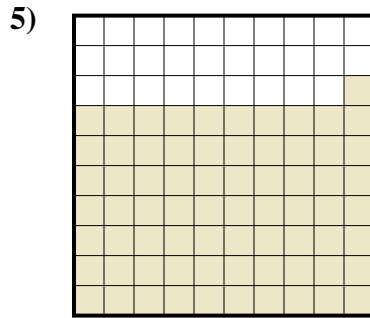
- A. 0,07  
B. 700  
C. 7  
D. 0,7



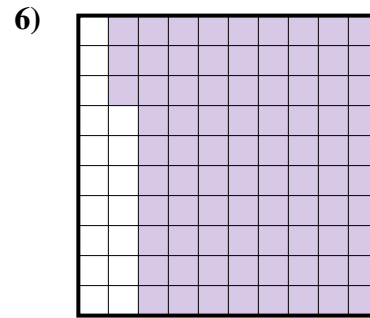
- A. 0,096  
B. 96  
C. 0,96  
D. 960




- A. 4  
B. 0,4  
C. 40  
D. 0,04



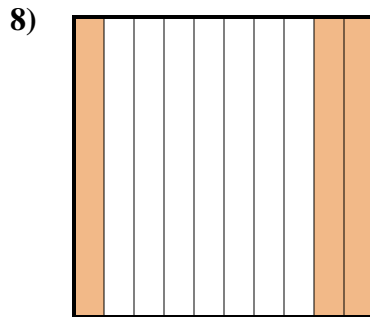
- A. 7,1  
B. 0,71  
C. 71  
D. 710



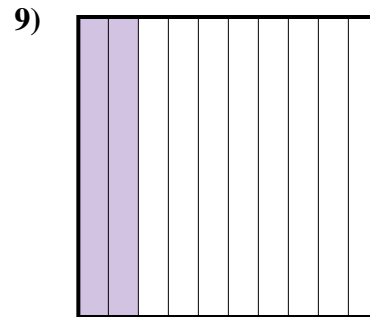
- A. 830  
B. 0,83  
C. 0,083  
D. 8,3



- A. 1  
B. 0,01  
C. 0,1  
D. 10



- A. 30  
B. 3  
C. 0,3  
D. 0,03



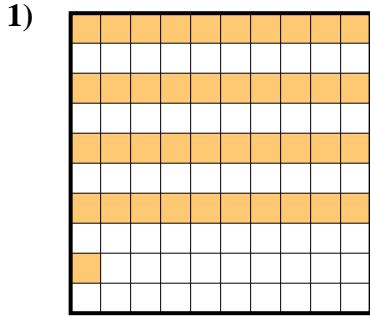
- A. 20  
B. 200  
C. 0,2  
D. 0,02

Antworten

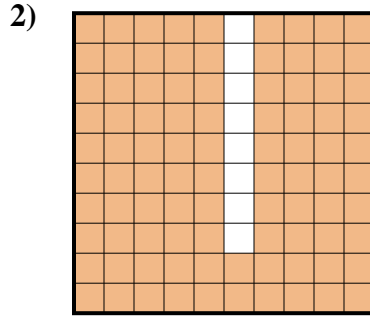
1.     **D**      
2.     **D**      
3.     **C**      
4.     **B**      
5.     **B**      
6.     **B**      
7.     **C**      
8.     **C**      
9.     **C**




Stelle fest, welcher Buchstabe die schraffierte Fläche in Bezug auf das Ganze richtig darstellt.



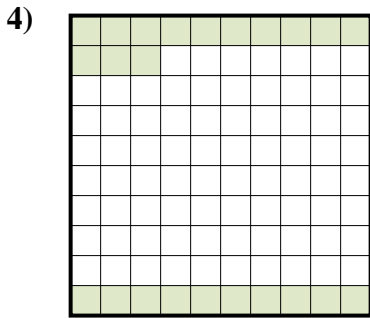
- A. 410  
B. 4,1  
C. 0,41  
D. 41



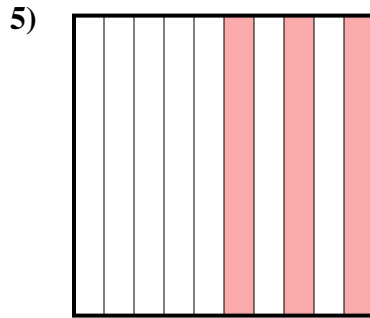
- A. 92  
B. 920  
C. 0,92  
D. 9,2



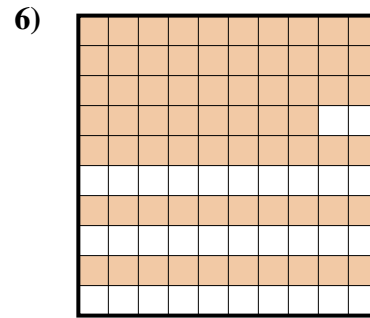
- A. 0,8  
B. 0,08  
C. 800  
D. 80



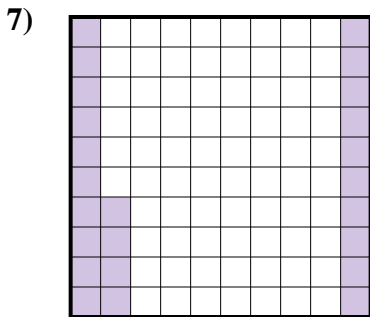
- A. 230  
B. 0,23  
C. 0,023  
D. 2,3



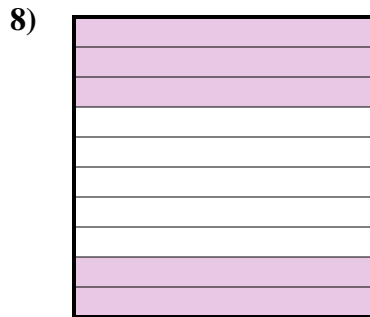
- A. 0,3  
B. 0,03  
C. 30  
D. 3



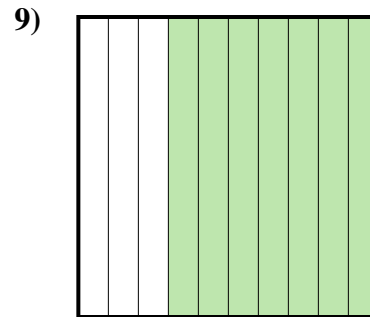
- A. 680  
B. 0,068  
C. 0,68  
D. 6,8



- A. 240  
B. 0,24  
C. 0,024  
D. 2,4



- A. 5  
B. 500  
C. 0,5  
D. 50



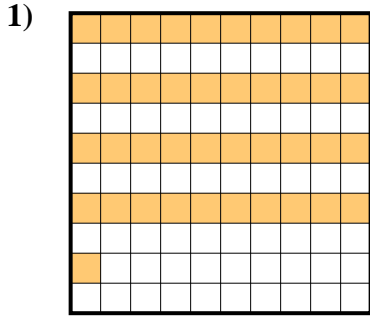
- A. 0,7  
B. 70  
C. 700  
D. 0,07

Antworten

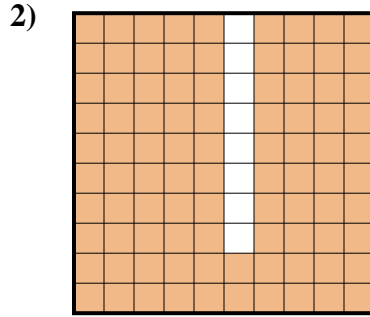
1. \_\_\_\_\_
2. \_\_\_\_\_
3. \_\_\_\_\_
4. \_\_\_\_\_
5. \_\_\_\_\_
6. \_\_\_\_\_
7. \_\_\_\_\_
8. \_\_\_\_\_
9. \_\_\_\_\_



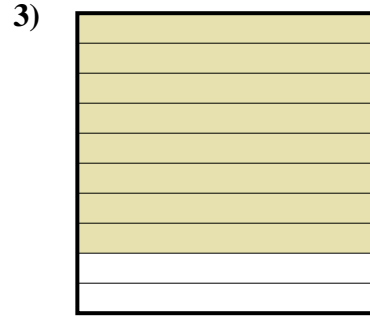
Stelle fest, welcher Buchstabe die schraffierte Fläche in Bezug auf das Ganze richtig darstellt.



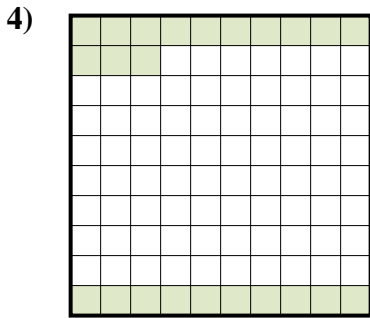
- A. 410  
B. 4,1  
C. 0,41  
D. 41



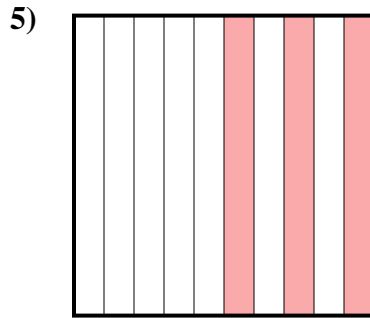
- A. 92  
B. 920  
C. 0,92  
D. 9,2



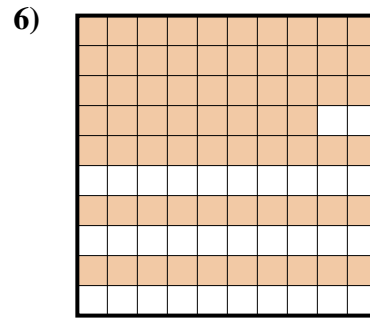
- A. 0,8  
B. 0,08  
C. 800  
D. 80



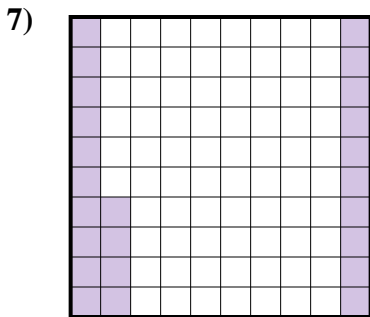
- A. 230  
B. 0,23  
C. 0,023  
D. 2,3



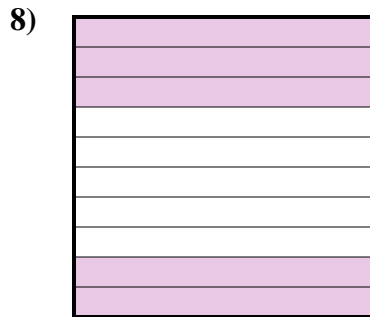
- A. 0,3  
B. 0,03  
C. 30  
D. 3



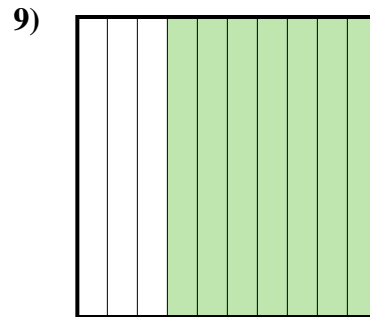
- A. 680  
B. 0,068  
C. 0,68  
D. 6,8



- A. 240  
B. 0,24  
C. 0,024  
D. 2,4



- A. 5  
B. 500  
C. 0,5  
D. 50



- A. 0,7  
B. 70  
C. 700  
D. 0,07

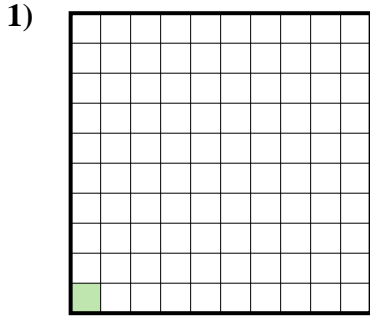
**Antworten**

1.       **C**        
2.       **C**        
3.       **A**        
4.       **B**        
5.       **A**        
6.       **C**        
7.       **B**        
8.       **C**        
9.       **A**

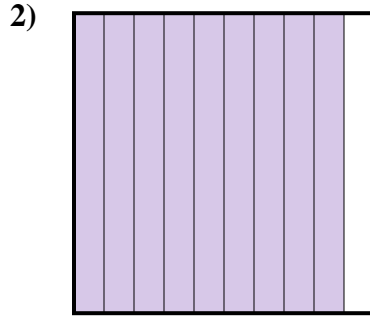


Stelle fest, welcher Buchstabe die schraffierte Fläche in Bezug auf das Ganze richtig darstellt.

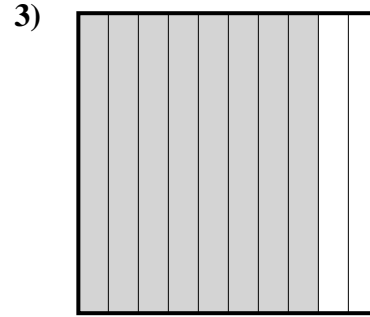
Antworten



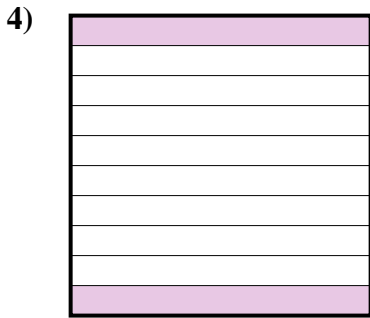
- A. 1
- B. 10
- C. 0,001
- D. 0,01



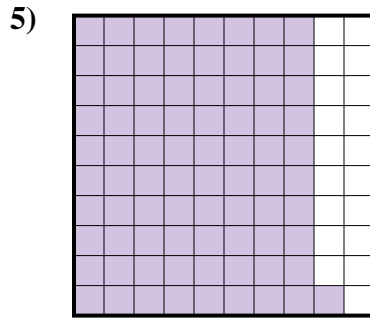
- A. 0,09
- B. 9
- C. 0,9
- D. 900



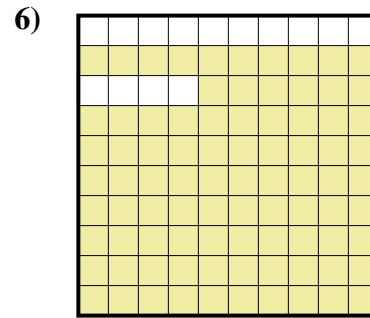
- A. 80
- B. 0,8
- C. 0,08
- D. 8



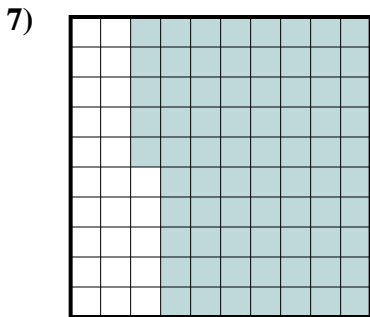
- A. 0,2
- B. 2
- C. 0,02
- D. 200




- A. 8,1
- B. 81
- C. 0,81
- D. 0,081



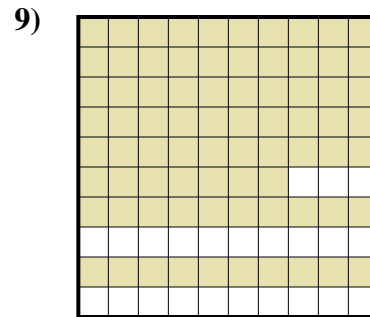
- A. 0,86
- B. 86
- C. 860
- D. 8,6



- A. 75
- B. 0,075
- C. 7,5
- D. 0,75



- A. 5
- B. 50
- C. 0,5
- D. 0,05

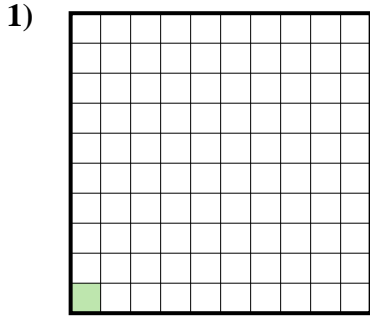


- A. 770
- B. 77
- C. 0,77
- D. 0,077

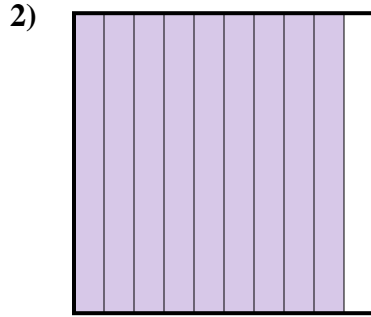
- 1. \_\_\_\_\_
- 2. \_\_\_\_\_
- 3. \_\_\_\_\_
- 4. \_\_\_\_\_
- 5. \_\_\_\_\_
- 6. \_\_\_\_\_
- 7. \_\_\_\_\_
- 8. \_\_\_\_\_
- 9. \_\_\_\_\_



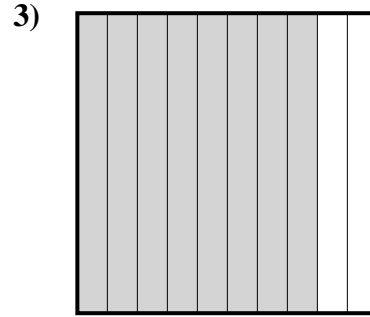
Stelle fest, welcher Buchstabe die schraffierte Fläche in Bezug auf das Ganze richtig darstellt.



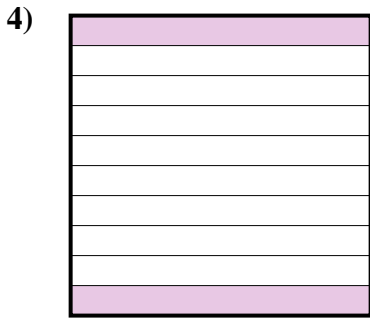
- A. 1
- B. 10
- C. 0,001
- D. 0,01



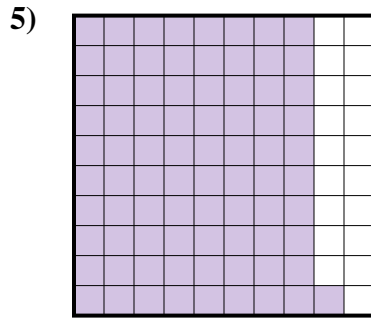
- A. 0,09
- B. 9
- C. 0,9
- D. 900



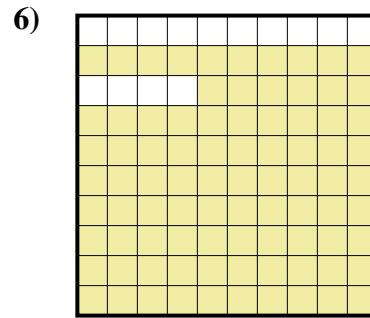
- A. 80
- B. 0,8
- C. 0,08
- D. 8



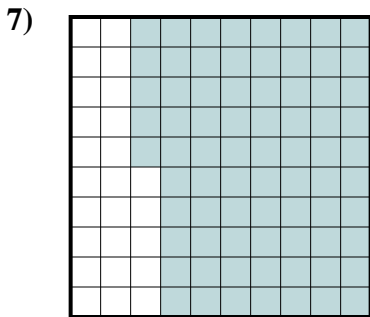
- A. 0,2
- B. 2
- C. 0,02
- D. 200



- A. 8,1
- B. 81
- C. 0,81
- D. 0,081



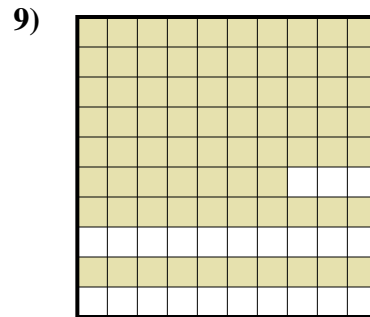
- A. 0,86
- B. 86
- C. 860
- D. 8,6



- A. 75
- B. 0,075
- C. 7,5
- D. 0,75



- A. 5
- B. 50
- C. 0,5
- D. 0,05



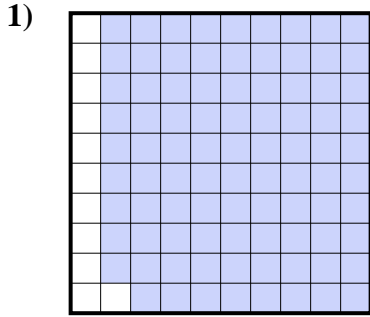
- A. 770
- B. 77
- C. 0,77
- D. 0,077

Antworten


- 1.     **D**
- 2.     **C**
- 3.     **B**
- 4.     **A**
- 5.     **C**
- 6.     **A**
- 7.     **D**
- 8.     **C**
- 9.     **C**



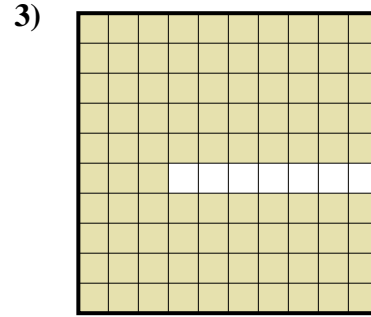
Stelle fest, welcher Buchstabe die schraffierte Fläche in Bezug auf das Ganze richtig darstellt.



- A. 0,89  
B. 0,089  
C. 8,9  
D. 890



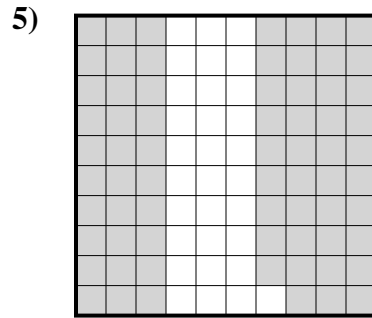
- A. 100  
B. 1  
C. 0,01  
D. 0,1



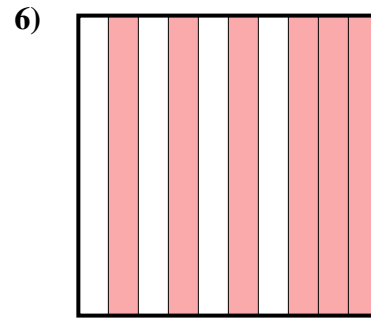
- A. 93  
B. 9,3  
C. 0,93  
D. 0,093



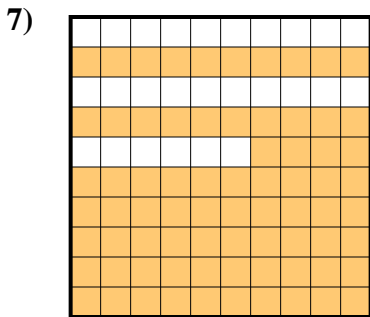
- A. 0,5  
B. 500  
C. 5  
D. 50



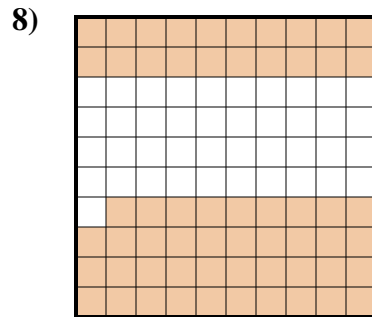
- A. 0,069  
B. 0,69  
C. 69  
D. 6,9



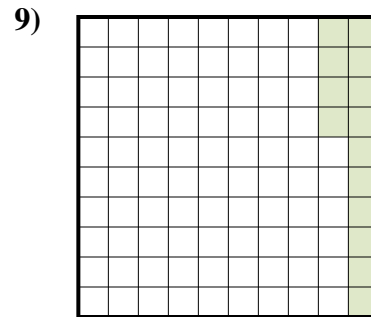
- A. 6  
B. 0,6  
C. 600  
D. 60



- A. 740  
B. 0,074  
C. 7,4  
D. 0,74



- A. 0,59  
B. 59  
C. 0,059  
D. 590



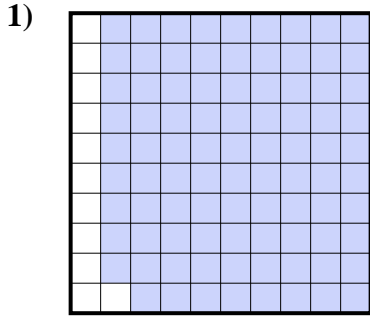
- A. 140  
B. 0,14  
C. 14  
D. 1,4

Antworten


1. \_\_\_\_\_  
2. \_\_\_\_\_  
3. \_\_\_\_\_  
4. \_\_\_\_\_  
5. \_\_\_\_\_  
6. \_\_\_\_\_  
7. \_\_\_\_\_  
8. \_\_\_\_\_  
9. \_\_\_\_\_



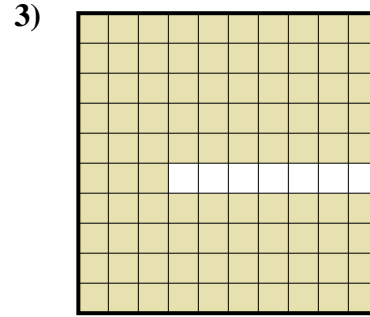
Stelle fest, welcher Buchstabe die schraffierte Fläche in Bezug auf das Ganze richtig darstellt.



- A. 0,89  
B. 0,089  
C. 8,9  
D. 890



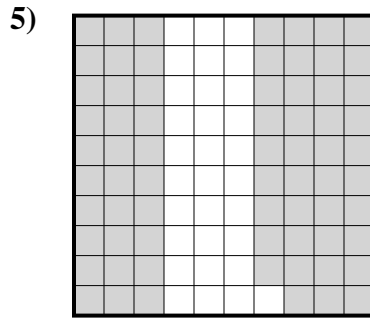
- A. 100  
B. 1  
C. 0,01  
D. 0,1



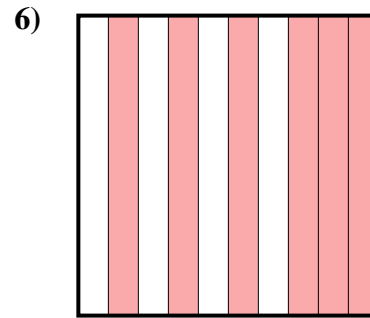
- A. 93  
B. 9,3  
C. 0,93  
D. 0,093



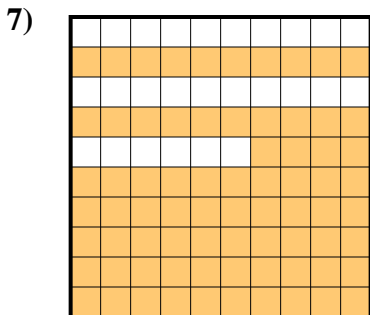
- A. 0,5  
B. 500  
C. 5  
D. 50



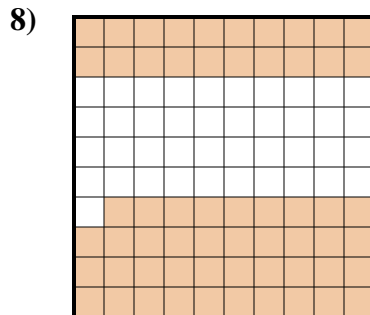
- A. 0,069  
B. 0,69  
C. 69  
D. 6,9



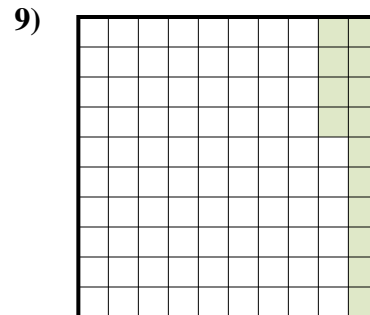
- A. 6  
B. 0,6  
C. 600  
D. 60



- A. 740  
B. 0,074  
C. 7,4  
D. 0,74



- A. 0,59  
B. 59  
C. 0,059  
D. 590



- A. 140  
B. 0,14  
C. 14  
D. 1,4

**Antworten**

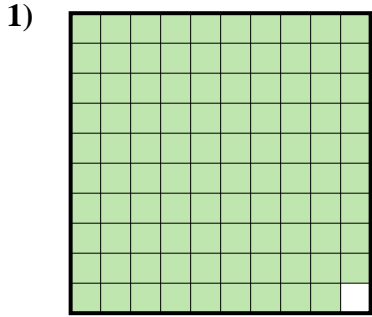
1.     **A**      
2.     **D**      
3.     **C**      
4.     **A**      
5.     **B**      
6.     **B**      
7.     **D**      
8.     **A**      
9.     **B**



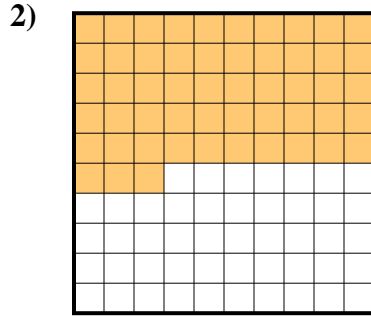


Stelle fest, welcher Buchstabe die schraffierte Fläche in Bezug auf das Ganze richtig darstellt.

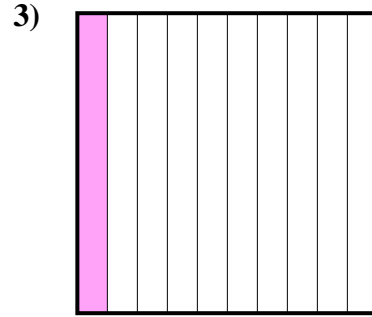
Antworten



- A. 9,9
- B. 99
- C. 0,99
- D. 990

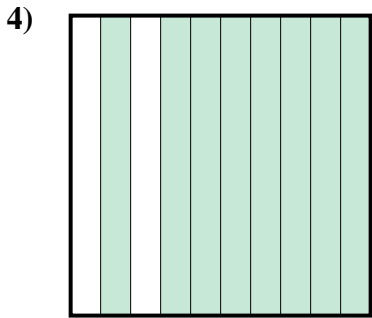


- A. 0,53
- B. 530
- C. 0,053
- D. 5,3

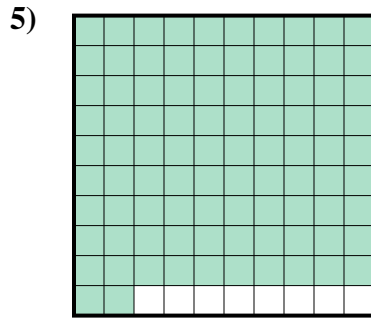


- A. 1
- B. 0,01
- C. 0,1
- D. 100

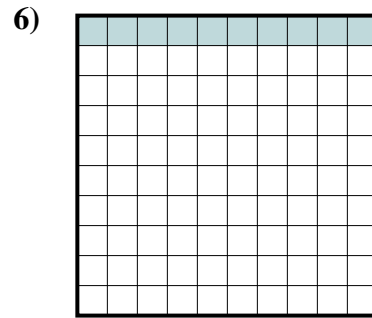
- 1. \_\_\_\_\_
- 2. \_\_\_\_\_
- 3. \_\_\_\_\_
- 4. \_\_\_\_\_
- 5. \_\_\_\_\_
- 6. \_\_\_\_\_
- 7. \_\_\_\_\_
- 8. \_\_\_\_\_
- 9. \_\_\_\_\_



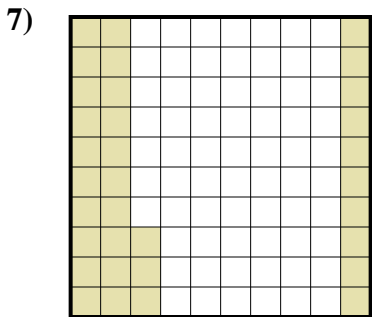
- A. 0,8
- B. 80
- C. 0,08
- D. 800



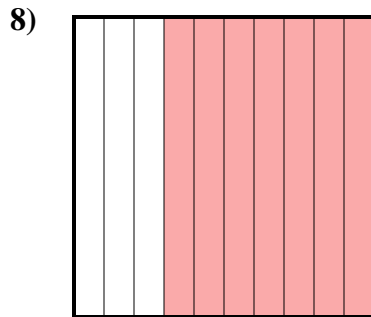
- A. 0,092
- B. 9,2
- C. 0,92
- D. 920



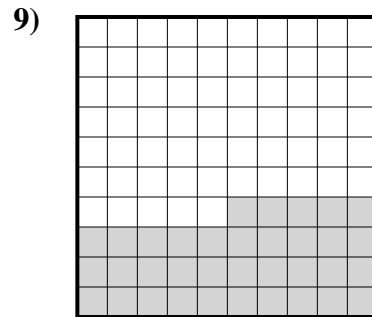
- A. 1
- B. 0,1
- C. 100
- D. 0,01



- A. 0,033
- B. 33
- C. 0,33
- D. 3,3



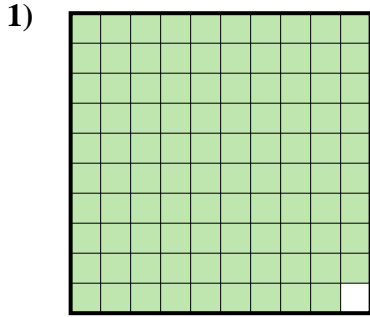
- A. 7
- B. 70
- C. 700
- D. 0,7



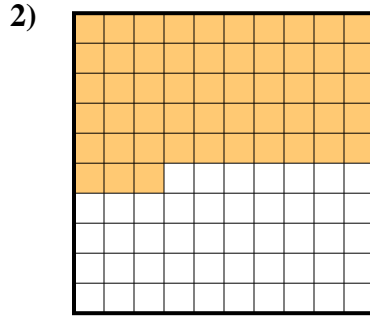
- A. 3,5
- B. 0,35
- C. 0,035
- D. 35



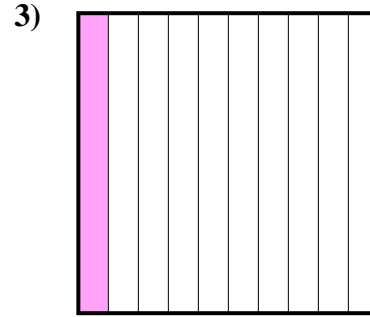
Stelle fest, welcher Buchstabe die schraffierte Fläche in Bezug auf das Ganze richtig darstellt.



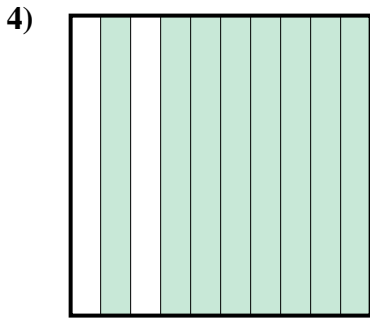
- A. 9,9  
B. 99  
C. 0,99  
D. 990



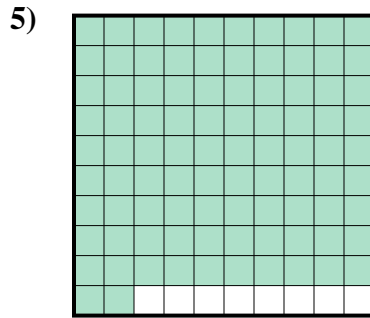
- A. 0,53  
B. 530  
C. 0,053  
D. 5,3



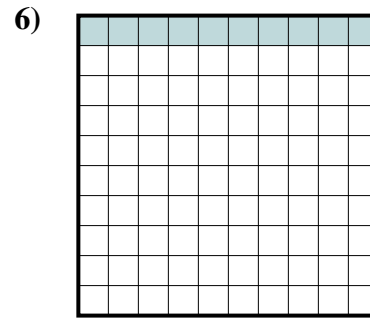
- A. 1  
B. 0,01  
C. 0,1  
D. 100



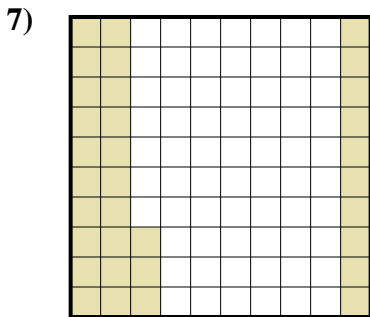
- A. 0,8  
B. 80  
C. 0,08  
D. 800



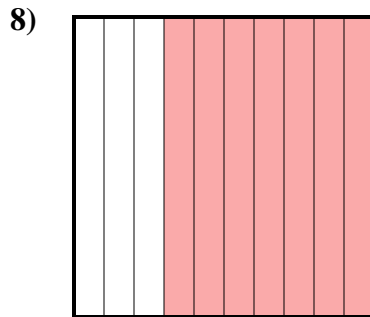
- A. 0,092  
B. 9,2  
C. 0,92  
D. 920



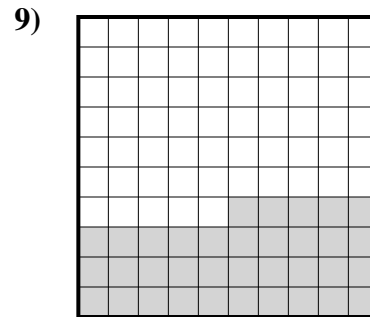
- A. 1  
B. 0,1  
C. 100  
D. 0,01



- A. 0,033  
B. 33  
C. 0,33  
D. 3,3



- A. 7  
B. 70  
C. 700  
D. 0,7




- A. 3,5  
B. 0,35  
C. 0,035  
D. 35

**Antworten**

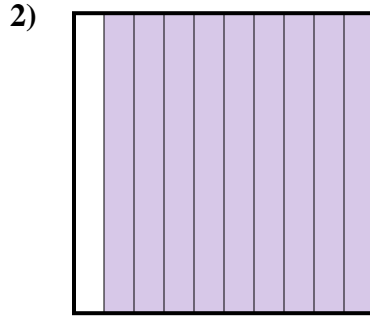
1.     **C**      
2.     **A**      
3.     **C**      
4.     **A**      
5.     **C**      
6.     **B**      
7.     **C**      
8.     **D**      
9.     **B**




Stelle fest, welcher Buchstabe die schraffierte Fläche in Bezug auf das Ganze richtig darstellt.



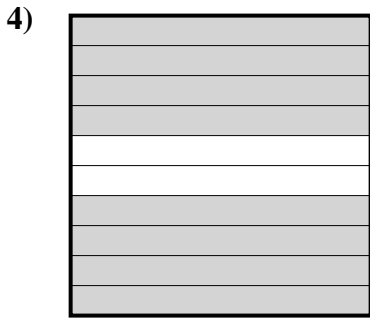
- A. 0,5  
B. 5  
C. 500  
D. 50



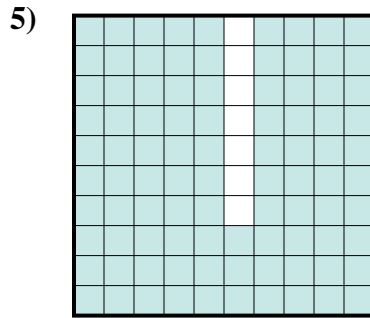
- A. 0,09  
B. 9  
C. 90  
D. 0,9



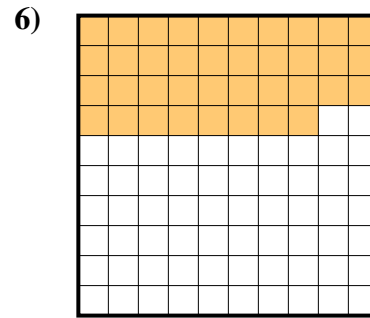
- A. 700  
B. 0,07  
C. 0,7  
D. 70



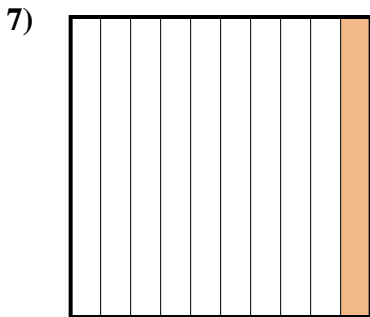
- A. 800  
B. 0,08  
C. 80  
D. 0,8



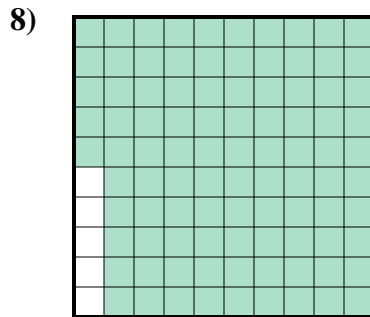
- A. 930  
B. 0,093  
C. 93  
D. 0,93



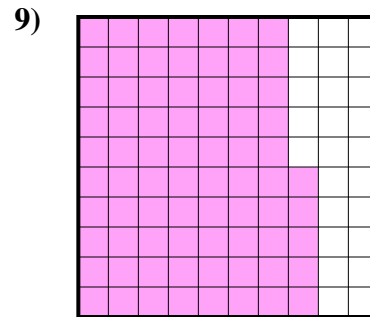
- A. 3,8  
B. 380  
C. 0,38  
D. 0,038



- A. 10  
B. 1  
C. 0,1  
D. 100



- A. 0,095  
B. 0,95  
C. 950  
D. 95




- A. 7,5  
B. 75  
C. 0,075  
D. 0,75

Antworten

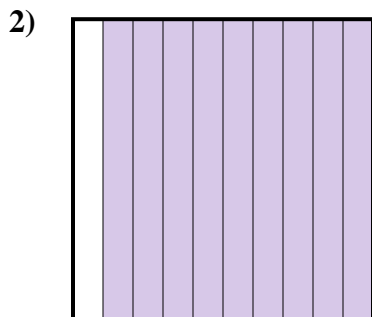
1. \_\_\_\_\_  
2. \_\_\_\_\_  
3. \_\_\_\_\_  
4. \_\_\_\_\_  
5. \_\_\_\_\_  
6. \_\_\_\_\_  
7. \_\_\_\_\_  
8. \_\_\_\_\_  
9. \_\_\_\_\_




Stelle fest, welcher Buchstabe die schraffierte Fläche in Bezug auf das Ganze richtig darstellt.




- A. 0,5  
B. 5  
C. 500  
D. 50



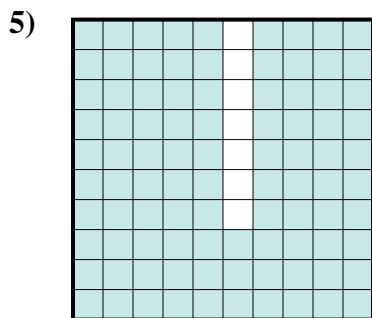
- A. 0,09  
B. 9  
C. 90  
D. 0,9



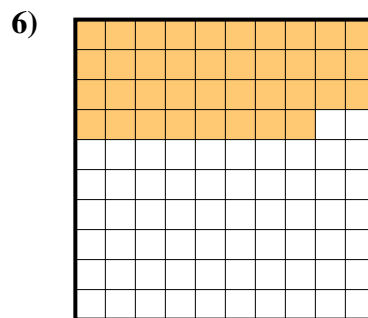
- A. 700  
B. 0,07  
C. 0,7  
D. 70



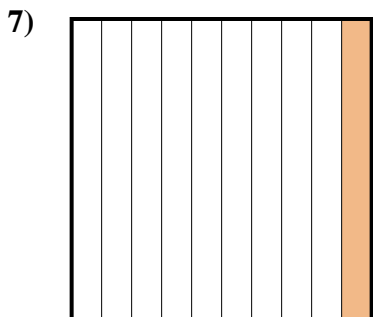
- A. 800  
B. 0,08  
C. 80  
D. 0,8



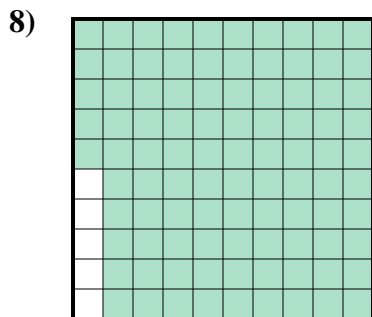
- A. 930  
B. 0,093  
C. 93  
D. 0,93



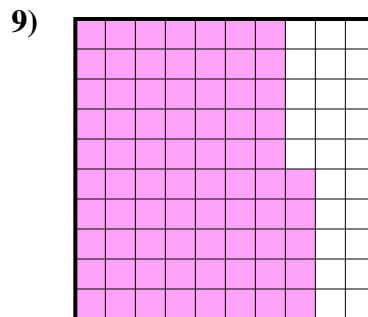
- A. 3,8  
B. 380  
C. 0,38  
D. 0,038



- A. 10  
B. 1  
C. 0,1  
D. 100



- A. 0,095  
B. 0,95  
C. 950  
D. 95



- A. 7,5  
B. 75  
C. 0,075  
D. 0,75

**Antworten**

1.     **A**      
2.     **D**      
3.     **C**      
4.     **D**      
5.     **D**      
6.     **C**      
7.     **C**      
8.     **B**      
9.     **D**