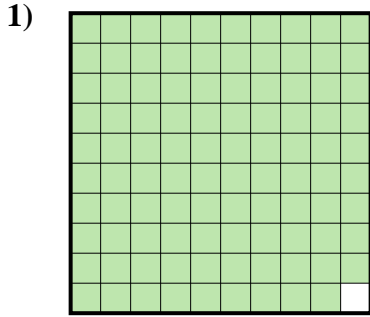
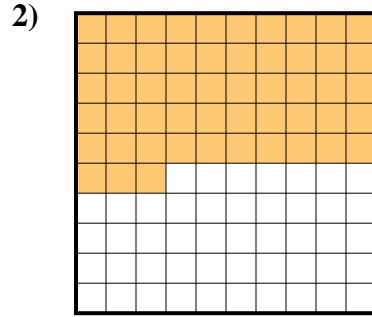




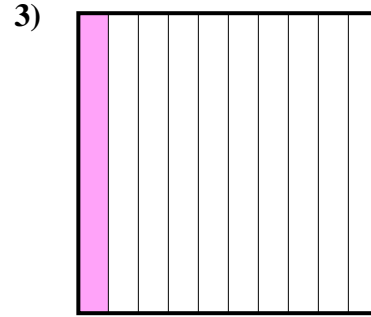
Stelle fest, welcher Buchstabe die schraffierte Fläche in Bezug auf das Ganze richtig darstellt.



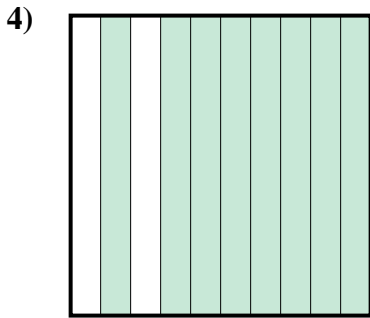
- A. 9,9
B. 99
C. 0,99
D. 990



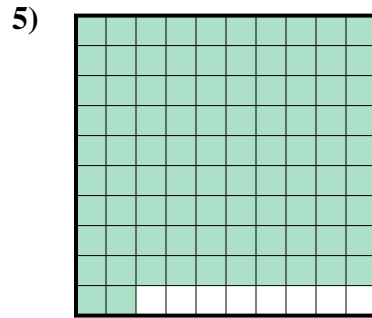
- A. 0,53
B. 530
C. 0,053
D. 5,3



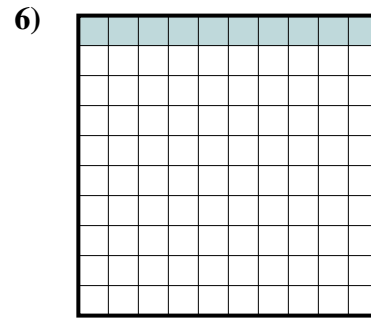
- A. 1
B. 0,01
C. 0,1
D. 100



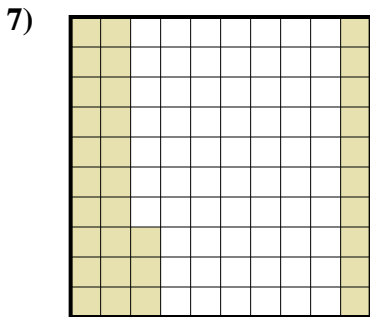
- A. 0,8
B. 80
C. 0,08
D. 800



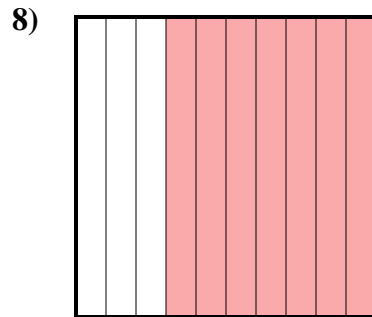
- A. 0,092
B. 9,2
C. 0,92
D. 920



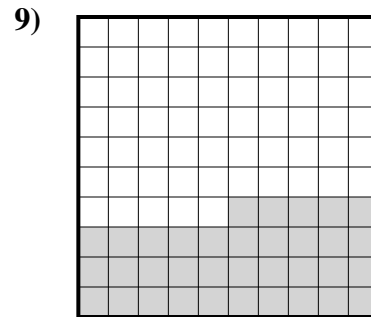
- A. 1
B. 0,1
C. 100
D. 0,01



- A. 0,033
B. 33
C. 0,33
D. 3,3



- A. 7
B. 70
C. 700
D. 0,7



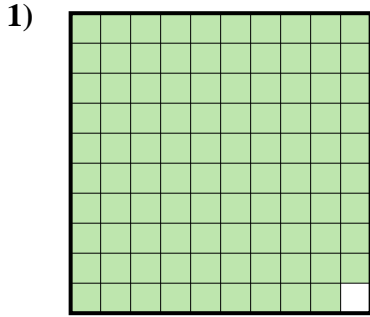
- A. 3,5
B. 0,35
C. 0,035
D. 35

Antworten

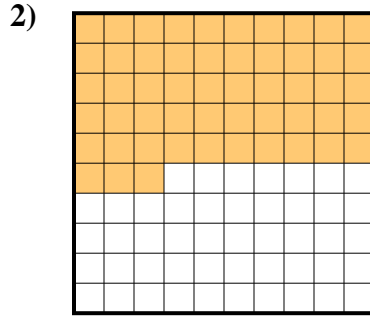
1. _____
2. _____
3. _____
4. _____
5. _____
6. _____
7. _____
8. _____
9. _____



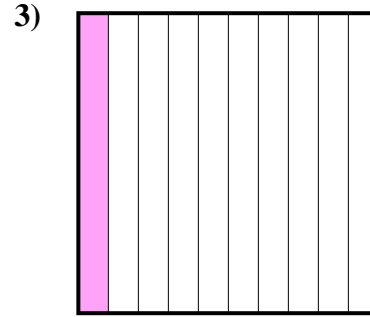
Stelle fest, welcher Buchstabe die schraffierte Fläche in Bezug auf das Ganze richtig darstellt.



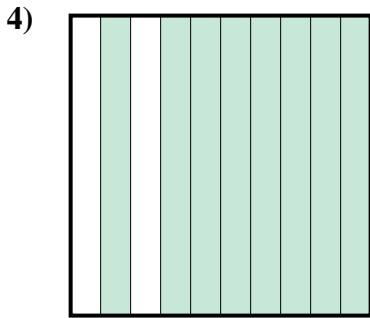
- A. 9,9
B. 99
C. 0,99
D. 990



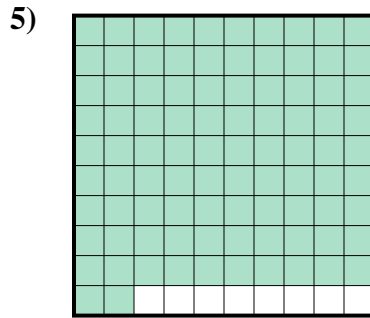
- A. 0,53
B. 530
C. 0,053
D. 5,3



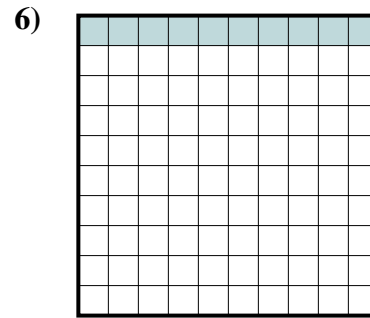
- A. 1
B. 0,01
C. 0,1
D. 100



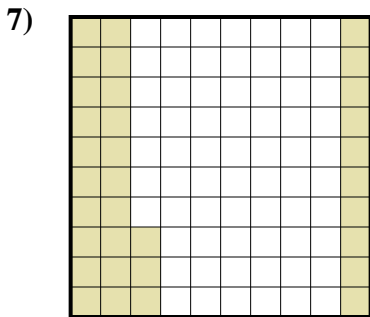
- A. 0,8
B. 80
C. 0,08
D. 800



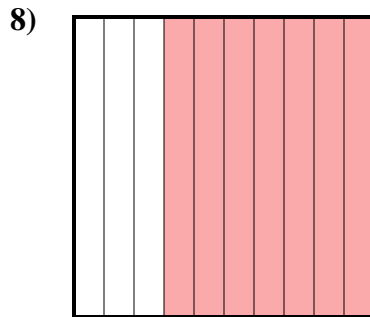
- A. 0,092
B. 9,2
C. 0,92
D. 920



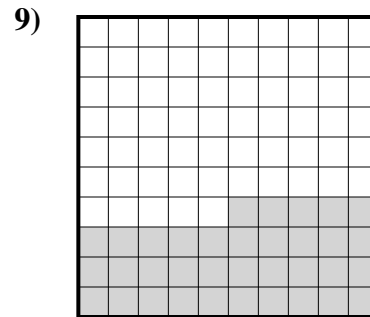
- A. 1
B. 0,1
C. 100
D. 0,01



- A. 0,033
B. 33
C. 0,33
D. 3,3



- A. 7
B. 70
C. 700
D. 0,7



- A. 3,5
B. 0,35
C. 0,035
D. 35

Antworten

1. **C**
2. **A**
3. **C**
4. **A**
5. **C**
6. **B**
7. **C**
8. **D**
9. **B**