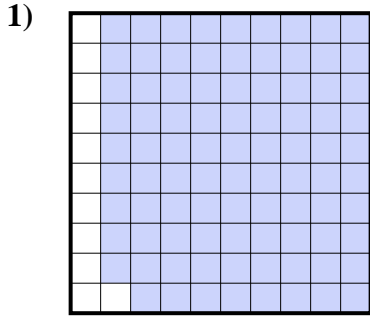





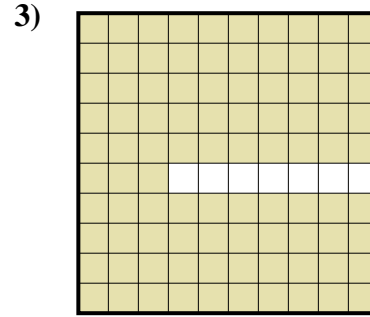
Stelle fest, welcher Buchstabe die schraffierte Fläche in Bezug auf das Ganze richtig darstellt.



- A. 0,89
B. 0,089
C. 8,9
D. 890



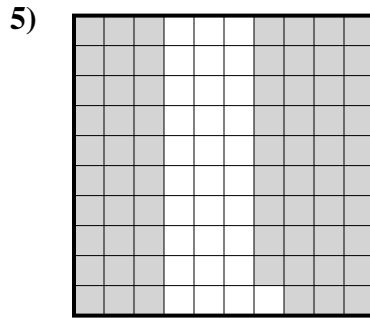
- A. 100
B. 1
C. 0,01
D. 0,1



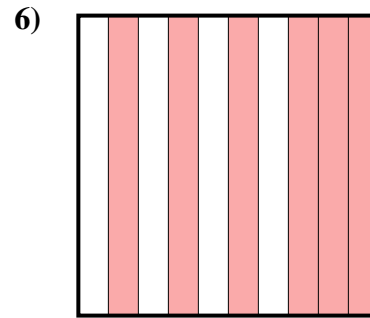
- A. 93
B. 9,3
C. 0,93
D. 0,093



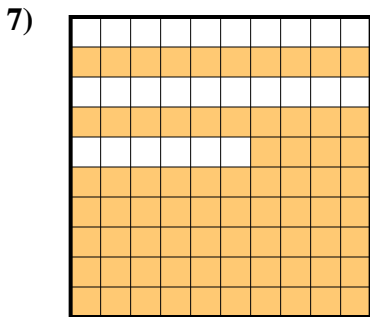
- A. 0,5
B. 500
C. 5
D. 50



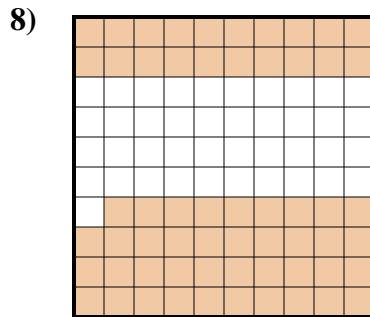
- A. 0,069
B. 0,69
C. 69
D. 6,9



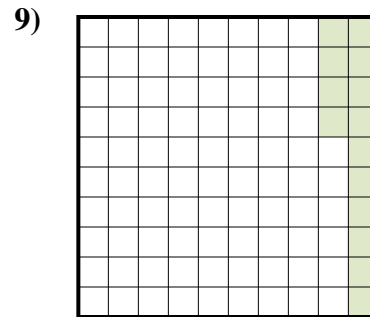
- A. 6
B. 0,6
C. 600
D. 60



- A. 740
B. 0,074
C. 7,4
D. 0,74



- A. 0,59
B. 59
C. 0,059
D. 590



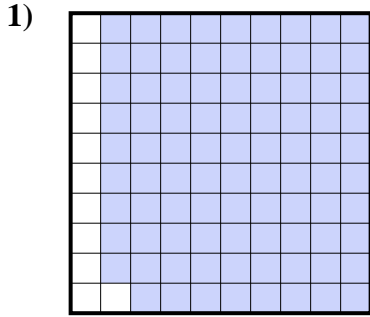
- A. 140
B. 0,14
C. 14
D. 1,4

Antworten


1. _____
2. _____
3. _____
4. _____
5. _____
6. _____
7. _____
8. _____
9. _____



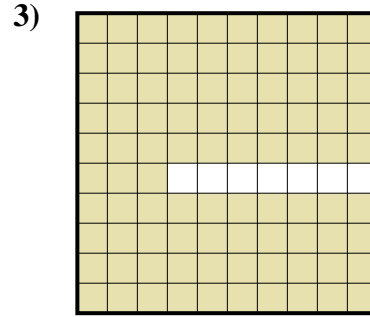
Stelle fest, welcher Buchstabe die schraffierte Fläche in Bezug auf das Ganze richtig darstellt.



- A. 0,89
- B. 0,089
- C. 8,9
- D. 890



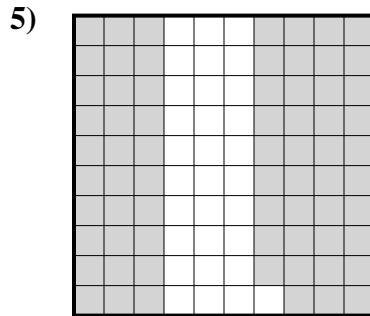
- A. 100
- B. 1
- C. 0,01
- D. 0,1



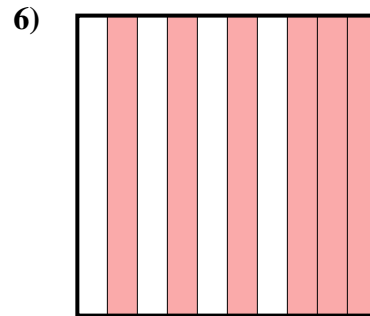
- A. 93
- B. 9,3
- C. 0,93
- D. 0,093



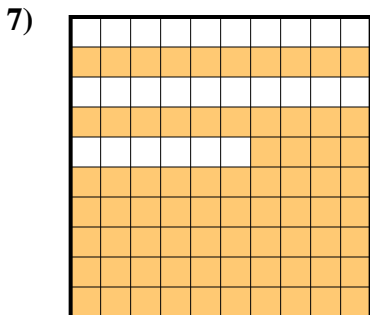
- A. 0,5
- B. 500
- C. 5
- D. 50



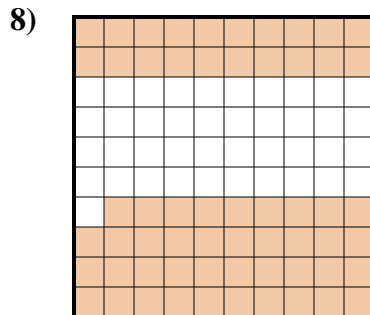
- A. 0,069
- B. 0,69
- C. 69
- D. 6,9



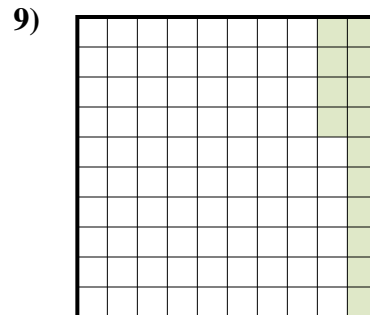
- A. 6
- B. 0,6
- C. 600
- D. 60



- A. 740
- B. 0,074
- C. 7,4
- D. 0,74



- A. 0,59
- B. 59
- C. 0,059
- D. 590



- A. 140
- B. 0,14
- C. 14
- D. 1,4

Antworten

1. **A**
2. **D**
3. **C**
4. **A**
5. **B**
6. **B**
7. **D**
8. **A**
9. **B**