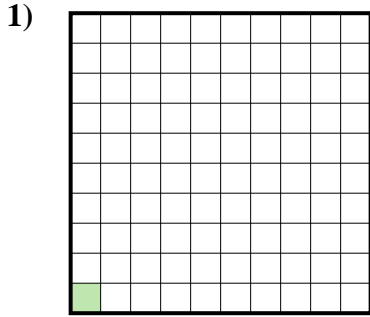


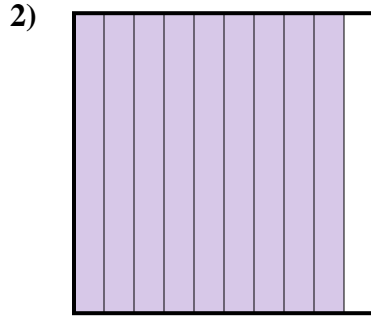


Stelle fest, welcher Buchstabe die schraffierte Fläche in Bezug auf das Ganze richtig darstellt.

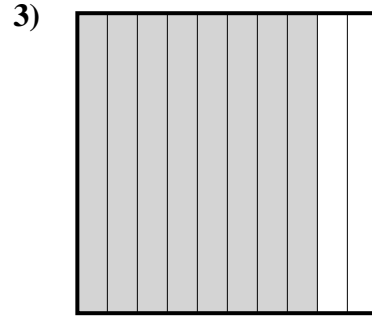
Antworten



- A. 1
- B. 10
- C. 0,001
- D. 0,01



- A. 0,09
- B. 9
- C. 0,9
- D. 900

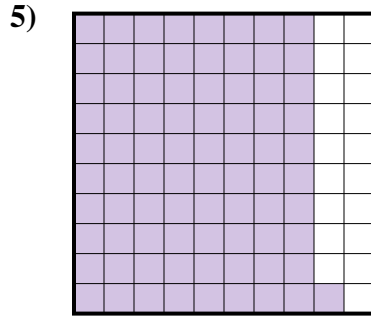


- A. 80
- B. 0,8
- C. 0,08
- D. 8

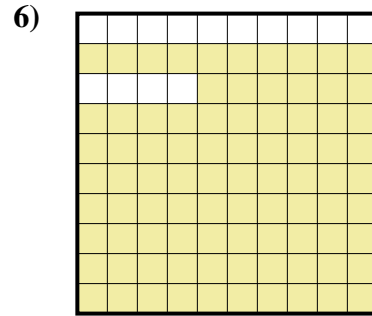
- 1. _____
- 2. _____
- 3. _____
- 4. _____
- 5. _____
- 6. _____
- 7. _____
- 8. _____
- 9. _____



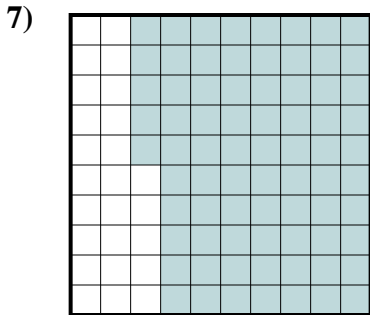
- A. 0,2
- B. 2
- C. 0,02
- D. 200



- A. 8,1
- B. 81
- C. 0,81
- D. 0,081



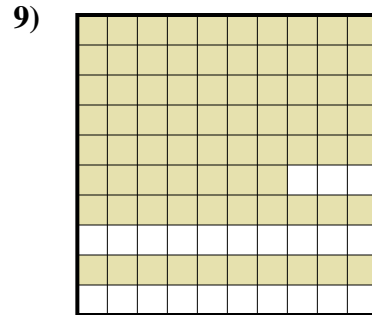
- A. 0,86
- B. 86
- C. 860
- D. 8,6



- A. 75
- B. 0,075
- C. 7,5
- D. 0,75



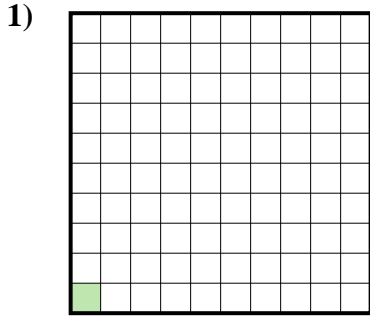
- A. 5
- B. 50
- C. 0,5
- D. 0,05



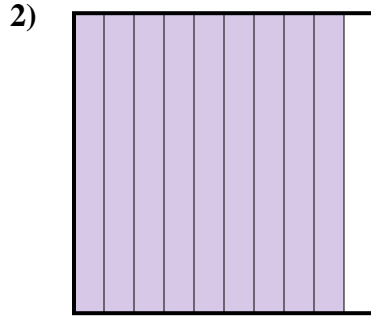
- A. 770
- B. 77
- C. 0,77
- D. 0,077



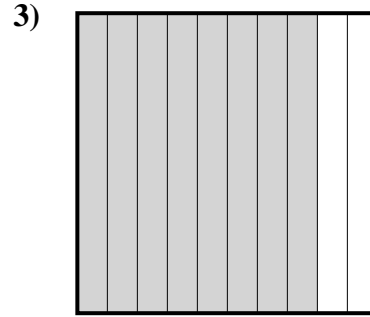
Stelle fest, welcher Buchstabe die schraffierte Fläche in Bezug auf das Ganze richtig darstellt.



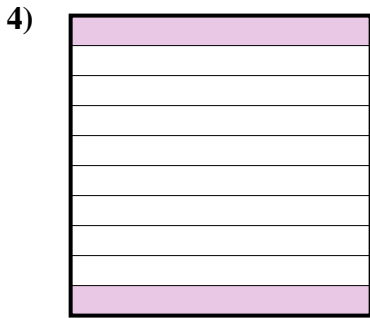
- A. 1
B. 10
C. 0,001
D. 0,01



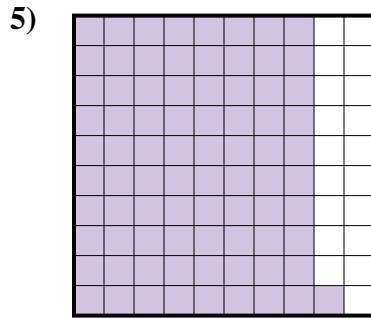
- A. 0,09
B. 9
C. 0,9
D. 900



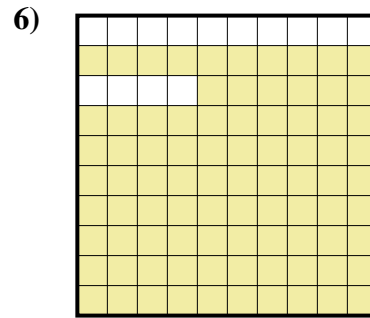
- A. 80
B. 0,8
C. 0,08
D. 8



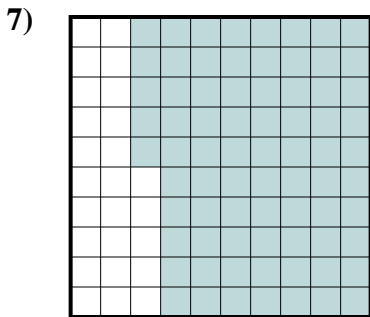
- A. 0,2
B. 2
C. 0,02
D. 200



- A. 8,1
B. 81
C. 0,81
D. 0,081



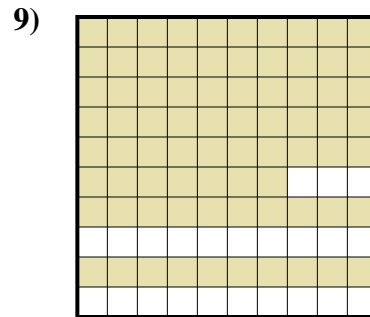
- A. 0,86
B. 86
C. 860
D. 8,6



- A. 75
B. 0,075
C. 7,5
D. 0,75



- A. 5
B. 50
C. 0,5
D. 0,05



- A. 770
B. 77
C. 0,77
D. 0,077

Antworten

1. **D**
2. **C**
3. **B**
4. **A**
5. **C**
6. **A**
7. **D**
8. **C**
9. **C**