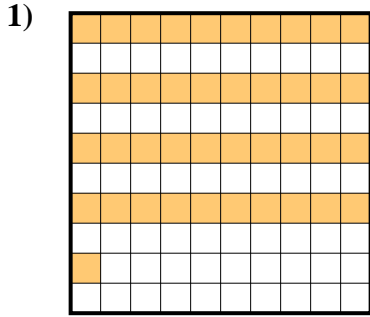
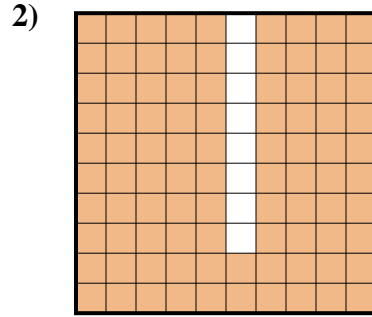





Stelle fest, welcher Buchstabe die schraffierte Fläche in Bezug auf das Ganze richtig darstellt.



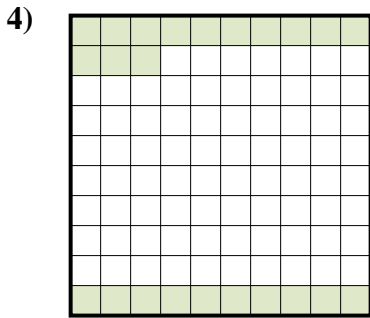
- A. 410
B. 4,1
C. 0,41
D. 41



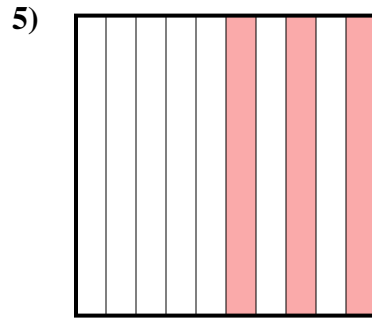
- A. 92
B. 920
C. 0,92
D. 9,2



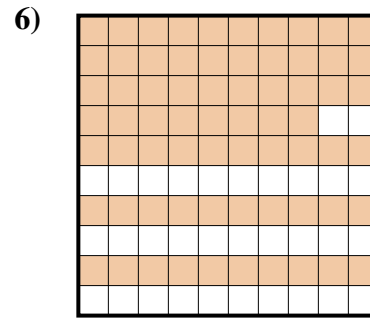
- A. 0,8
B. 0,08
C. 800
D. 80



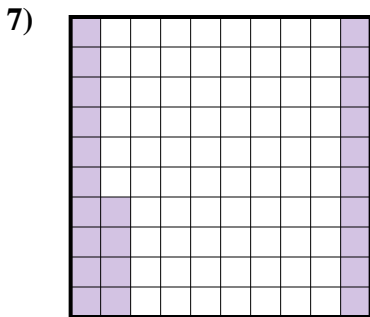
- A. 230
B. 0,23
C. 0,023
D. 2,3



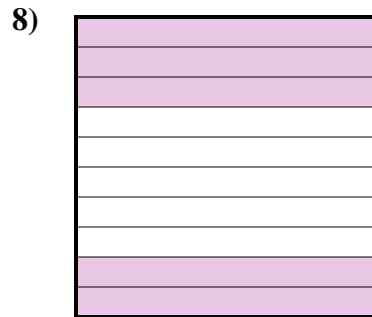
- A. 0,3
B. 0,03
C. 30
D. 3



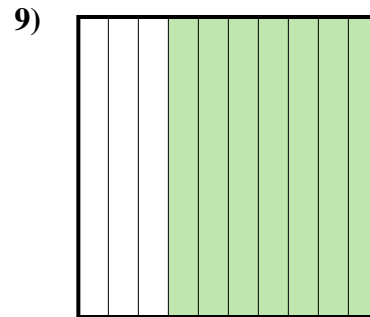
- A. 680
B. 0,068
C. 0,68
D. 6,8



- A. 240
B. 0,24
C. 0,024
D. 2,4



- A. 5
B. 500
C. 0,5
D. 50



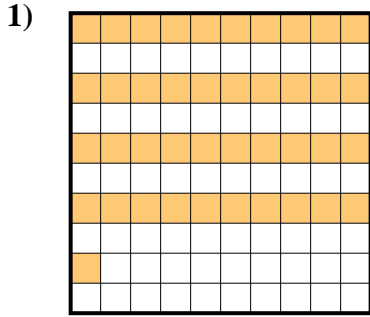
- A. 0,7
B. 70
C. 700
D. 0,07

Antworten

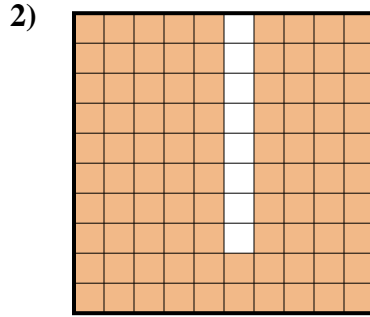
1. _____
2. _____
3. _____
4. _____
5. _____
6. _____
7. _____
8. _____
9. _____



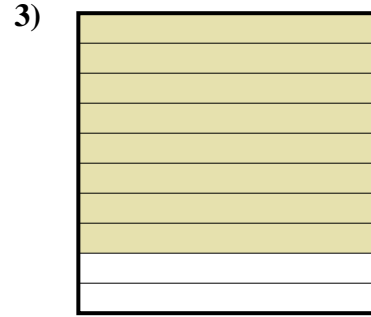
Stelle fest, welcher Buchstabe die schraffierte Fläche in Bezug auf das Ganze richtig darstellt.



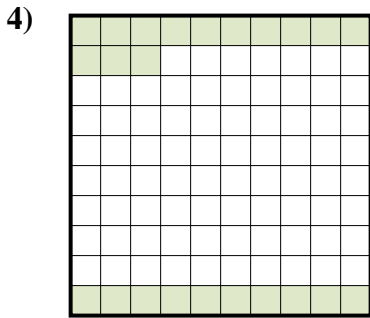
- A. 410
B. 4,1
C. 0,41
D. 41



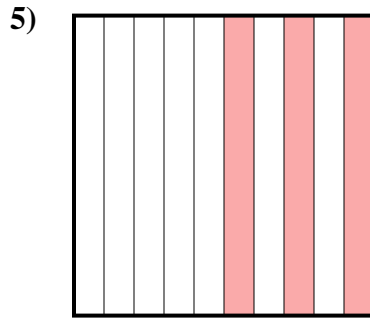
- A. 92
B. 920
C. 0,92
D. 9,2



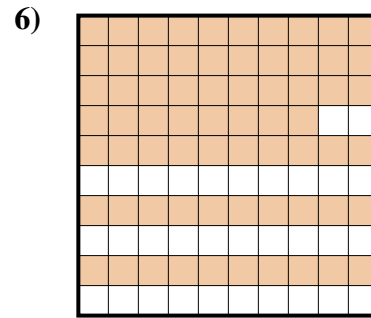
- A. 0,8
B. 0,08
C. 800
D. 80



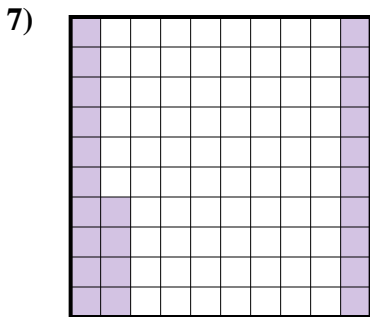
- A. 230
B. 0,23
C. 0,023
D. 2,3



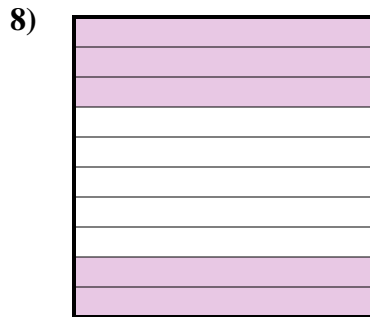
- A. 0,3
B. 0,03
C. 30
D. 3



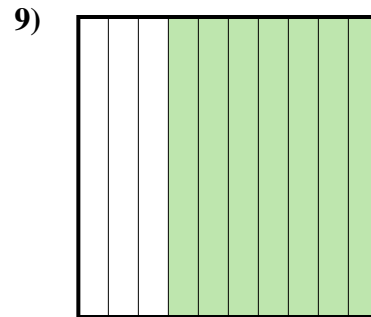
- A. 680
B. 0,068
C. 0,68
D. 6,8



- A. 240
B. 0,24
C. 0,024
D. 2,4



- A. 5
B. 500
C. 0,5
D. 50



- A. 0,7
B. 70
C. 700
D. 0,07

Antworten

1. **C**
2. **C**
3. **A**
4. **B**
5. **A**
6. **C**
7. **B**
8. **C**
9. **A**