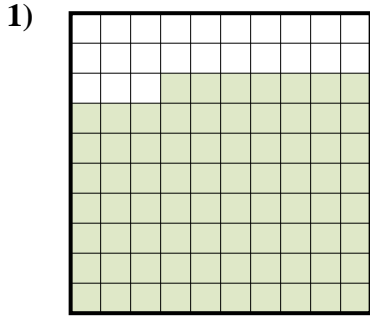
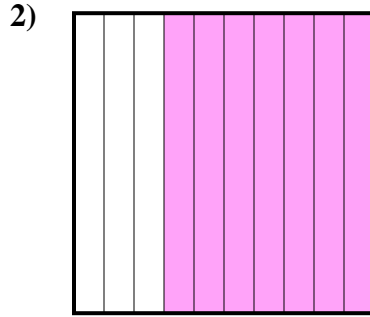


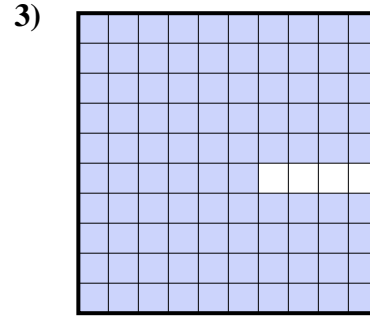
Stelle fest, welcher Buchstabe die schraffierte Fläche in Bezug auf das Ganze richtig darstellt.




- A. 0,077
B. 77
C. 7,7
D. 0,77



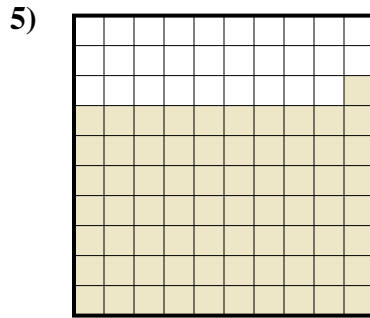
- A. 0,07
B. 700
C. 7
D. 0,7



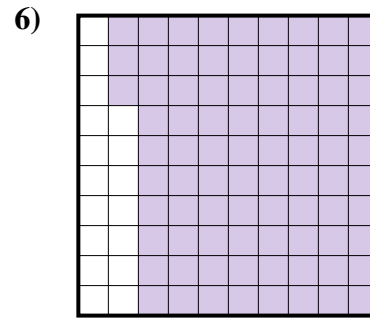
- A. 0,096
B. 96
C. 0,96
D. 960




- A. 4
B. 0,4
C. 40
D. 0,04



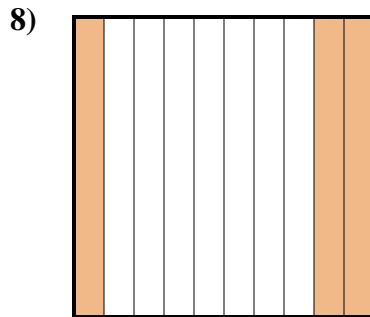
- A. 7,1
B. 0,71
C. 71
D. 710



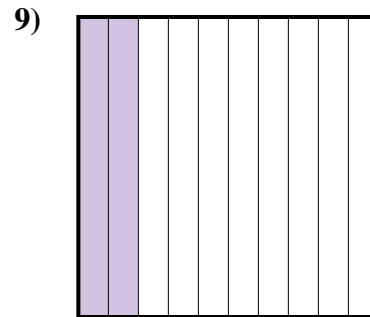
- A. 830
B. 0,83
C. 0,083
D. 8,3



- A. 1
B. 0,01
C. 0,1
D. 10



- A. 30
B. 3
C. 0,3
D. 0,03



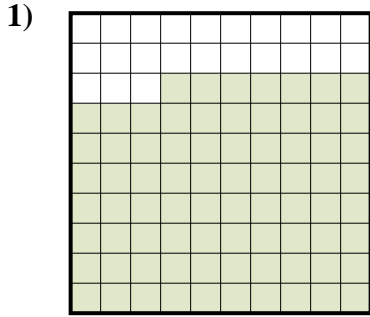
- A. 20
B. 200
C. 0,2
D. 0,02

Antworten

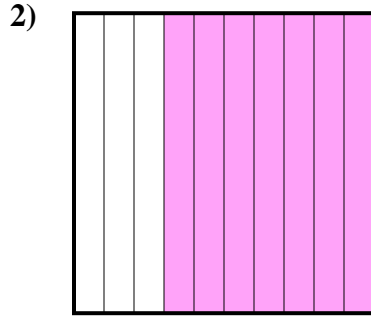
1. _____
2. _____
3. _____
4. _____
5. _____
6. _____
7. _____
8. _____
9. _____



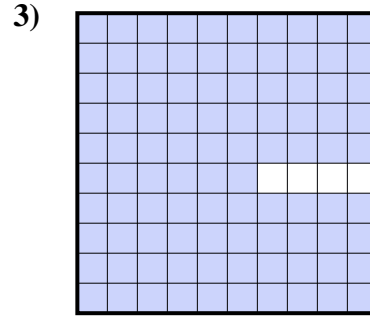
Stelle fest, welcher Buchstabe die schraffierte Fläche in Bezug auf das Ganze richtig darstellt.




- A. 0,077
B. 77
C. 7,7
D. 0,77



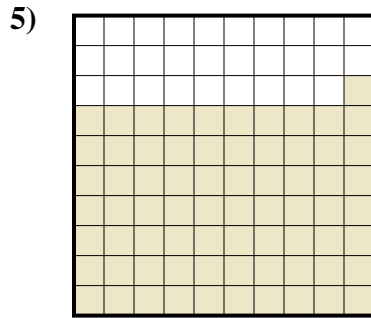
- A. 0,07
B. 700
C. 7
D. 0,7



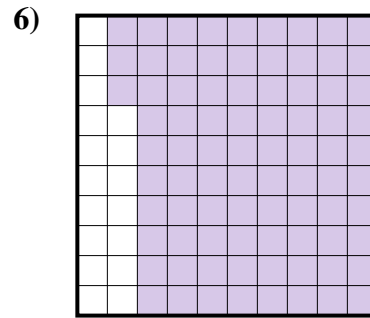
- A. 0,096
B. 96
C. 0,96
D. 960




- A. 4
B. 0,4
C. 40
D. 0,04



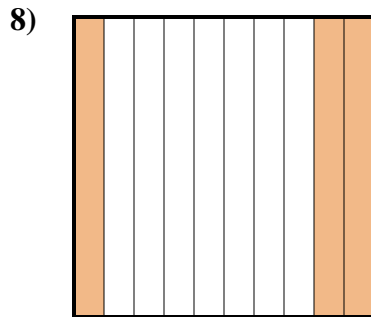
- A. 7,1
B. 0,71
C. 71
D. 710



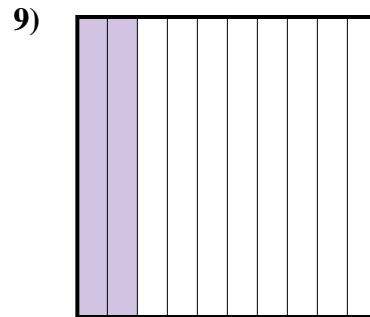
- A. 830
B. 0,83
C. 0,083
D. 8,3



- A. 1
B. 0,01
C. 0,1
D. 10



- A. 30
B. 3
C. 0,3
D. 0,03



- A. 20
B. 200
C. 0,2
D. 0,02

Antworten

1. **D**
2. **D**
3. **C**
4. **B**
5. **B**
6. **B**
7. **C**
8. **C**
9. **C**