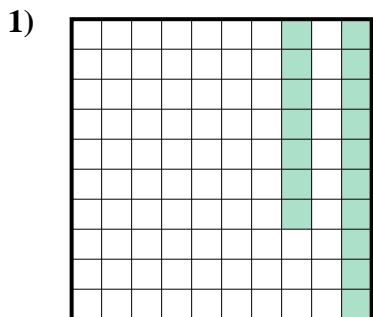





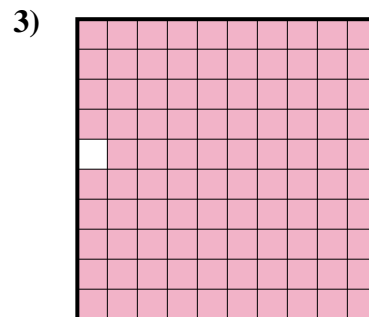
Stelle fest, welcher Buchstabe die schraffierte Fläche in Bezug auf das Ganze richtig darstellt.



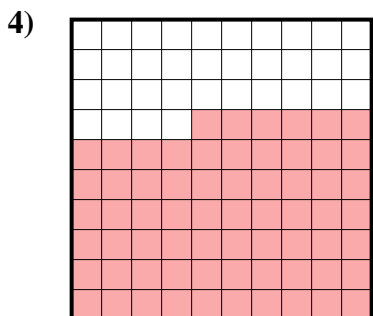
- A. 0,17
B. 1,7
C. 17
D. 0,017



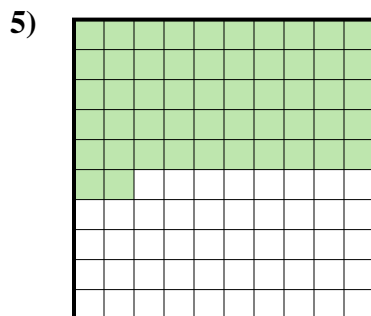
- A. 0,09
B. 0,9
C. 90
D. 9



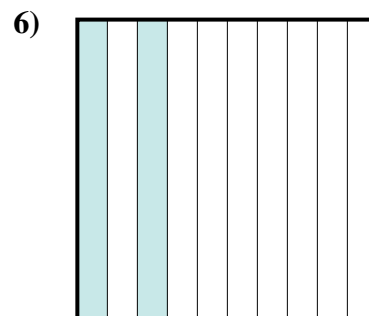
- A. 0,99
B. 0,099
C. 9,9
D. 99



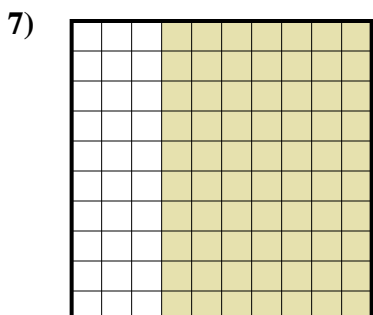
- A. 660
B. 0,066
C. 0,66
D. 6,6



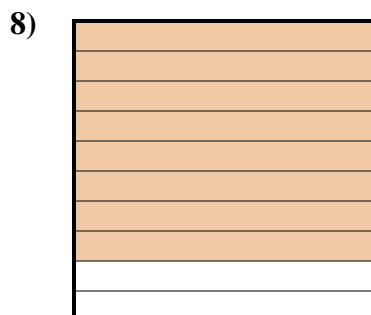
- A. 5,2
B. 0,052
C. 0,52
D. 520



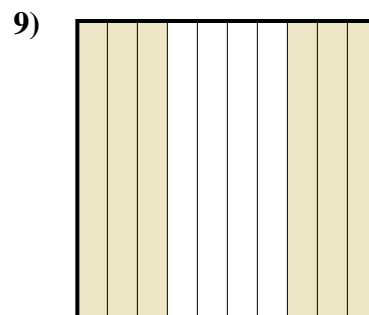
- A. 2
B. 0,2
C. 20
D. 0,02



- A. 0,7
B. 0,07
C. 7
D. 70



- A. 0,8
B. 800
C. 8
D. 80



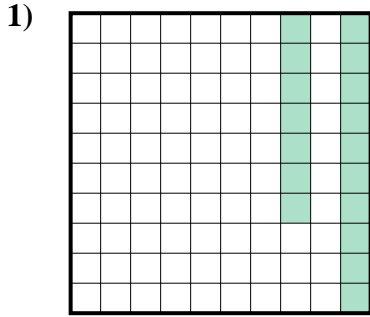
- A. 600
B. 6
C. 0,06
D. 0,6

Antworten

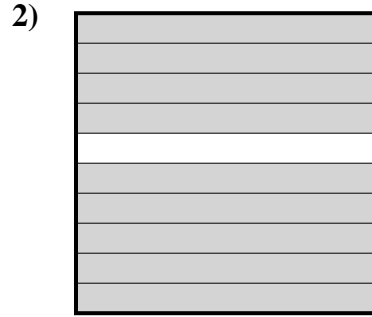
1. _____
2. _____
3. _____
4. _____
5. _____
6. _____
7. _____
8. _____
9. _____



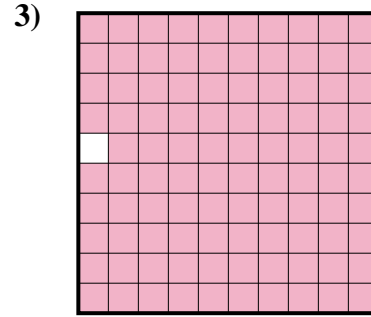
Stelle fest, welcher Buchstabe die schraffierte Fläche in Bezug auf das Ganze richtig darstellt.



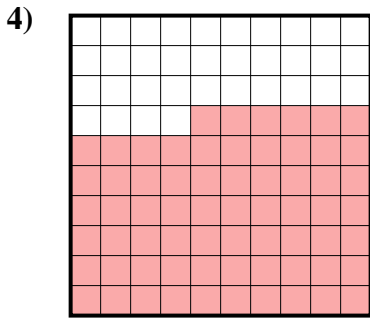
- A. 0,17
B. 1,7
C. 17
D. 0,017



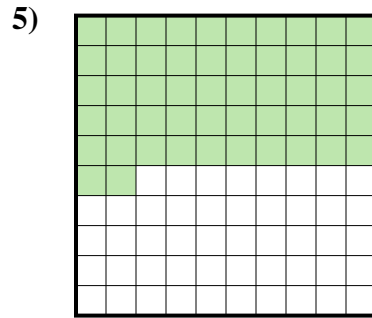
- A. 0,09
B. 0,9
C. 90
D. 9



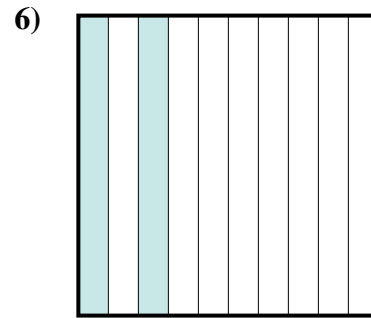
- A. 0,99
B. 0,099
C. 9,9
D. 99



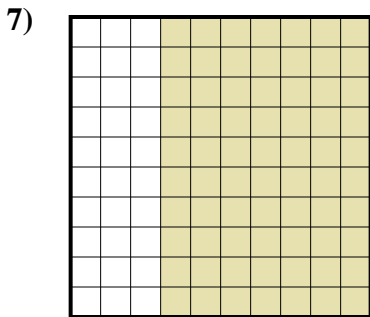
- A. 660
B. 0,066
C. 0,66
D. 6,6



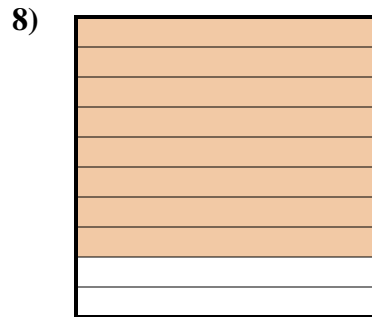
- A. 5,2
B. 0,052
C. 0,52
D. 520



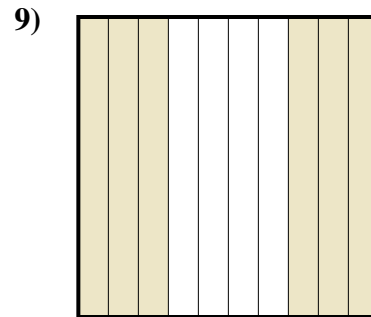
- A. 2
B. 0,2
C. 20
D. 0,02



- A. 0,7
B. 0,07
C. 7
D. 70



- A. 0,8
B. 800
C. 8
D. 80



- A. 600
B. 6
C. 0,06
D. 0,6

Antworten

1. **A**
2. **B**
3. **A**
4. **C**
5. **C**
6. **B**
7. **A**
8. **A**
9. **D**