
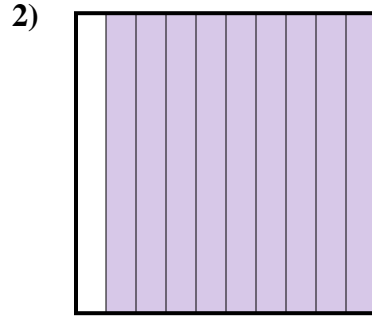





Stelle fest, welcher Buchstabe die schraffierte Fläche in Bezug auf das Ganze richtig darstellt.



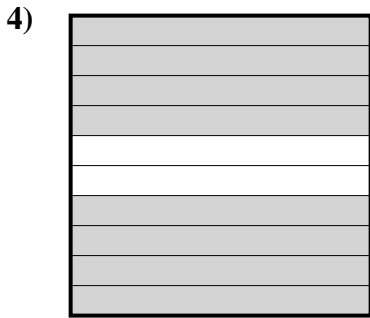
- A. 0,5
B. 5
C. 500
D. 50



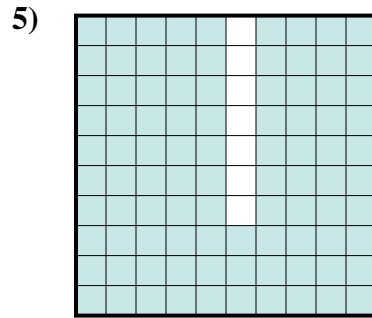
- A. 0,09
B. 9
C. 90
D. 0,9



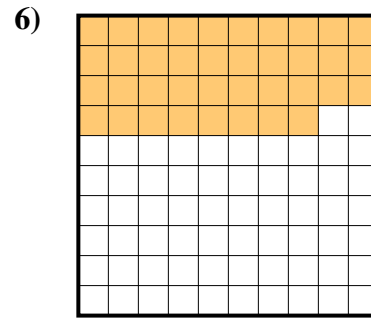
- A. 700
B. 0,07
C. 0,7
D. 70



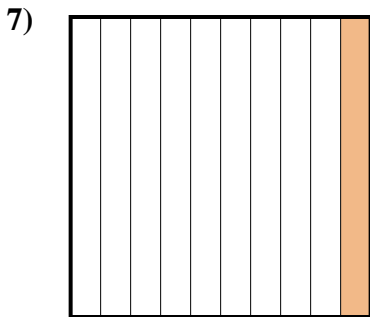
- A. 800
B. 0,08
C. 80
D. 0,8



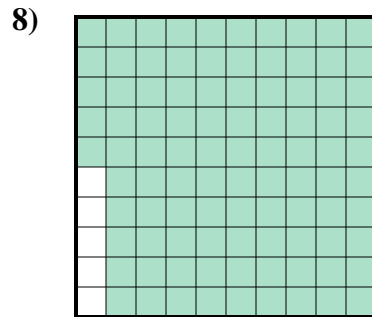
- A. 930
B. 0,093
C. 93
D. 0,93



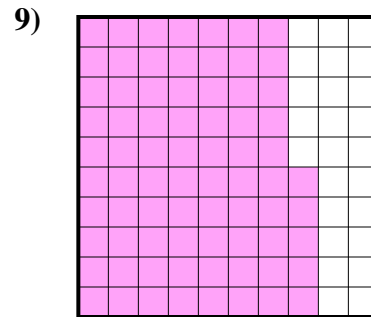
- A. 3,8
B. 380
C. 0,38
D. 0,038



- A. 10
B. 1
C. 0,1
D. 100



- A. 0,095
B. 0,95
C. 950
D. 95




- A. 7,5
B. 75
C. 0,075
D. 0,75

Antworten

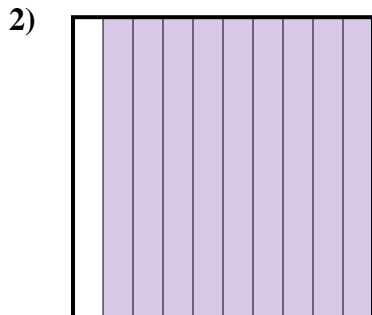
1. _____
2. _____
3. _____
4. _____
5. _____
6. _____
7. _____
8. _____
9. _____




Stelle fest, welcher Buchstabe die schraffierte Fläche in Bezug auf das Ganze richtig darstellt.




- A. 0,5
B. 5
C. 500
D. 50



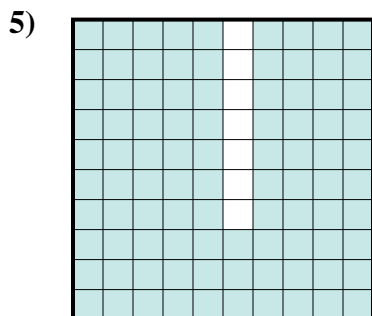
- A. 0,09
B. 9
C. 90
D. 0,9



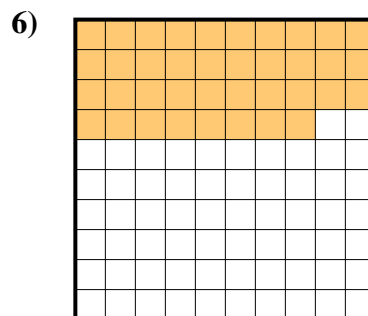
- A. 700
B. 0,07
C. 0,7
D. 70



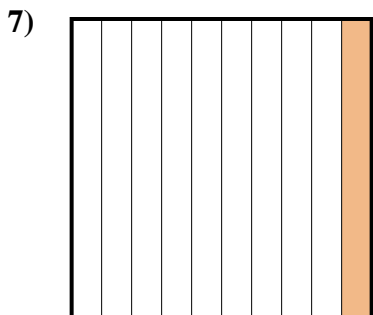
- A. 800
B. 0,08
C. 80
D. 0,8



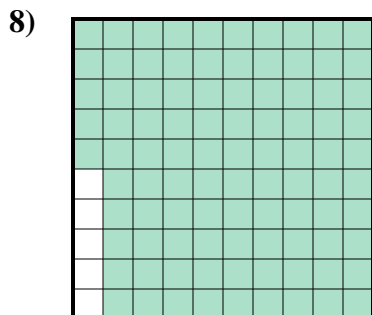
- A. 930
B. 0,093
C. 93
D. 0,93



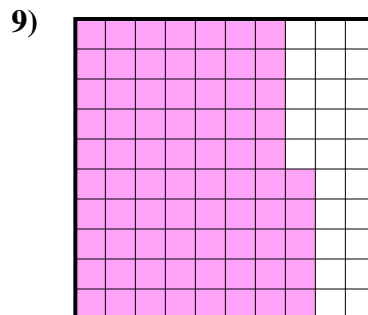
- A. 3,8
B. 380
C. 0,38
D. 0,038



- A. 10
B. 1
C. 0,1
D. 100



- A. 0,095
B. 0,95
C. 950
D. 95



- A. 7,5
B. 75
C. 0,075
D. 0,75

Antworten

1. **A**
2. **D**
3. **C**
4. **D**
5. **D**
6. **C**
7. **C**
8. **B**
9. **D**