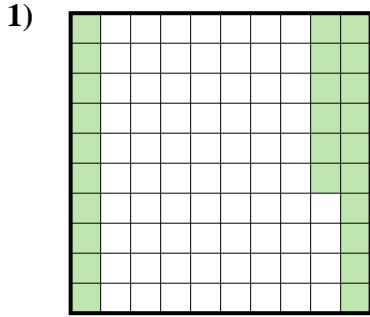


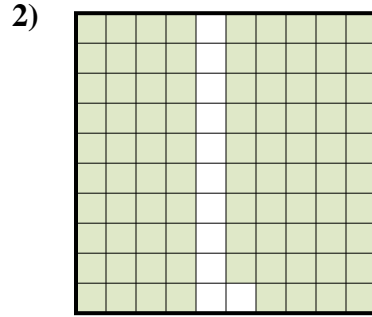


Stelle fest, welcher Buchstabe die schraffierte Fläche in Bezug auf das Ganze richtig darstellt.

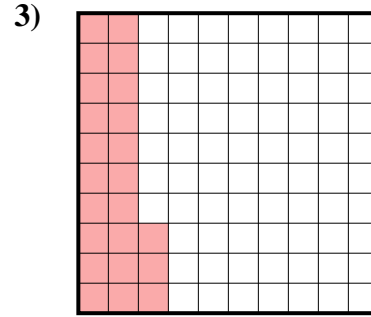
Antworten



- A. 0,26
- B. 260
- C. 2,6
- D. 26

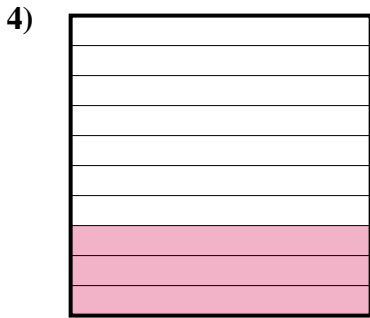


- A. 0,89
- B. 89
- C. 0,089
- D. 890

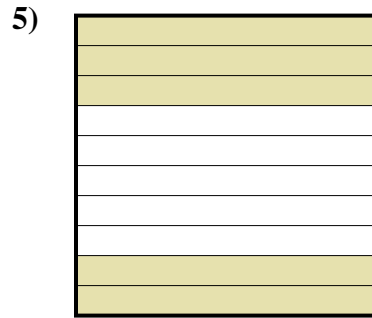


- A. 23
- B. 0,023
- C. 230
- D. 0,23


- 1. _____
- 2. _____
- 3. _____
- 4. _____
- 5. _____
- 6. _____
- 7. _____
- 8. _____
- 9. _____



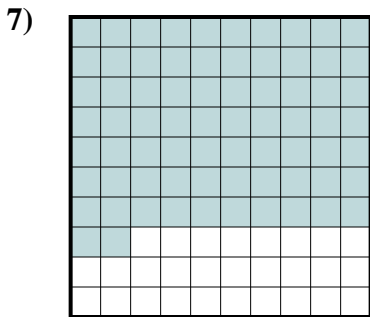
- A. 30
- B. 0,03
- C. 0,3
- D. 3



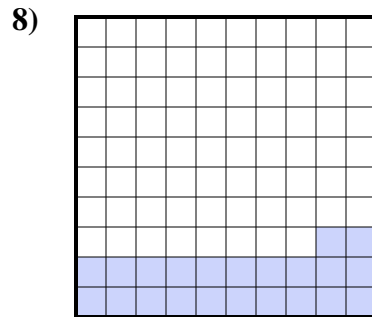
- A. 0,05
- B. 0,5
- C. 500
- D. 50



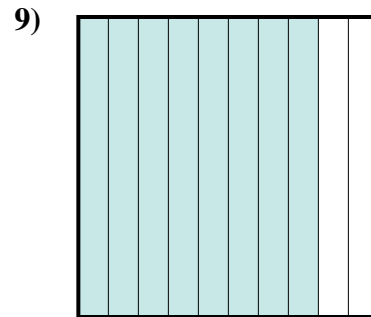
- A. 40
- B. 4
- C. 400
- D. 0,4



- A. 0,072
- B. 72
- C. 0,72
- D. 720



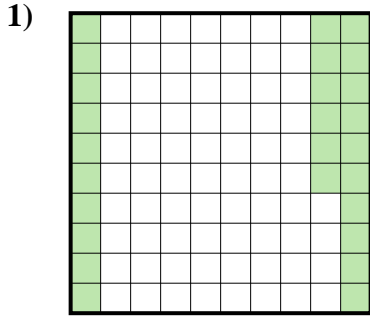
- A. 0,022
- B. 220
- C. 22
- D. 0,22



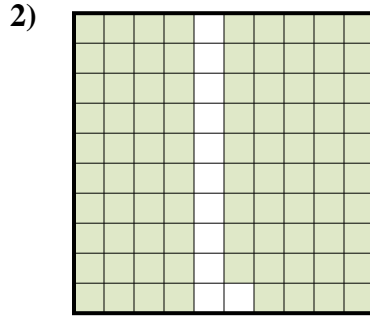
- A. 0,8
- B. 800
- C. 80
- D. 0,08



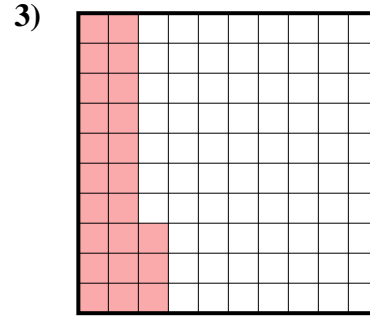
Stelle fest, welcher Buchstabe die schraffierte Fläche in Bezug auf das Ganze richtig darstellt.



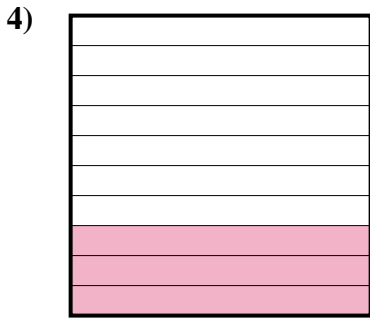
- A. 0,26
- B. 260
- C. 2,6
- D. 26




- A. 0,89
- B. 89
- C. 0,089
- D. 890




- A. 23
- B. 0,023
- C. 230
- D. 0,23



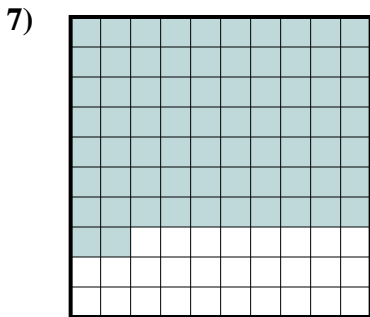
- A. 30
- B. 0,03
- C. 0,3
- D. 3



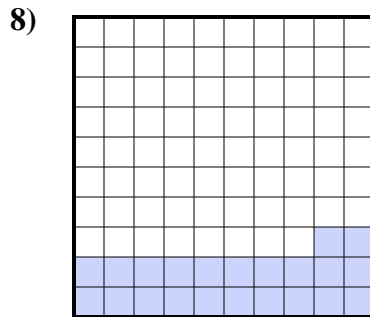
- A. 0,05
- B. 0,5
- C. 500
- D. 50



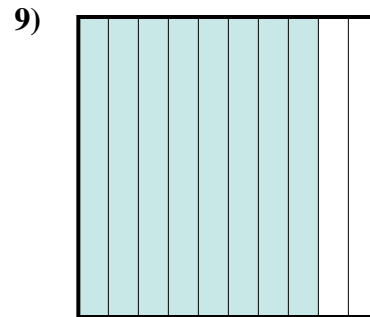
- A. 40
- B. 4
- C. 400
- D. 0,4



- A. 0,072
- B. 72
- C. 0,72
- D. 720



- A. 0,022
- B. 220
- C. 22
- D. 0,22



- A. 0,8
- B. 800
- C. 80
- D. 0,08

Antworten

1. **A**
2. **A**
3. **D**
4. **C**
5. **B**
6. **D**
7. **C**
8. **D**
9. **A**