



Ordne die folgenden Flächen der Größe nach (von der kleinsten Fläche zur größten) gemäß den Schattierungen.

Bsp) A B C D

klein 0,05 - A
0,4 - D
0,9 - C
groß 0,94 - B

Antworten

Bsp. A,D,C,B

1. _____
2. _____
3. _____
4. _____
5. _____
6. _____
7. _____
8. _____

1) A B C D

klein _____
 groß _____

2) A B C D

klein _____
 groß _____

3) A B C D

klein _____
 groß _____

4) A B C D

klein _____
 groß _____

5) A B C D

klein _____
 groß _____

6) A B C D

klein _____
 groß _____

7) A B C D

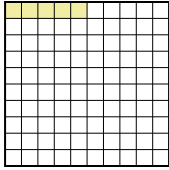
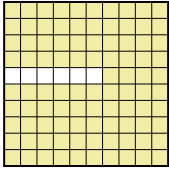


klein _____
 groß _____

8) A B C D

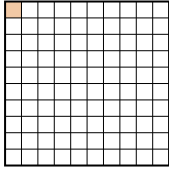
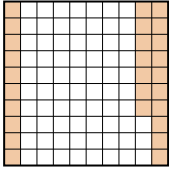
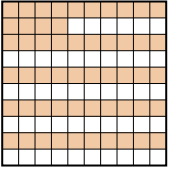
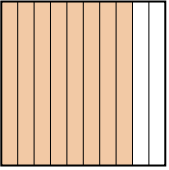
klein _____
 groß _____



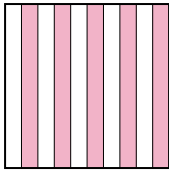
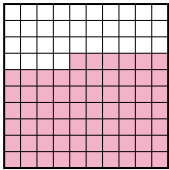

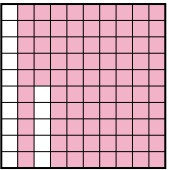
Ordne die folgenden Flächen der Größe nach (von der kleinsten Fläche zur größten) gemäß den Schattierungen.

Bsp) A  B  C  D 

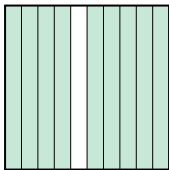


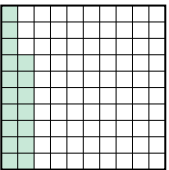
klein $\frac{0,05 - A}{0,4 - D}$
 groß $\frac{0,9 - C}{0,94 - B}$

1) A  B  C  D 

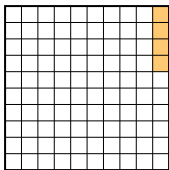

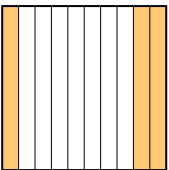
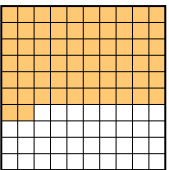
klein $\frac{0,01 - A}{0,27 - B}$
 groß $\frac{0,54 - C}{0,8 - D}$

2) A  B  C  D 


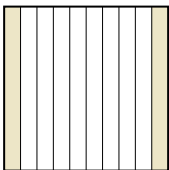
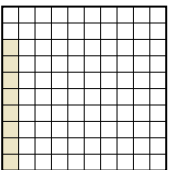
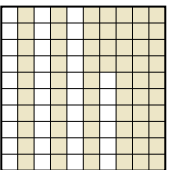
klein $\frac{0,4 - C}{0,5 - A}$
 groß $\frac{0,66 - B}{0,85 - D}$

3) A  B  C  D 

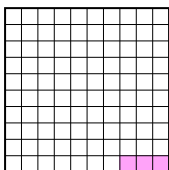
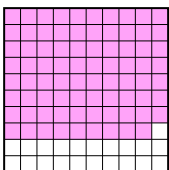
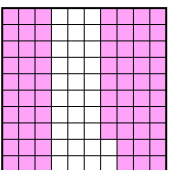

klein $\frac{0,1 - B}{0,17 - D}$
 groß $\frac{0,9 - A}{0,94 - C}$

4) A  B  C  D 

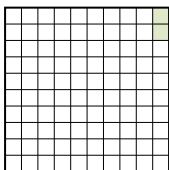
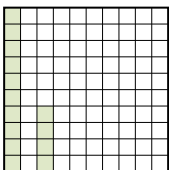
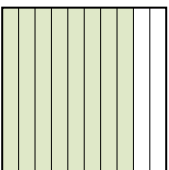

klein $\frac{0,04 - A}{0,3 - C}$
 groß $\frac{0,6 - B}{0,62 - D}$

5) A  B  C  D 

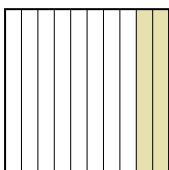

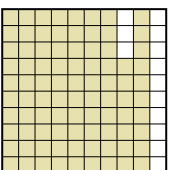
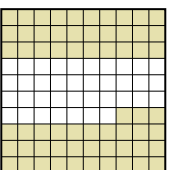
klein $\frac{0,08 - C}{0,2 - B}$
 groß $\frac{0,4 - A}{0,64 - D}$

6) A  B  C  D 

klein $\frac{0,03 - A}{0,2 - D}$
 groß $\frac{0,68 - C}{0,79 - B}$

7) A  B  C  D 

klein $\frac{0,02 - A}{0,14 - B}$
 groß $\frac{0,5 - D}{0,8 - C}$

8) A  B  C  D 

klein $\frac{0,2 - A}{0,4 - B}$
 groß $\frac{0,63 - D}{0,87 - C}$

AntwortenBsp. A,D,C,B1. A,B,C,D2. C,A,B,D3. B,D,A,C4. A,C,B,D5. C,B,A,D6. A,D,C,B7. A,B,D,C8. A,B,D,C