

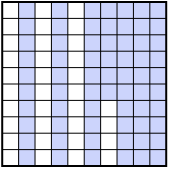
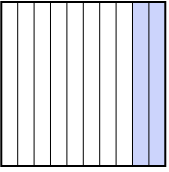




Ordne die folgenden Flächen der Größe nach (von der kleinsten Fläche zur größten) gemäß den Schattierungen.

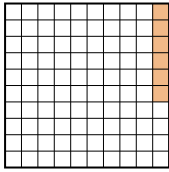
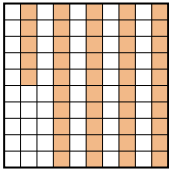
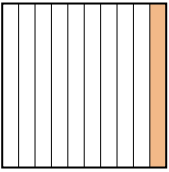
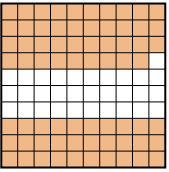
Bsp) A  B  C  D 

klein $0,2 - D$
 $0,5 - A$
 $0,66 - C$
 groß $0,7 - B$

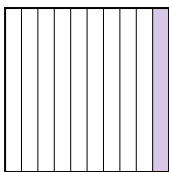

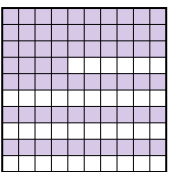
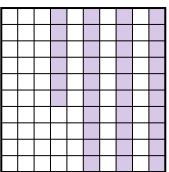
Antworten

Bsp. D,A,C,B



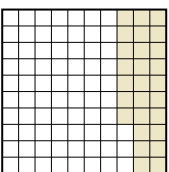
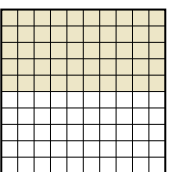
1. _____
2. _____
3. _____
4. _____
5. _____
6. _____
7. _____
8. _____

1) A  B  C  D 

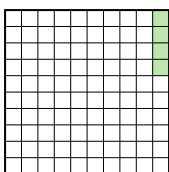
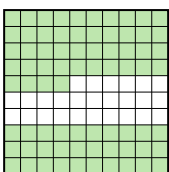

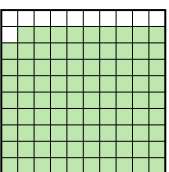
klein _____
 groß _____

2) A  B  C  D 


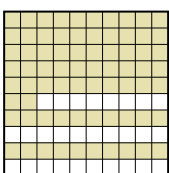
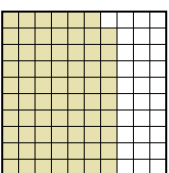
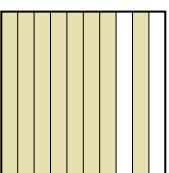
klein _____
 groß _____

3) A  B  C  D 

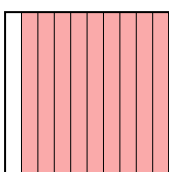

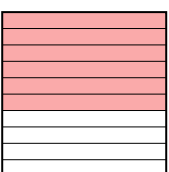
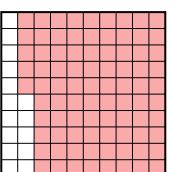
klein _____
 groß _____

4) A  B  C  D 

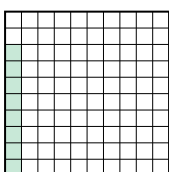
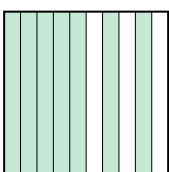
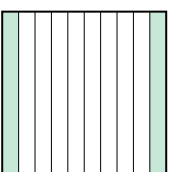
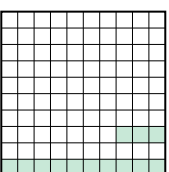
klein _____
 groß _____

5) A  B  C  D 

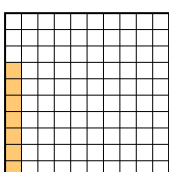
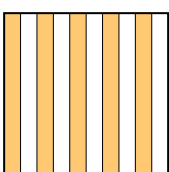
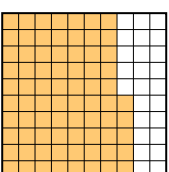
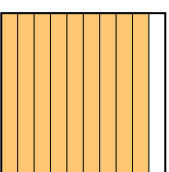
klein _____
 groß _____

6) A  B  C  D 

klein _____
 groß _____

7) A  B  C  D 



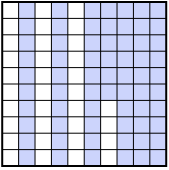
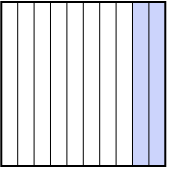
klein _____
 groß _____

8) A  B  C  D 

klein _____
 groß _____

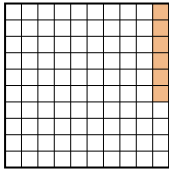
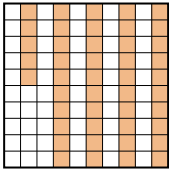
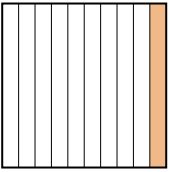
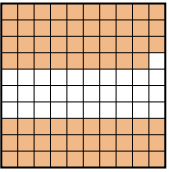


Ordne die folgenden Flächen der Größe nach (von der kleinsten Fläche zur größten) gemäß den Schattierungen.

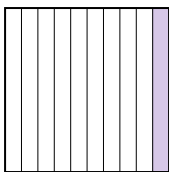

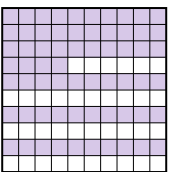
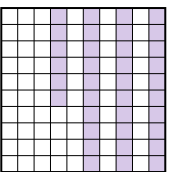
Bsp) A  B  C  D 

klein $\frac{0,2 - D}{0,5 - A}$
groß $\frac{0,66 - C}{0,7 - B}$



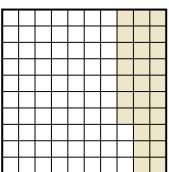
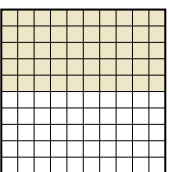
AntwortenBsp. D,A,C,B1. A,C,B,D2. A,D,C,B3. C,D,A,B4. A,C,B,D5. C,A,B,D6. B,C,D,A7. A,D,C,B8. A,B,C,D

1) A  B  C  D 

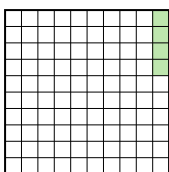
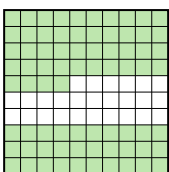
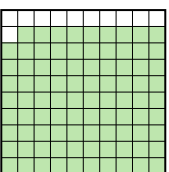
klein $\frac{0,06 - A}{0,1 - C}$
groß $\frac{0,45 - B}{0,69 - D}$

2) A  B  C  D 


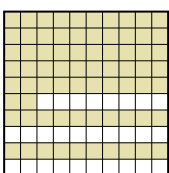
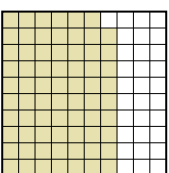
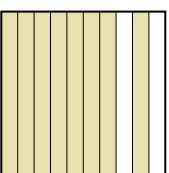
klein $\frac{0,1 - A}{0,36 - D}$
groß $\frac{0,64 - C}{0,9 - B}$

3) A  B  C  D 

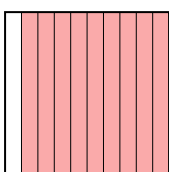

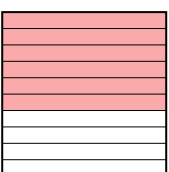
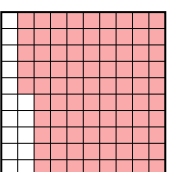
klein $\frac{0,27 - C}{0,50 - D}$
groß $\frac{0,6 - A}{0,9 - B}$

4) A  B  C  D 

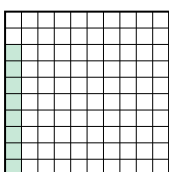
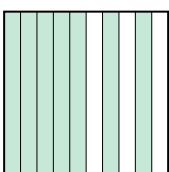
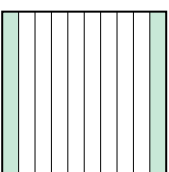
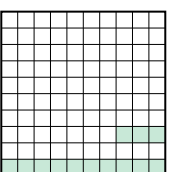
klein $\frac{0,04 - A}{0,6 - C}$
groß $\frac{0,74 - B}{0,89 - D}$

5) A  B  C  D 

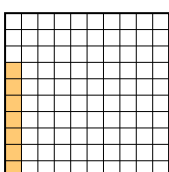
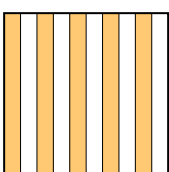
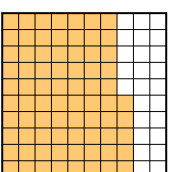
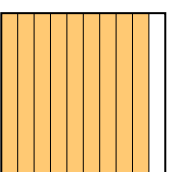
klein $\frac{0,69 - C}{0,7 - A}$
groß $\frac{0,72 - B}{0,8 - D}$

6) A  B  C  D 

klein $\frac{0,4 - B}{0,6 - C}$
groß $\frac{0,85 - D}{0,9 - A}$

7) A  B  C  D 

klein $\frac{0,08 - A}{0,13 - D}$
groß $\frac{0,2 - C}{0,7 - B}$

8) A  B  C  D 

klein $\frac{0,07 - A}{0,5 - B}$
groß $\frac{0,75 - C}{0,9 - D}$