
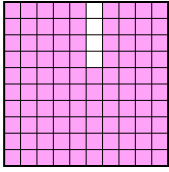
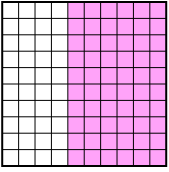





Ordne die folgenden Flächen der Größe nach (von der kleinsten Fläche zur größten) gemäß den Schattierungen.

Bsp) A  B  C  D 

klein 0,2 - D
0,6 - A
0,60 - C
 groß 0,96 - B

Antworten

Bsp. D,A,C,B

1. _____

2. _____

3. _____

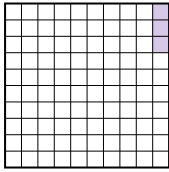
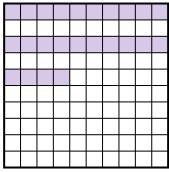

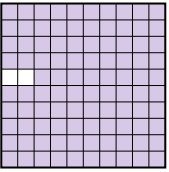
4. _____

5. _____

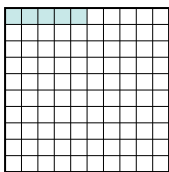
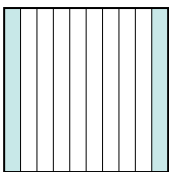

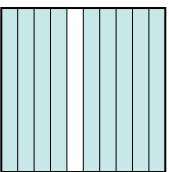
6. _____

7. _____




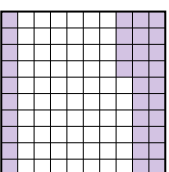
8. _____

1) A  B  C  D 


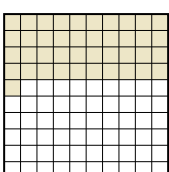
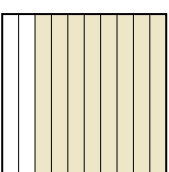
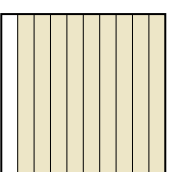
klein _____
 groß _____

2) A  B  C  D 

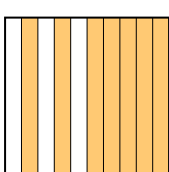
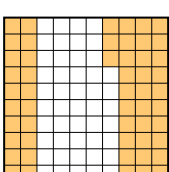
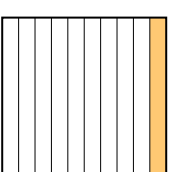
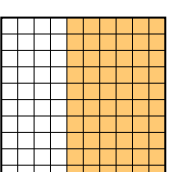
klein _____
 groß _____

3) A  B  C  D 


klein _____
 groß _____

4) A  B  C  D 

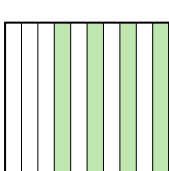
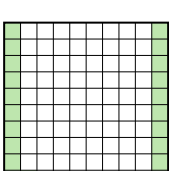
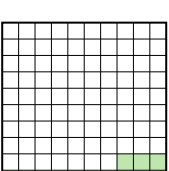
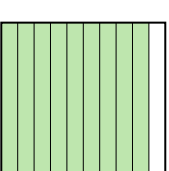
klein _____
 groß _____

5) A  B  C  D 

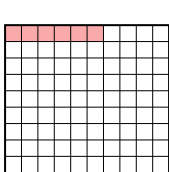
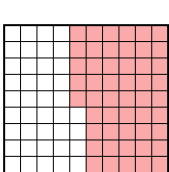
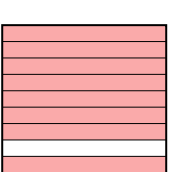
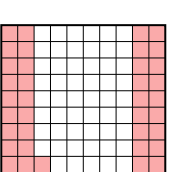
klein _____
 groß _____

6) A  B  C  D 

klein _____
 groß _____

7) A  B  C  D 


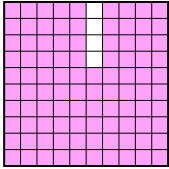
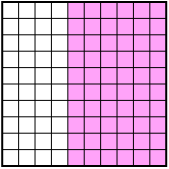

klein _____
 groß _____

8) A  B  C  D 

klein _____
 groß _____

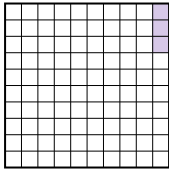
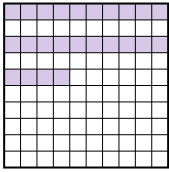

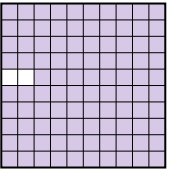


Ordne die folgenden Flächen der Größe nach (von der kleinsten Fläche zur größten) gemäß den Schattierungen.

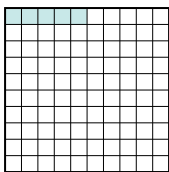
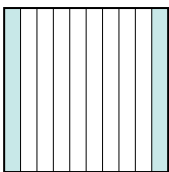

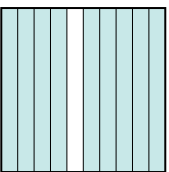
Bsp) A  B  C  D 

klein $\frac{0,2}{0,6} - D$
 $\frac{0,6}{0,60} - A$
 groß $\frac{0,60}{0,96} - C$



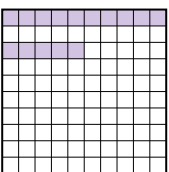
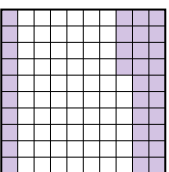
AntwortenBsp. D,A,C,B1. A,B,C,D2. A,B,C,D3. A,C,D,B4. A,B,C,D5. C,B,D,A6. B,A,C,D7. C,B,A,D8. A,D,B,C

1) A  B  C  D 


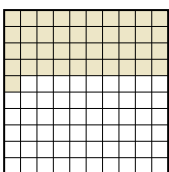
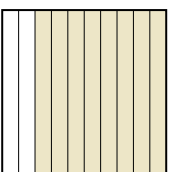
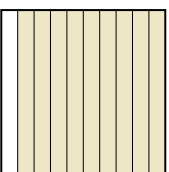
klein $\frac{0,03}{0,24} - A$
 $\frac{0,24}{0,4} - B$
 groß $\frac{0,4}{0,98} - D$

2) A  B  C  D 

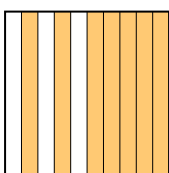
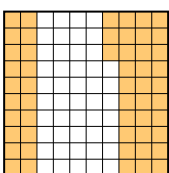
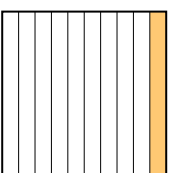
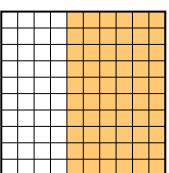
klein $\frac{0,05}{0,2} - A$
 $\frac{0,2}{0,7} - B$
 groß $\frac{0,7}{0,9} - D$

3) A  B  C  D 

klein $\frac{0,1}{0,15} - A$
 $\frac{0,15}{0,34} - C$
 groß $\frac{0,34}{0,7} - D$

4) A  B  C  D 

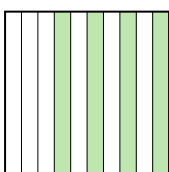
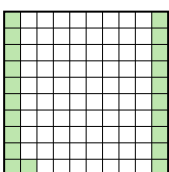
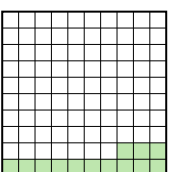
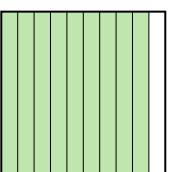
klein $\frac{0,2}{0,41} - A$
 $\frac{0,41}{0,8} - B$
 groß $\frac{0,8}{0,9} - D$

5) A  B  C  D 

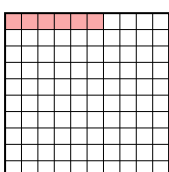
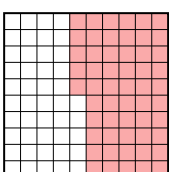
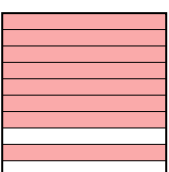
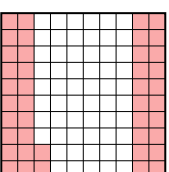
klein $\frac{0,1}{0,53} - C$
 $\frac{0,53}{0,60} - B$
 groß $\frac{0,60}{0,7} - A$

6) A  B  C  D 

klein $\frac{0,02}{0,07} - B$
 $\frac{0,07}{0,4} - A$
 groß $\frac{0,4}{0,9} - D$

7) A  B  C  D 

klein $\frac{0,13}{0,21} - C$
 $\frac{0,21}{0,4} - B$
 groß $\frac{0,4}{0,9} - D$

8) A  B  C  D 

klein $\frac{0,06}{0,42} - A$
 $\frac{0,42}{0,55} - D$
 groß $\frac{0,55}{0,8} - C$