



Ordne die folgenden Flächen der Größe nach (von der kleinsten Fläche zur größten) gemäß den Schattierungen.

Bsp) A B C D

klein 0,09 - A
0,2 - C
0,22 - D
 groß 0,63 - B

Antworten

Bsp. A,C,D,B

1) A B C D

klein _____
 groß _____

2) A B C D

klein _____
 groß _____

3) A B C D

klein _____
 groß _____

4) A B C D

klein _____
 groß _____

5) A B C D

klein _____
 groß _____

6) A B C D

klein _____
 groß _____

7) A B C D

klein _____
 groß _____

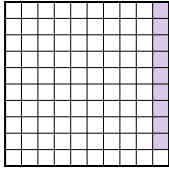
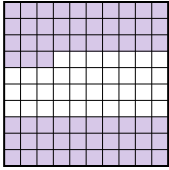
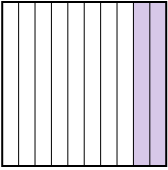
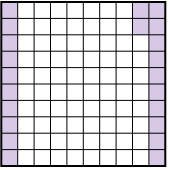
8) A B C D

klein _____
 groß _____

1. _____
2. _____
3. _____
4. _____
5. _____
6. _____
7. _____
8. _____

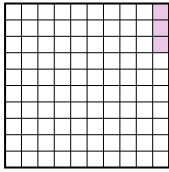
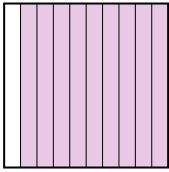
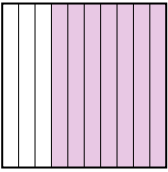
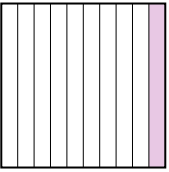


Ordne die folgenden Flächen der Größe nach (von der kleinsten Fläche zur größten) gemäß den Schattierungen.


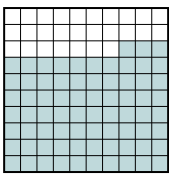
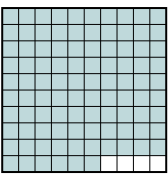

Bsp) A  B  C  D 

klein $\frac{0,09 - A}{0,2 - C}$
 $\frac{0,22 - D}{0,63 - B}$
 groß



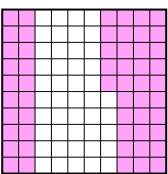
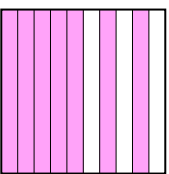
AntwortenBsp. A,C,D,B1. A,D,C,B2. A,D,B,C3. A,B,C,D4. A,B,C,D5. A,C,D,B6. A,D,C,B7. B,D,C,A8. B,A,D,C

1) A  B  C  D 

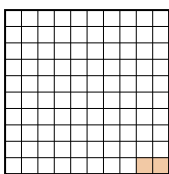
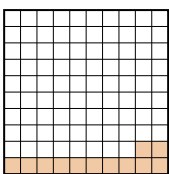

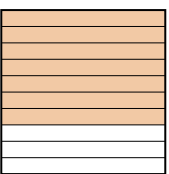
klein $\frac{0,03 - A}{0,1 - D}$
 $\frac{0,7 - C}{0,9 - B}$
 groß

2) A  B  C  D 

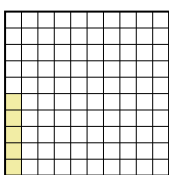
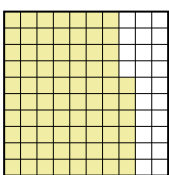


klein $\frac{0,4 - A}{0,6 - D}$
 $\frac{0,73 - B}{0,96 - C}$
 groß

3) A  B  C  D 

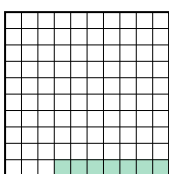

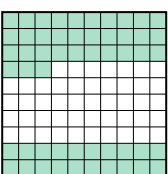
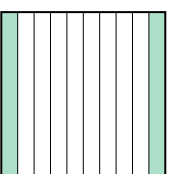
klein $\frac{0,1 - A}{0,3 - B}$
 $\frac{0,55 - C}{0,7 - D}$
 groß

4) A  B  C  D 




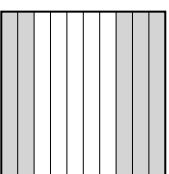
klein $\frac{0,02 - A}{0,12 - B}$
 $\frac{0,4 - C}{0,7 - D}$
 groß

5) A  B  C  D 


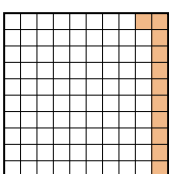
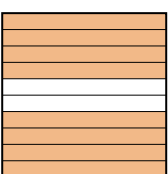
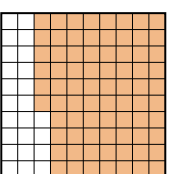
klein $\frac{0,05 - A}{0,3 - C}$
 $\frac{0,6 - D}{0,76 - B}$
 groß

6) A  B  C  D 

klein $\frac{0,07 - A}{0,2 - D}$
 $\frac{0,53 - C}{0,8 - B}$
 groß

7) A  B  C  D 

klein $\frac{0,08 - B}{0,5 - D}$
 $\frac{0,61 - C}{0,7 - A}$
 groß

8) A  B  C  D 

klein $\frac{0,11 - B}{0,6 - A}$
 $\frac{0,76 - D}{0,8 - C}$
 groß