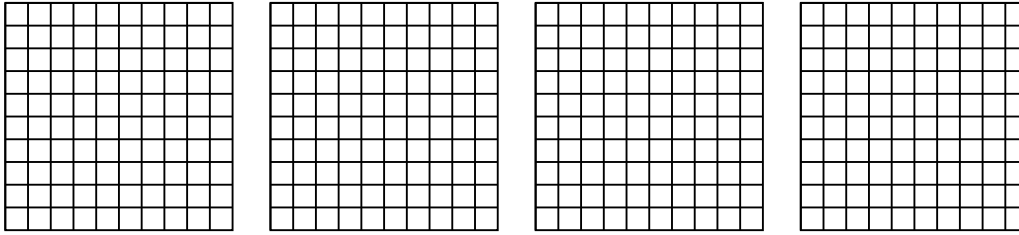


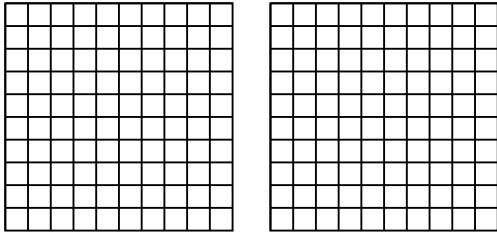


Wende die visuelle Methode an um jede Aufgabe zu lösen.

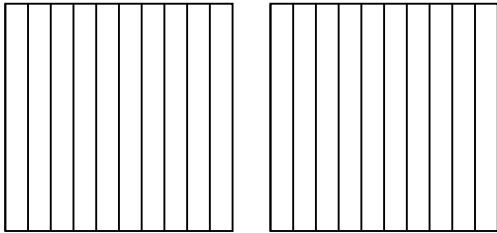
1) $4 \cdot 0,34 =$




2) $2 \cdot 0,79 =$



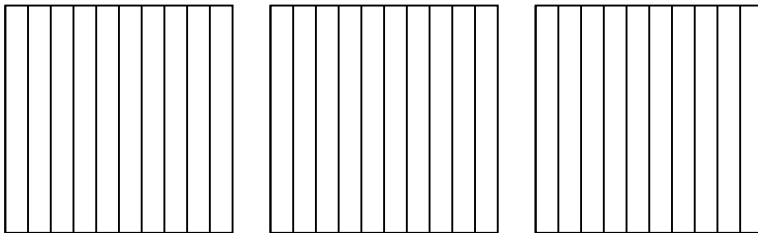
3) $2 \cdot 0,4 =$




4) $3 \cdot 0,59 =$



5) $3 \cdot 0,5 =$



6) $2 \cdot 0,32 =$



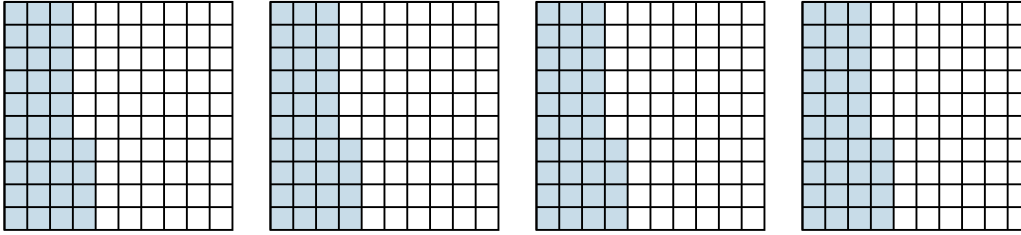
Antworten

- 1. _____
- 2. _____
- 3. _____
- 4. _____
- 5. _____
- 6. _____

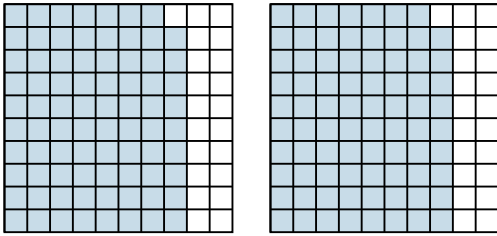


Wende die visuelle Methode an um jede Aufgabe zu lösen.

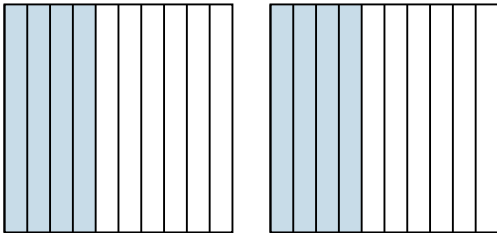
1) $4 \cdot 0,34 =$



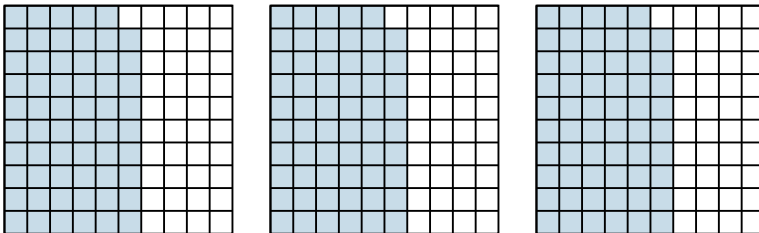
2) $2 \cdot 0,79 =$



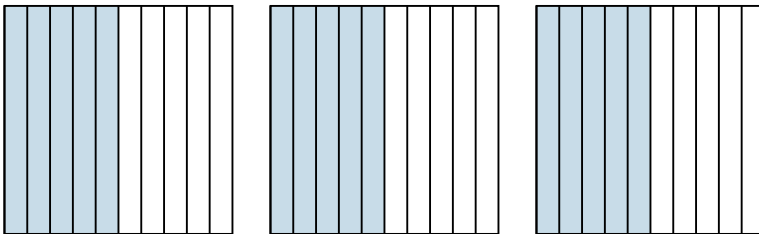
3) $2 \cdot 0,4 =$



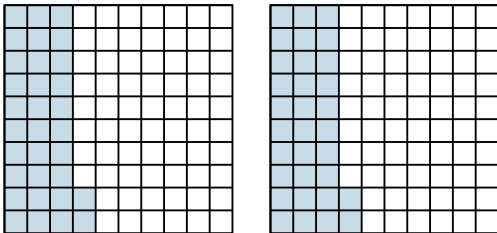
4) $3 \cdot 0,59 =$



5) $3 \cdot 0,5 =$



6) $2 \cdot 0,32 =$

**Antworten**

1. $\frac{136}{100} = 1,36$

2. $\frac{158}{100} = 1,58$

3. $\frac{8}{10} = 0,8$

4. $\frac{177}{100} = 1,77$

5. $\frac{15}{10} = 1,5$

6. $\frac{64}{100} = 0,64$