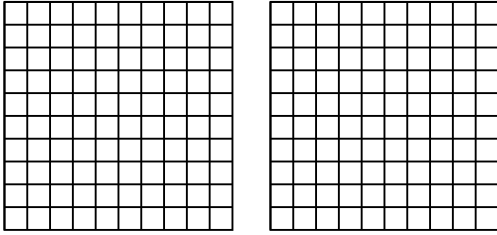


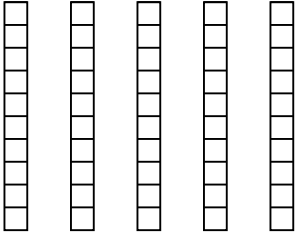


Wende die visuelle Methode an um jede Aufgabe zu lösen.

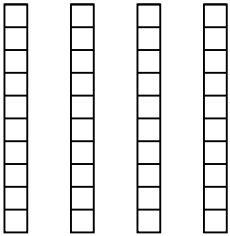
1) $2 \cdot 0,36 =$



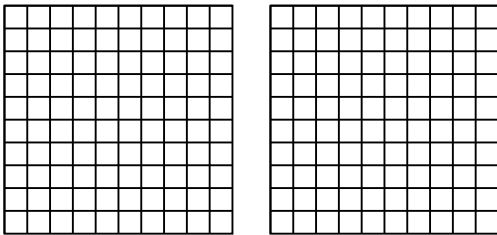
2) $5 \cdot 0,4 =$




3) $4 \cdot 0,6 =$



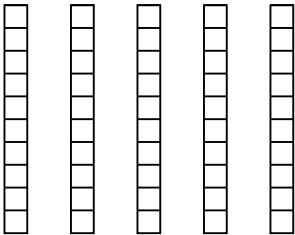
4) $2 \cdot 0,23 =$



5) $3 \cdot 0,76 =$



6) $5 \cdot 0,2 =$

**Antworten**

1. _____

2. _____

3. _____

4. _____

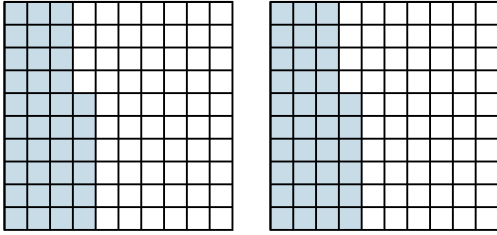
5. _____

6. _____

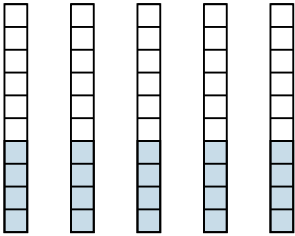


Wende die visuelle Methode an um jede Aufgabe zu lösen.

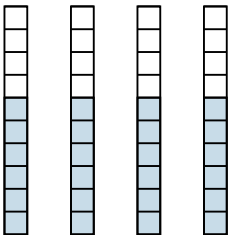
1) $2 \cdot 0,36 =$



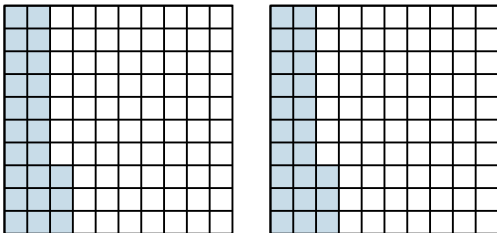
2) $5 \cdot 0,4 =$



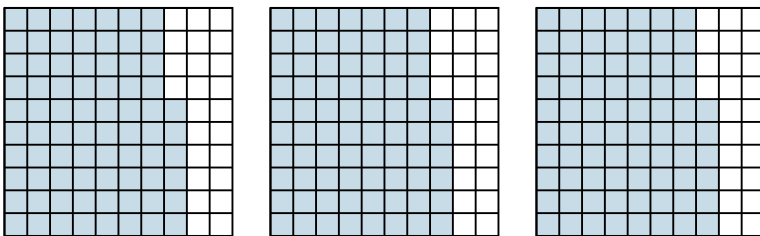
3) $4 \cdot 0,6 =$



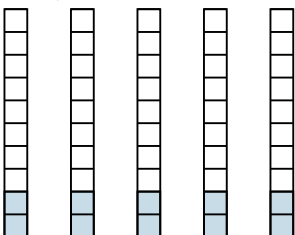
4) $2 \cdot 0,23 =$



5) $3 \cdot 0,76 =$



6) $5 \cdot 0,2 =$

**Antworten**

1. $\frac{72}{100} = 0,72$

2. $\frac{20}{10} = 2$

3. $\frac{24}{10} = 2,4$

4. $\frac{46}{100} = 0,46$

5. $\frac{228}{100} = 2,28$

6. $\frac{10}{10} = 1$