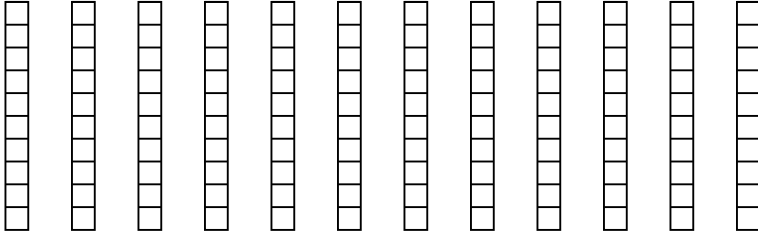


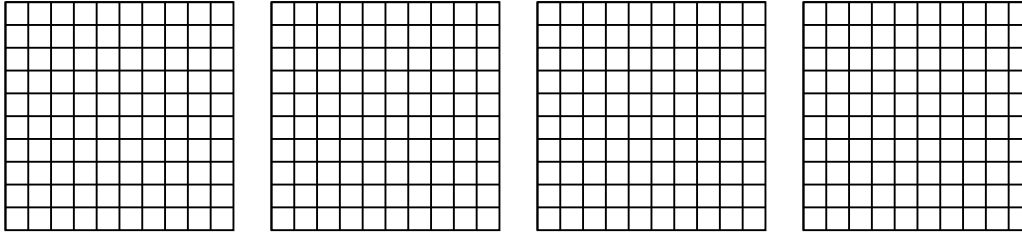


Wende die visuelle Methode an um jede Aufgabe zu lösen.

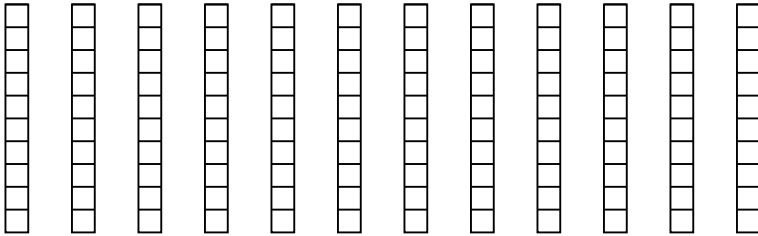
1) $12 \cdot 0,5 =$



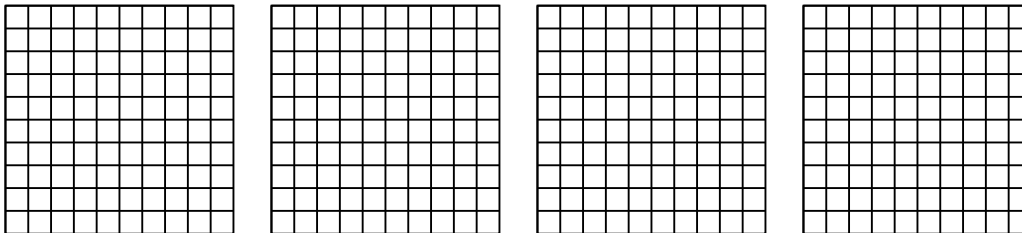
2) $4 \cdot 0,82 =$




3) $12 \cdot 0,4 =$



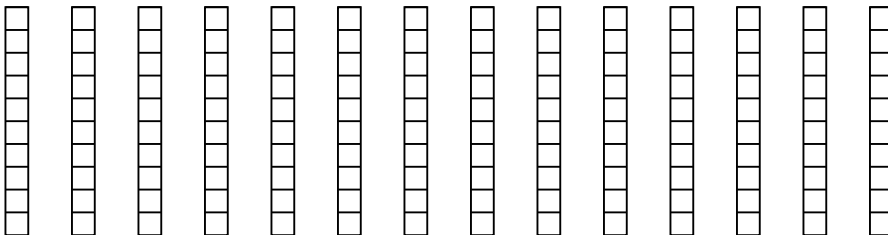
4) $4 \cdot 0,34 =$



5) $3 \cdot 0,72 =$



6) $14 \cdot 0,1 =$



Antworten

1. _____

2. _____

3. _____

4. _____

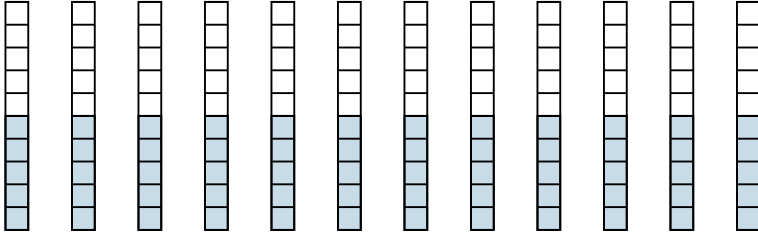
5. _____

6. _____

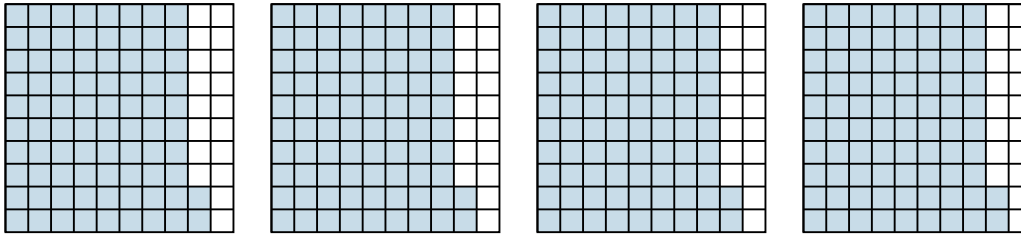


Wende die visuelle Methode an um jede Aufgabe zu lösen.

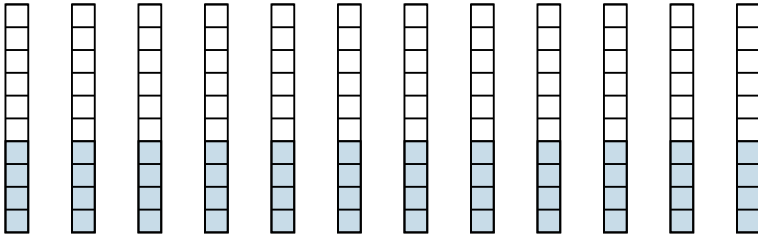
1) $12 \cdot 0,5 =$



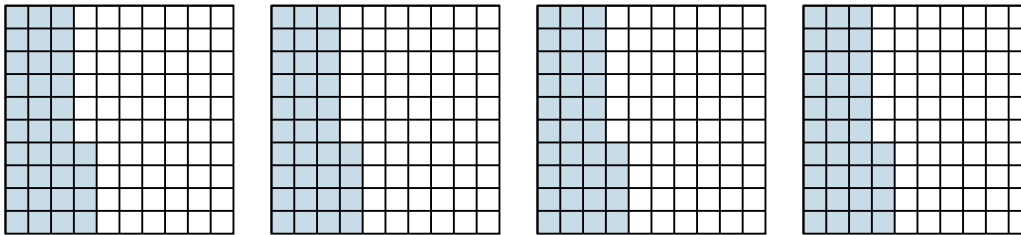
2) $4 \cdot 0,82 =$



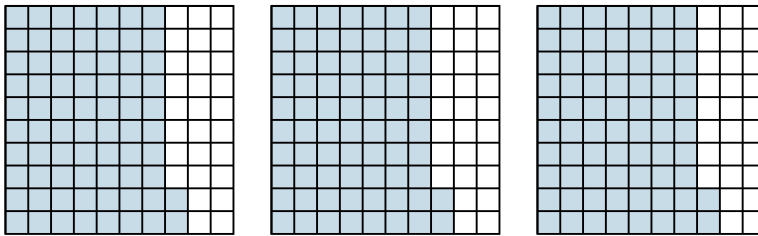
3) $12 \cdot 0,4 =$



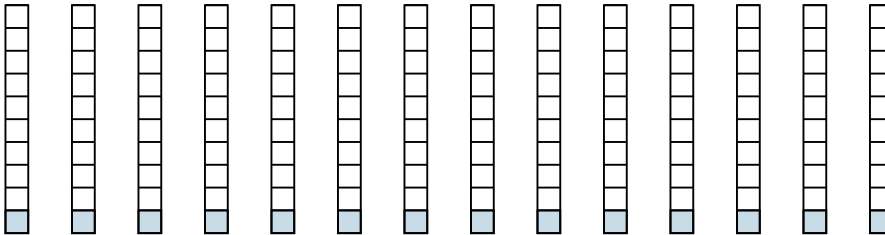
4) $4 \cdot 0,34 =$



5) $3 \cdot 0,72 =$



6) $14 \cdot 0,1 =$

**Antworten**

1. $\frac{60}{10} = 6$

2. $\frac{328}{100} = 3,28$

3. $\frac{48}{10} = 4,8$

4. $\frac{136}{100} = 1,36$

5. $\frac{216}{100} = 2,16$

6. $\frac{14}{10} = 1,4$