


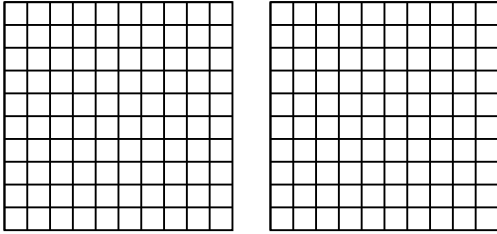


Wende die visuelle Methode an um jede Aufgabe zu lösen.

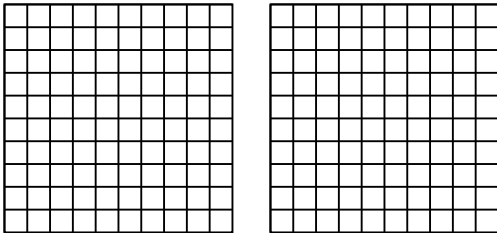
1) $3 \cdot 0,12 =$



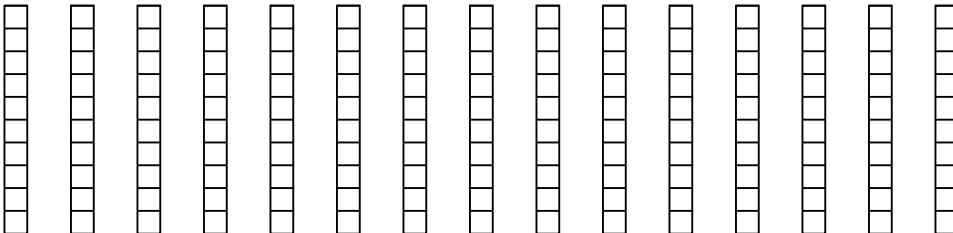
2) $2 \cdot 0,52 =$



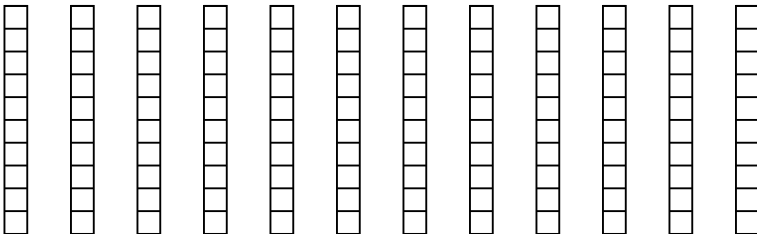
3) $2 \cdot 0,55 =$




4) $15 \cdot 0,4 =$



5) $12 \cdot 0,9 =$



6) $3 \cdot 0,39 =$

Antworten

1. _____

2. _____

3. _____

4. _____

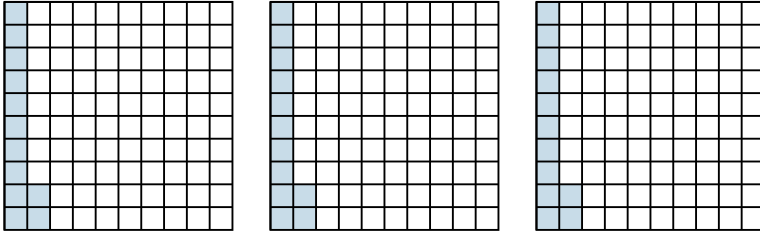
5. _____

6. _____

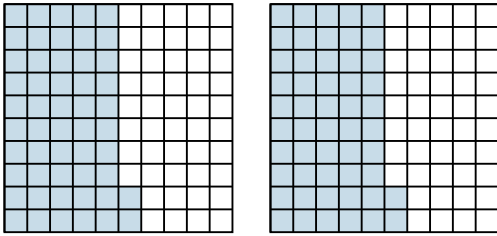


Wende die visuelle Methode an um jede Aufgabe zu lösen.

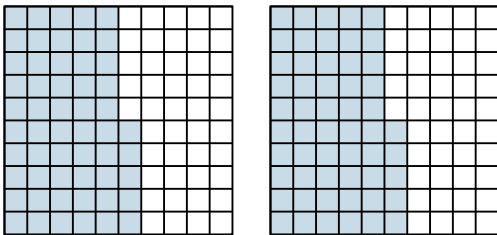
1) $3 \cdot 0,12 =$



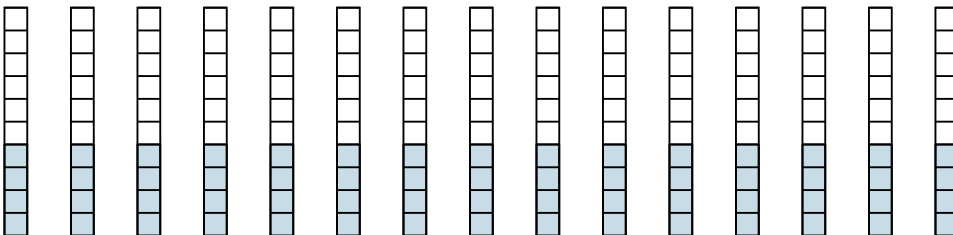
2) $2 \cdot 0,52 =$



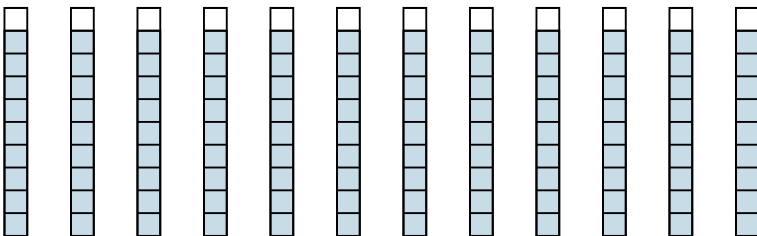
3) $2 \cdot 0,55 =$



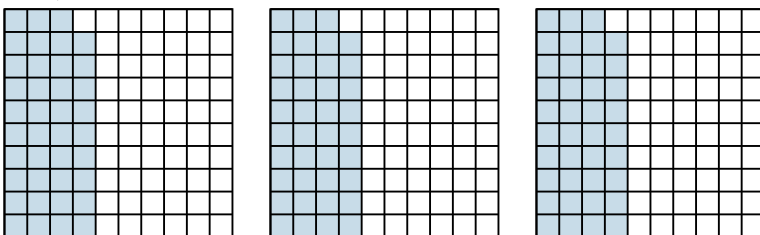
4) $15 \cdot 0,4 =$



5) $12 \cdot 0,9 =$



6) $3 \cdot 0,39 =$

**Antworten**

1. $\frac{36}{100} = 0,36$

2. $\frac{104}{100} = 1,04$

3. $\frac{110}{100} = 1,1$

4. $\frac{60}{10} = 6$

5. $\frac{108}{10} = 10,8$

6. $\frac{117}{100} = 1,17$