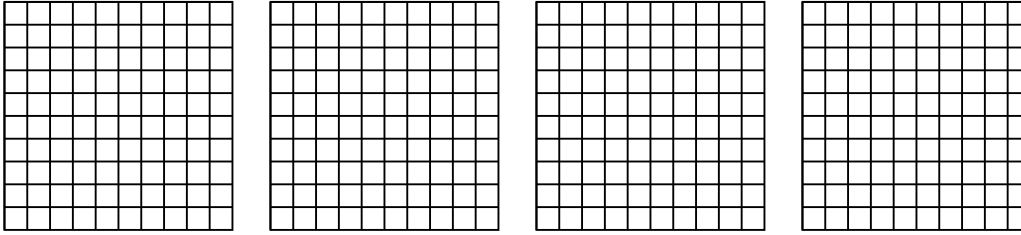


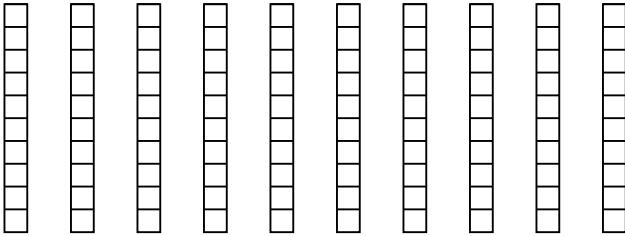


Wende die visuelle Methode an um jede Aufgabe zu lösen.

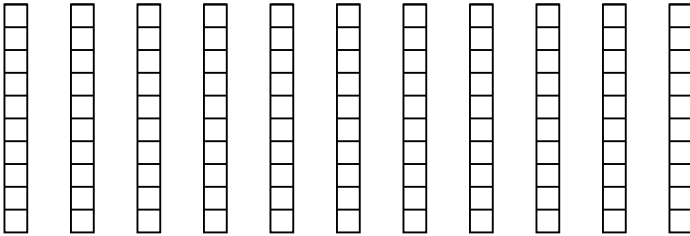
1) $4 \cdot 0,59 =$



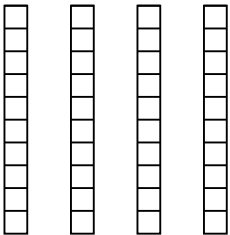
2) $10 \cdot 0,9 =$



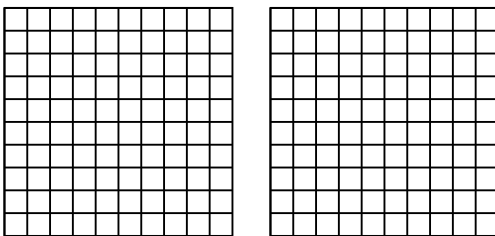
3) $11 \cdot 0,9 =$



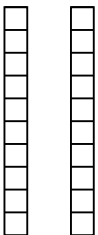
4) $4 \cdot 0,6 =$



5) $2 \cdot 0,25 =$



6) $2 \cdot 0,4 =$



Antworten

1. _____

2. _____

3. _____

4. _____

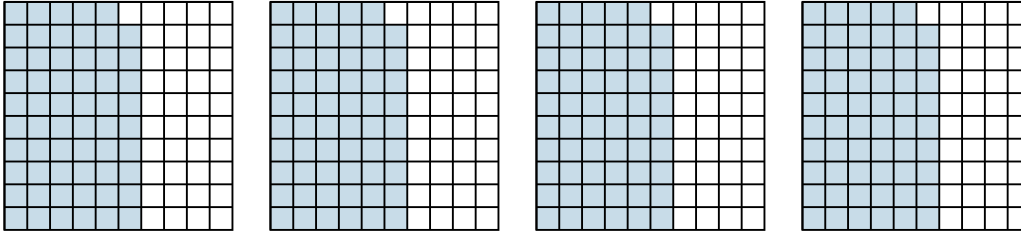
5. _____

6. _____

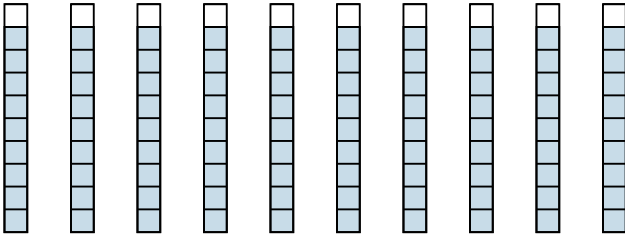


Wende die visuelle Methode an um jede Aufgabe zu lösen.

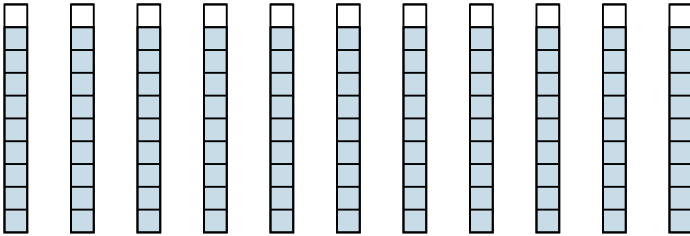
1) $4 \cdot 0,59 =$



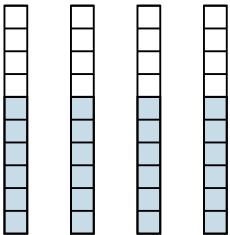
2) $10 \cdot 0,9 =$



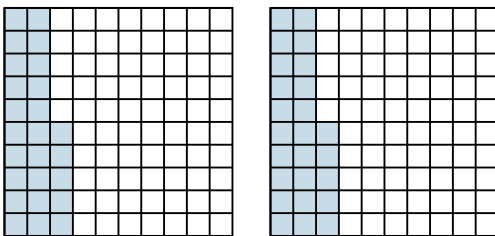
3) $11 \cdot 0,9 =$



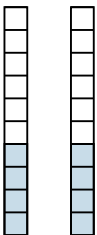
4) $4 \cdot 0,6 =$



5) $2 \cdot 0,25 =$



6) $2 \cdot 0,4 =$

**Antworten**

1. $\frac{236}{100} = 2,36$

2. $\frac{90}{10} = 9$

3. $\frac{99}{10} = 9,9$

4. $\frac{24}{10} = 2,4$

5. $\frac{50}{100} = 0,5$

6. $\frac{8}{10} = 0,8$