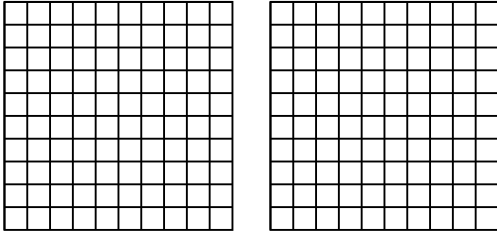


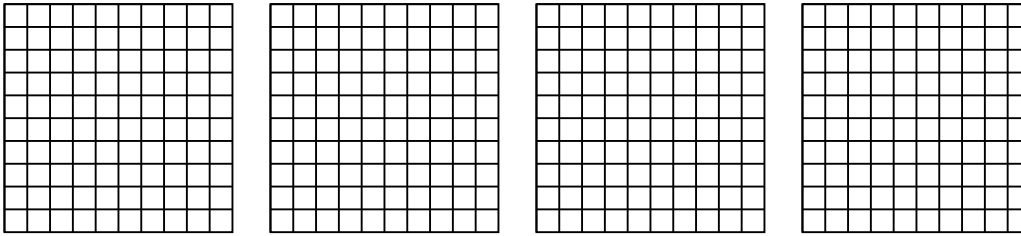


Wende die visuelle Methode an um jede Aufgabe zu lösen.

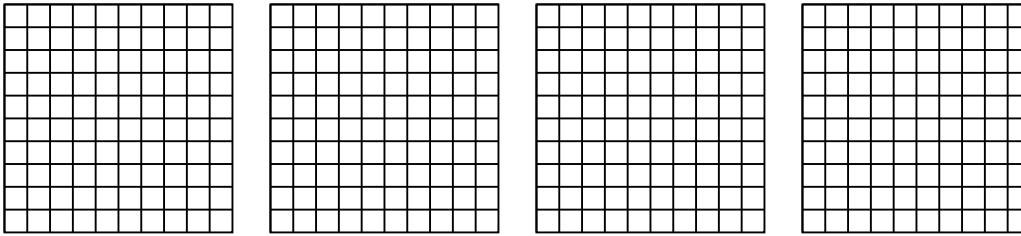
1) $2 \cdot 0,84 =$



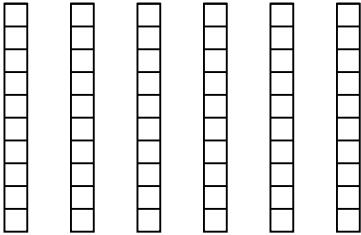
2) $4 \cdot 0,24 =$



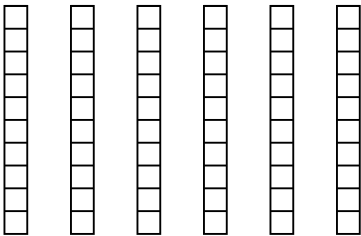
3) $4 \cdot 0,74 =$



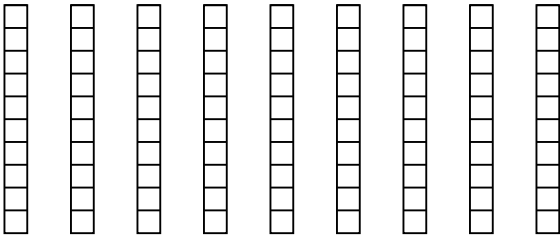
4) $6 \cdot 0,6 =$



5) $6 \cdot 0,8 =$



6) $9 \cdot 0,5 =$



Antworten

1. _____

2. _____

3. _____

4. _____

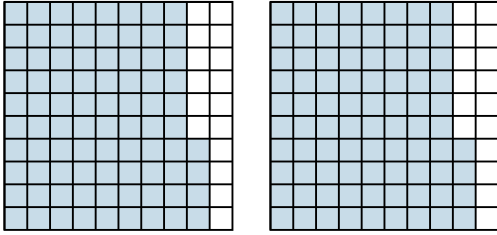
5. _____

6. _____

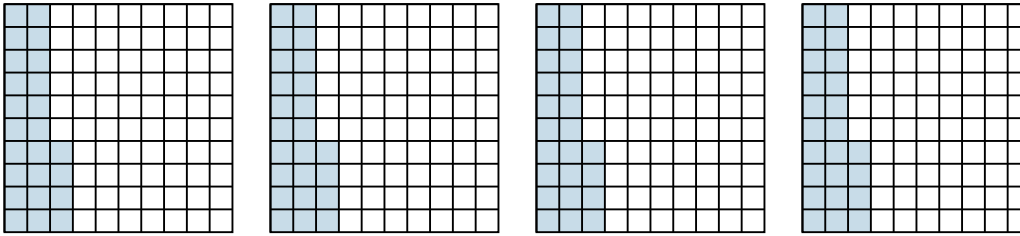


Wende die visuelle Methode an um jede Aufgabe zu lösen.

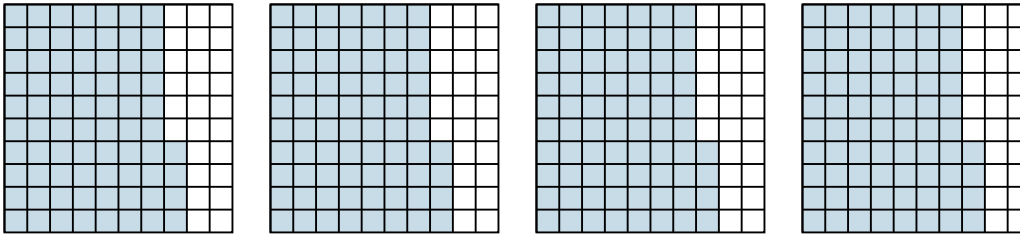
1) $2 \cdot 0,84 =$



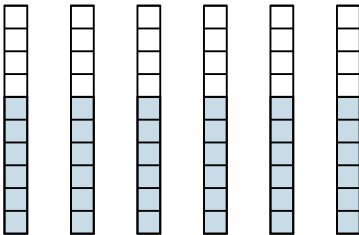
2) $4 \cdot 0,24 =$



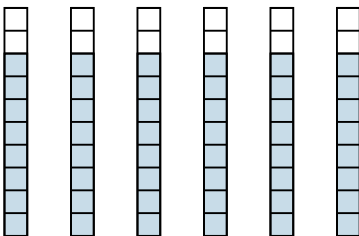
3) $4 \cdot 0,74 =$



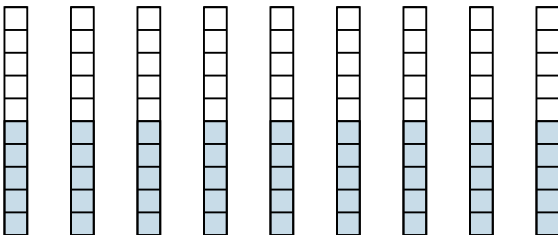
4) $6 \cdot 0,6 =$



5) $6 \cdot 0,8 =$



6) $9 \cdot 0,5 =$

**Antworten**

1. $\frac{168}{100} = 1,68$

2. $\frac{96}{100} = 0,96$

3. $\frac{296}{100} = 2,96$

4. $\frac{36}{10} = 3,6$

5. $\frac{48}{10} = 4,8$

6. $\frac{45}{10} = 4,5$