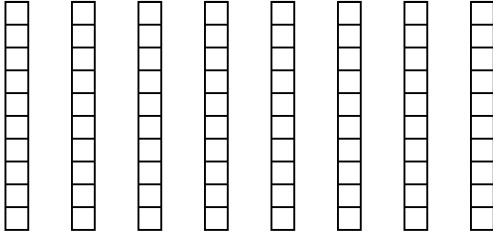


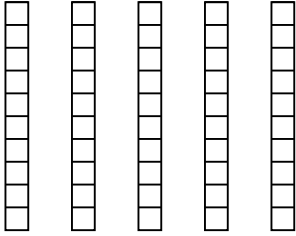


Wende die visuelle Methode an um jede Aufgabe zu lösen.


1) $8 \cdot 0,5 =$




2) $5 \cdot 0,4 =$




3) $3 \cdot 0,42 =$



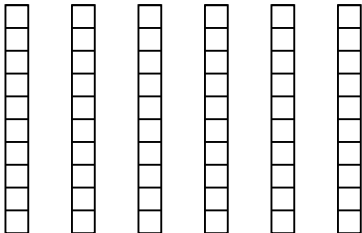
4) $3 \cdot 0,97 =$



5) $3 \cdot 0,25 =$



6) $6 \cdot 0,9 =$



Antworten

1. _____

2. _____

3. _____

4. _____

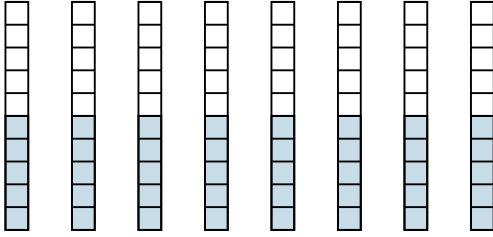
5. _____

6. _____

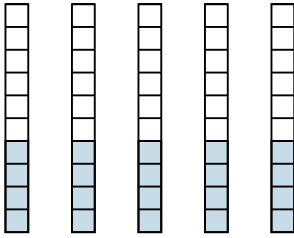


Wende die visuelle Methode an um jede Aufgabe zu lösen.

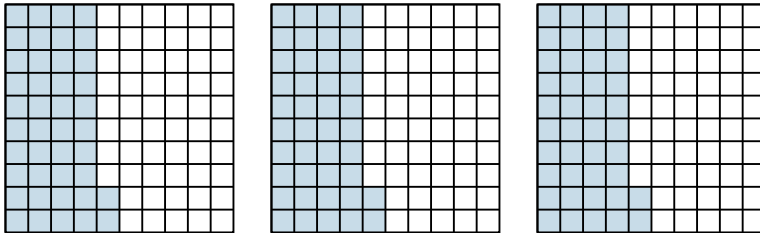
1) $8 \cdot 0,5 =$




2) $5 \cdot 0,4 =$



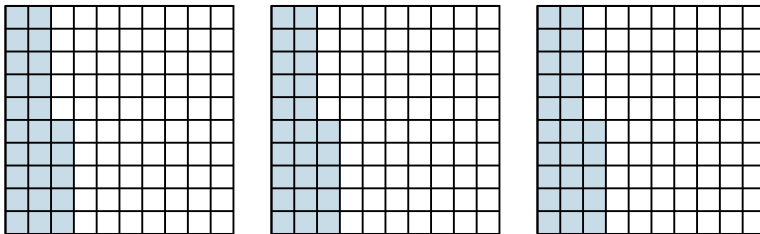
3) $3 \cdot 0,42 =$



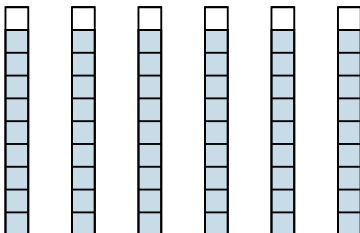
4) $3 \cdot 0,97 =$



5) $3 \cdot 0,25 =$



6) $6 \cdot 0,9 =$

**Antworten**

1. $\frac{40}{10} = 4$

2. $\frac{20}{10} = 2$

3. $\frac{126}{100} = 1,26$

4. $\frac{291}{100} = 2,91$

5. $\frac{75}{100} = 0,75$

6. $\frac{54}{10} = 5,4$